


Rectangle Measurements (C)

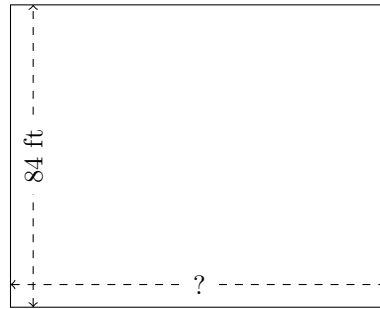
Calculate the missing measurements for each rectangle.

1.



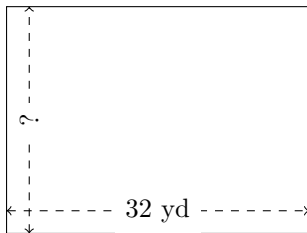
$$P = 160 \text{ m}$$
$$A = ?$$

2.



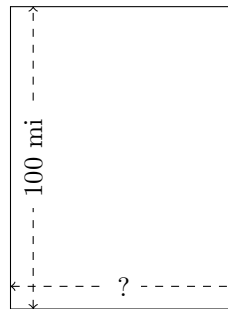
$$P = 378 \text{ ft}$$
$$A = ?$$

3.



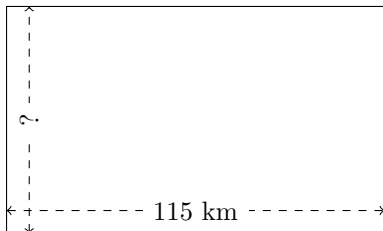
$$P = 112 \text{ yd}$$
$$A = ?$$

4.



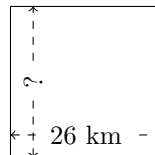
$$P = 350 \text{ mi}$$
$$A = ?$$

5.



$$P = 368 \text{ km}$$
$$A = ?$$

6.



$$P = 104 \text{ km}$$
$$A = ?$$