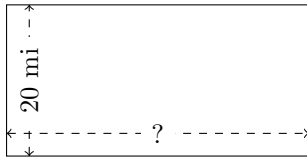


Rectangle Measurements (D)

Calculate the missing measurements for each rectangle.


1.



$$P = 120 \text{ mi}$$

$$A = ?$$


2.



$$P = 112 \text{ mi}$$

$$A = ?$$

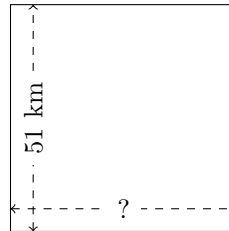
3.



$$P = 70 \text{ yd}$$

$$A = ?$$

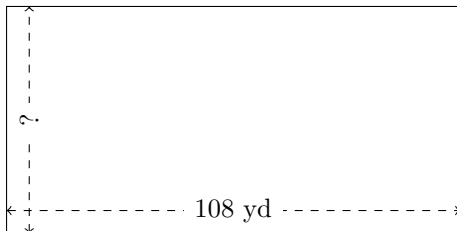
4.



$$P = 204 \text{ km}$$

$$A = ?$$


5.



$$P = 324 \text{ yd}$$

$$A = ?$$

6.



$$P = 208 \text{ in}$$

$$A = ?$$