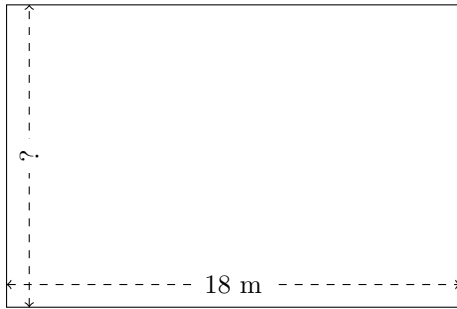


# Rectangle Measurements (C)

Calculate the missing measurements for each rectangle.

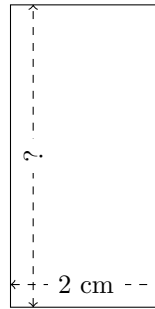
1.



$$P = 60 \text{ m}$$

$$A = ?$$

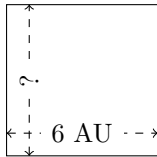
2.



$$P = 12 \text{ cm}$$

$$A = ?$$

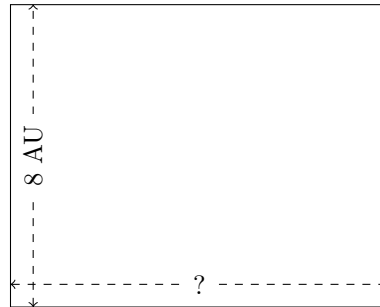
3.



$$P = 24 \text{ AU}$$

$$A = ?$$


4.



$$P = 36 \text{ AU}$$

$$A = ?$$


5.



$$P = 14 \text{ mm}$$

$$A = ?$$

6.



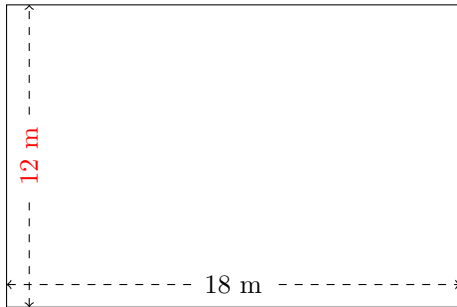
$$P = 18 \text{ nm}$$

$$A = ?$$

# Rectangle Measurements (C) Answers

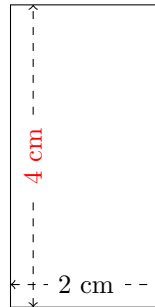
Calculate the missing measurements for each rectangle.

1.



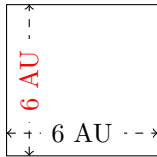
$$P = 60 \text{ m}$$
$$A = 216 \text{ m}^2$$

2.



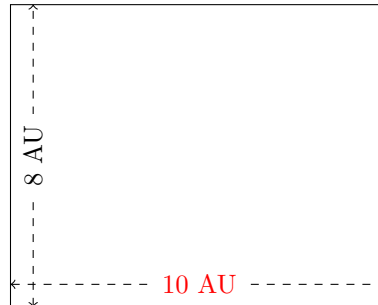
$$P = 12 \text{ cm}$$
$$A = 8 \text{ cm}^2$$

3.



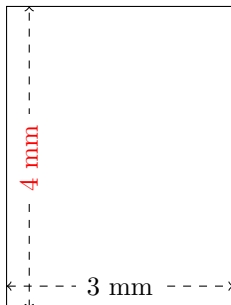
$$P = 24 \text{ AU}$$
$$A = 36 \text{ AU}^2$$

4.



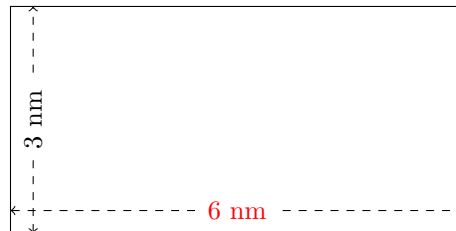
$$P = 36 \text{ AU}$$
$$A = 80 \text{ AU}^2$$

5.



$$P = 14 \text{ mm}$$
$$A = 12 \text{ mm}^2$$

6.



$$P = 18 \text{ nm}$$
$$A = 18 \text{ nm}^2$$