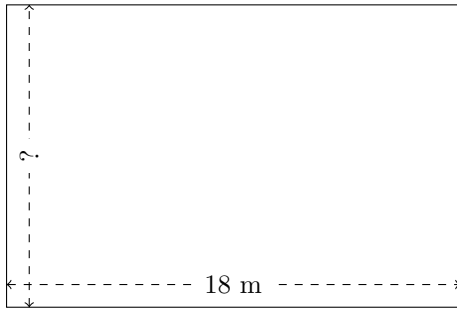


# Rectangle Measurements (C)

Calculate the missing measurements for each rectangle.

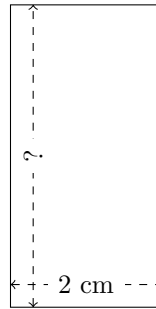
1.



$$P = 60 \text{ m}$$

$$A = ?$$

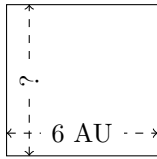
2.



$$P = 12 \text{ cm}$$

$$A = ?$$

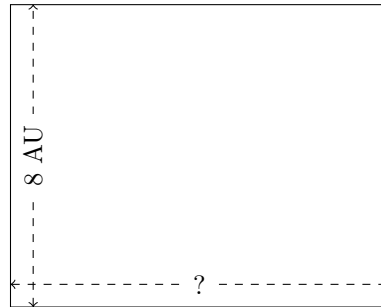
3.



$$P = 24 \text{ AU}$$

$$A = ?$$


4.



$$P = 36 \text{ AU}$$

$$A = ?$$


5.



$$P = 14 \text{ mm}$$

$$A = ?$$

6.



$$P = 18 \text{ nm}$$

$$A = ?$$