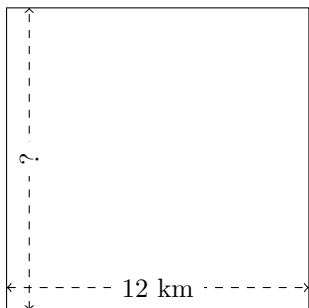


Rectangle Measurements (D)

Calculate the missing measurements for each rectangle.

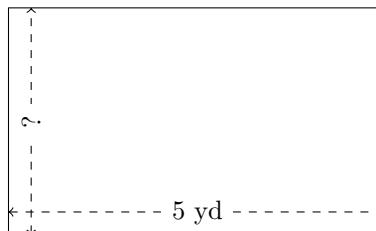
1.



$$P = 48 \text{ km}$$

$$A = ?$$

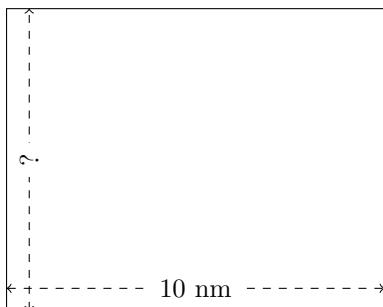
2.



$$P = 16 \text{ yd}$$

$$A = ?$$


3.



$$P = 36 \text{ nm}$$

$$A = ?$$

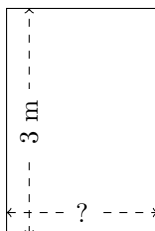
4.



$$P = 42 \text{ cm}$$

$$A = ?$$

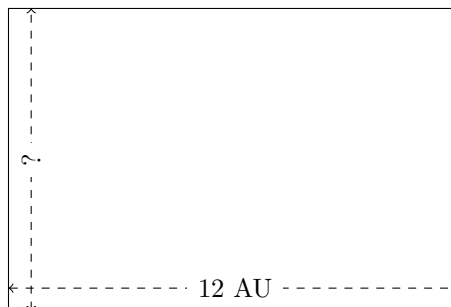
5.



$$P = 10 \text{ m}$$

$$A = ?$$

6.



$$P = 40 \text{ AU}$$

$$A = ?$$