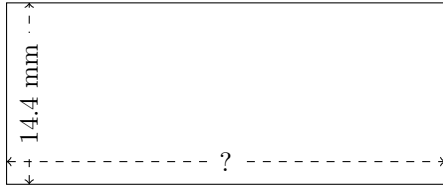


# Rectangle Measurements (C)

Calculate the missing measurements for each rectangle.

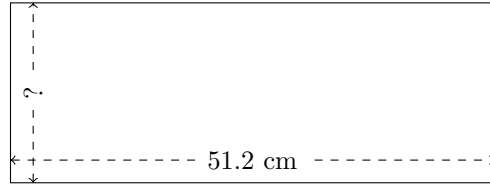
1.



$$P = ?$$

$$A = 501.12 \text{ mm}^2$$

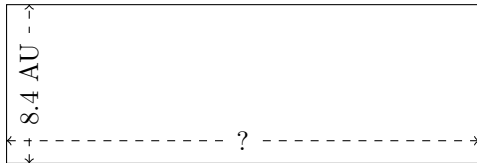
2.



$$P = ?$$

$$A = 974.848 \text{ cm}^2$$

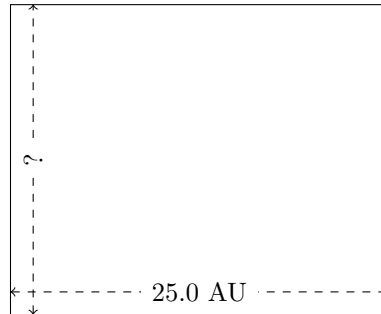
3.



$$P = ?$$

$$A = 210 \text{ AU}^2$$

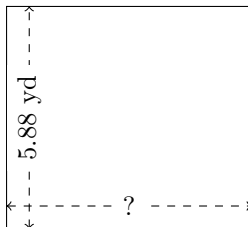
4.



$$P = ?$$

$$A = 512.5 \text{ AU}^2$$

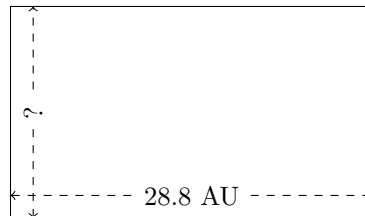
5.



$$P = ?$$

$$A = 38.1024 \text{ yd}^2$$

6.



$$P = ?$$

$$A = 483.84 \text{ AU}^2$$