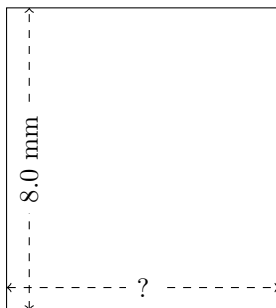


Rectangle Measurements (F)

Calculate the missing measurements for each rectangle.


1.



$$P = ?$$

$$A = 57.76 \text{ mm}^2$$


2.



$$P = ?$$

$$A = 376.96 \text{ yd}^2$$

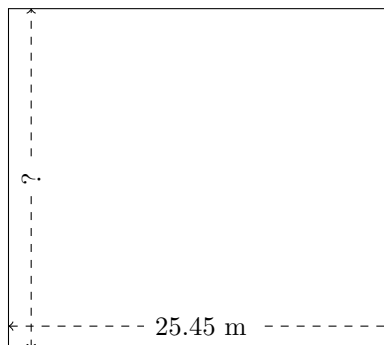
3.



$$P = ?$$

$$A = 640.1625 \text{ mi}^2$$

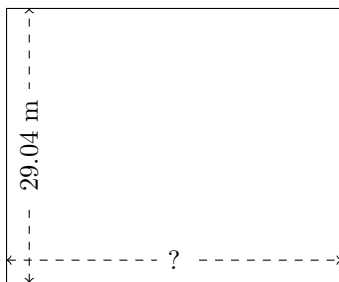
4.



$$P = ?$$

$$A = 572.625 \text{ m}^2$$

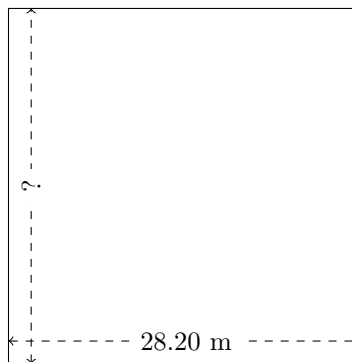
5.



$$P = ?$$

$$A = 1029.1776 \text{ m}^2$$

6.



$$P = ?$$

$$A = 795.24 \text{ m}^2$$