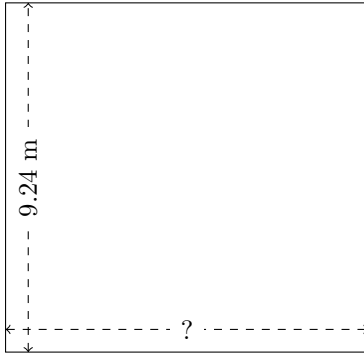


# Rectangle Measurements (G)

Calculate the missing measurements for each rectangle.

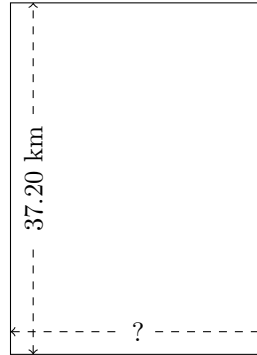
1.



$$P = ?$$

$$A = 88.704 \text{ m}^2$$

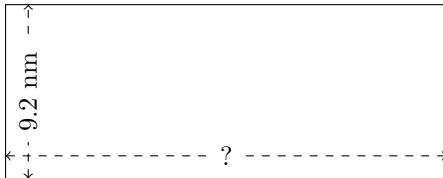
2.



$$P = ?$$

$$A = 1005.888 \text{ km}^2$$

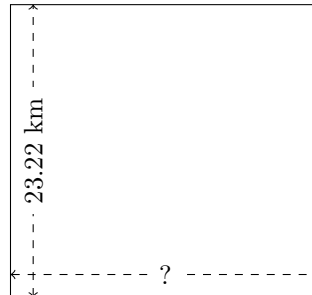
3.



$$P = ?$$

$$A = 214.912 \text{ nm}^2$$


4.



$$P = ?$$

$$A = 571.212 \text{ km}^2$$

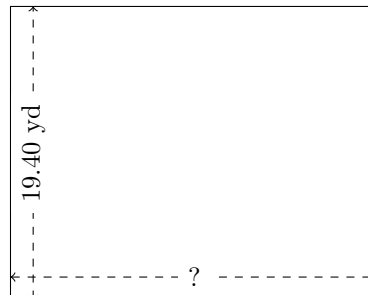
5.



$$P = ?$$

$$A = 1056.636 \text{ AU}^2$$

6.



$$P = ?$$

$$A = 472.39 \text{ yd}^2$$