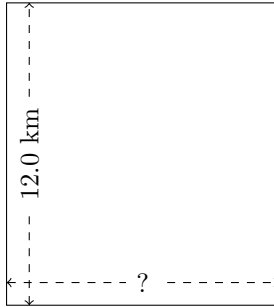


Rectangle Measurements (I)

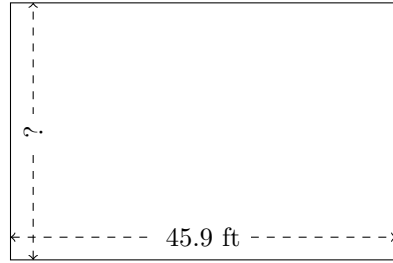
Calculate the missing measurements for each rectangle.

1.



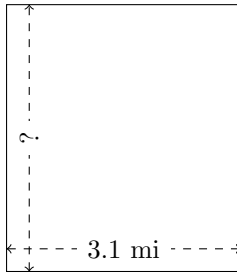
$$P = ?$$
$$A = 129.6 \text{ km}^2$$

2.



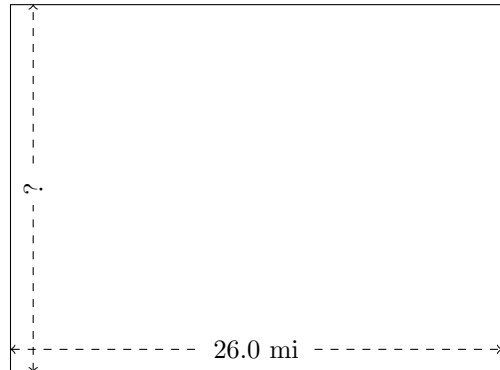
$$P = ?$$
$$A = 1404.54 \text{ ft}^2$$

3.



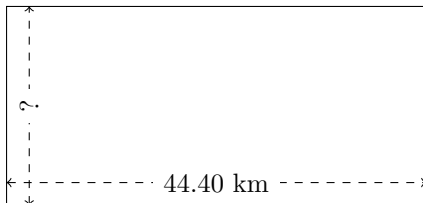
$$P = ?$$
$$A = 10.943 \text{ mi}^2$$

4.



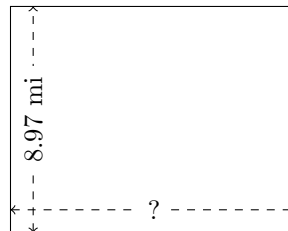
$$P = ?$$
$$A = 505.44 \text{ mi}^2$$

5.



$$P = ?$$
$$A = 934.176 \text{ km}^2$$

6.



$$P = ?$$
$$A = 102.258 \text{ mi}^2$$