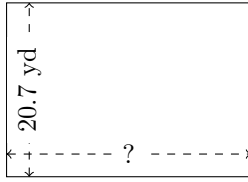


Rectangle Measurements (J)

Calculate the missing measurements for each rectangle.

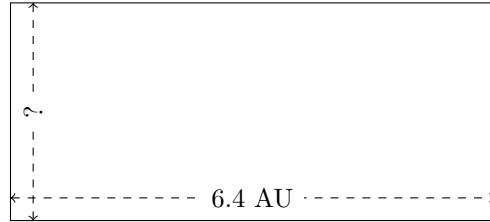
1.



$$P = ?$$

$$A = 601.749 \text{ yd}^2$$

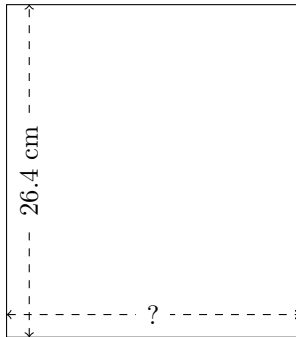
2.



$$P = ?$$

$$A = 18.432 \text{ AU}^2$$

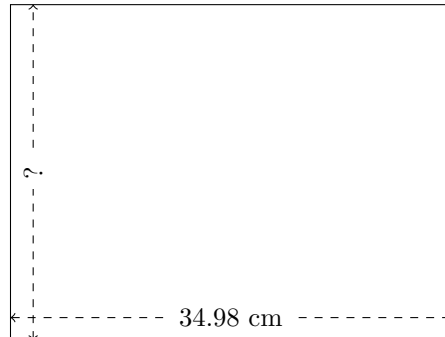
3.



$$P = ?$$

$$A = 614.592 \text{ cm}^2$$

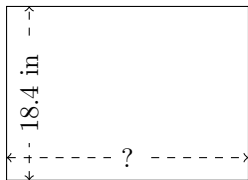
4.



$$P = ?$$

$$A = 931.8672 \text{ cm}^2$$

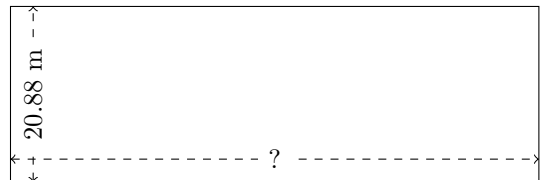
5.



$$P = ?$$

$$A = 471.04 \text{ in}^2$$

6.



$$P = ?$$

$$A = 1313.5608 \text{ m}^2$$