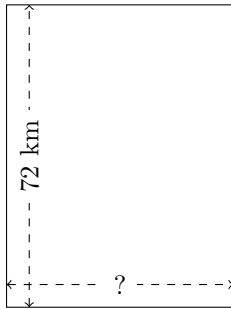


# Rectangle Measurements (C)

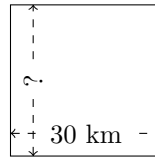
Calculate the missing measurements for each rectangle.

1.



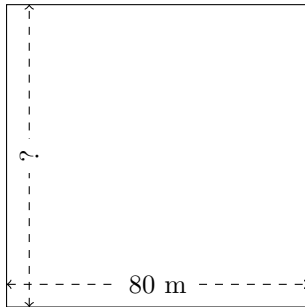
$$P = ?$$
$$A = 3888 \text{ km}^2$$

2.



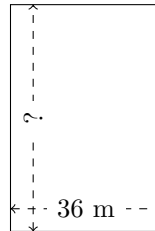
$$P = ?$$
$$A = 900 \text{ km}^2$$

3.



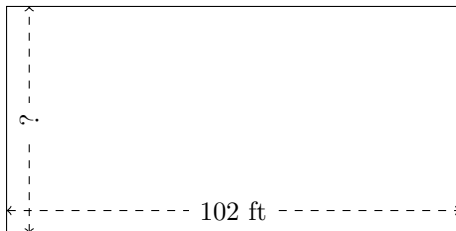
$$P = ?$$
$$A = 6400 \text{ m}^2$$

4.



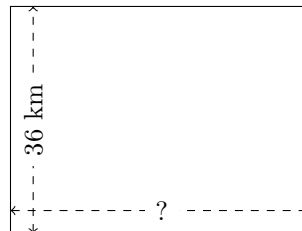
$$P = ?$$
$$A = 1944 \text{ m}^2$$

5.



$$P = ?$$
$$A = 5202 \text{ ft}^2$$

6.



$$P = ?$$
$$A = 1728 \text{ km}^2$$