


Rectangle Measurements (E)

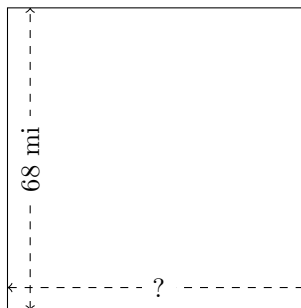
Calculate the missing measurements for each rectangle.

1.



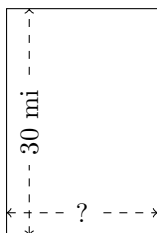
$$P = ?$$
$$A = 1458 \text{ mi}^2$$

2.



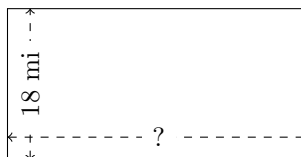
$$P = ?$$
$$A = 4624 \text{ mi}^2$$

3.



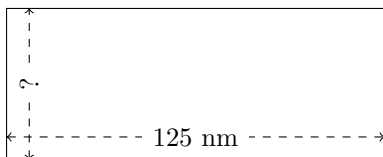
$$P = ?$$
$$A = 600 \text{ mi}^2$$

4.




$$P = ?$$
$$A = 648 \text{ mi}^2$$

5.



$$P = ?$$
$$A = 6250 \text{ nm}^2$$

6.



$$P = ?$$
$$A = 1728 \text{ AU}^2$$