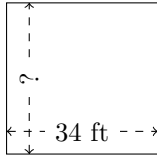


Rectangle Measurements (H)

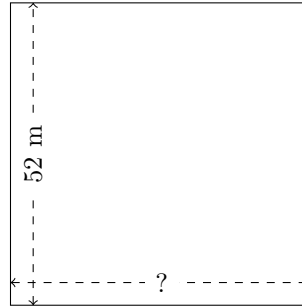
Calculate the missing measurements for each rectangle.

1.




$$P = ?$$
$$A = 1156 \text{ ft}^2$$

2.



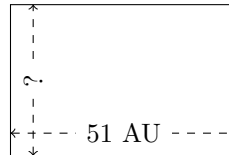
$$P = ?$$
$$A = 2704 \text{ m}^2$$

3.



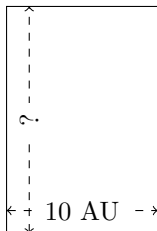
$$P = ?$$
$$A = 375 \text{ km}^2$$

4.



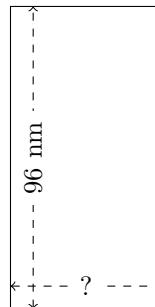
$$P = ?$$
$$A = 1734 \text{ AU}^2$$

5.



$$P = ?$$
$$A = 150 \text{ AU}^2$$

6.



$$P = ?$$
$$A = 4608 \text{ nm}^2$$