


Rectangle Measurements (J)

Calculate the missing measurements for each rectangle.

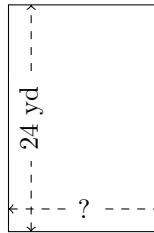
1.



$$P = ?$$

$$A = 1690 \text{ mm}^2$$

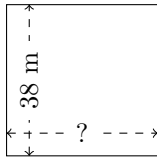
2.



$$P = ?$$

$$A = 384 \text{ yd}^2$$

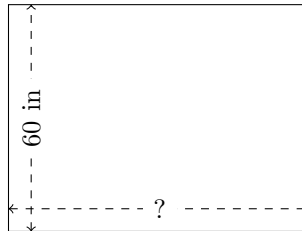
3.



$$P = ?$$

$$A = 1444 \text{ m}^2$$

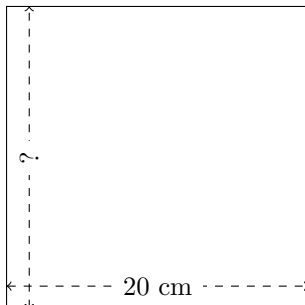
4.



$$P = ?$$

$$A = 4800 \text{ in}^2$$

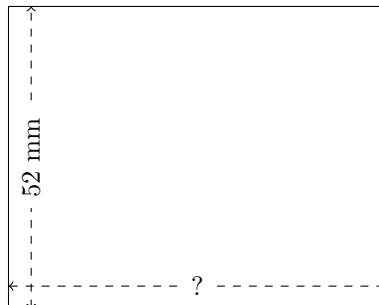
5.



$$P = ?$$

$$A = 400 \text{ cm}^2$$

6.



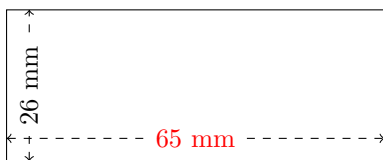
$$P = ?$$

$$A = 3380 \text{ mm}^2$$

Rectangle Measurements (J) Answers

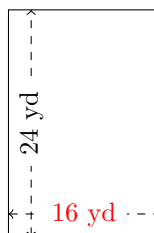
Calculate the missing measurements for each rectangle.

1.



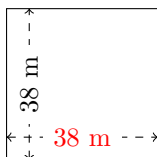
$$P = 182 \text{ mm}$$
$$A = 1690 \text{ mm}^2$$

2.



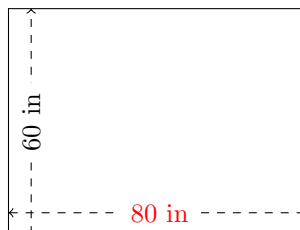
$$P = 80 \text{ yd}$$
$$A = 384 \text{ yd}^2$$

3.



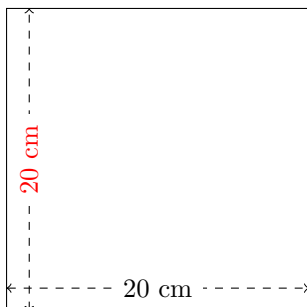
$$P = 152 \text{ m}$$
$$A = 1444 \text{ m}^2$$

4.



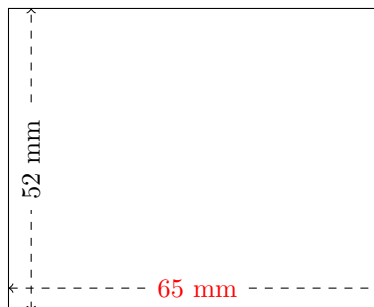
$$P = 280 \text{ in}$$
$$A = 4800 \text{ in}^2$$

5.



$$P = 80 \text{ cm}$$
$$A = 400 \text{ cm}^2$$

6.



$$P = 234 \text{ mm}$$
$$A = 3380 \text{ mm}^2$$