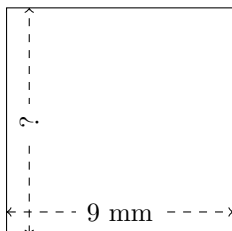


Rectangle Measurements (A)

Calculate the missing measurements for each rectangle.

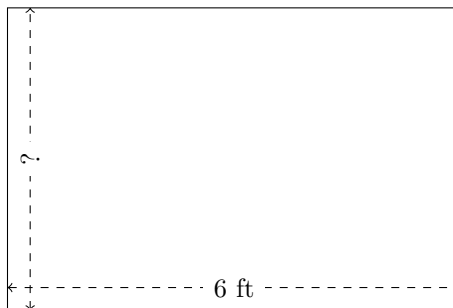
1.



$$P = ?$$

$$A = 81 \text{ mm}^2$$

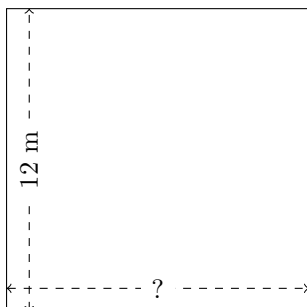
2.



$$P = ?$$

$$A = 24 \text{ ft}^2$$


3.



$$P = ?$$

$$A = 144 \text{ m}^2$$

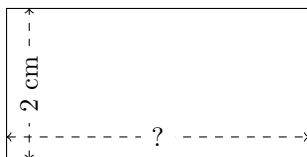
4.



$$P = ?$$

$$A = 90 \text{ mm}^2$$


5.



$$P = ?$$

$$A = 8 \text{ cm}^2$$

6.



$$P = ?$$

$$A = 180 \text{ m}^2$$