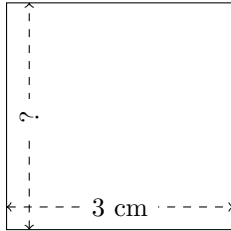


Rectangle Measurements (C)


Calculate the missing measurements for each rectangle.

1.



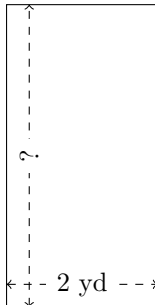
$$P = ?$$
$$A = 9 \text{ cm}^2$$

2.




$$P = ?$$
$$A = 180 \text{ m}^2$$

3.



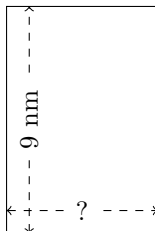
$$P = ?$$
$$A = 8 \text{ yd}^2$$

4.



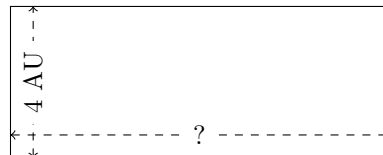
$$P = ?$$
$$A = 216 \text{ mm}^2$$

5.



$$P = ?$$
$$A = 54 \text{ nm}^2$$

6.



$$P = ?$$
$$A = 40 \text{ AU}^2$$