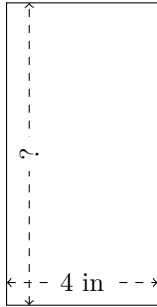


Rectangle Measurements (D)

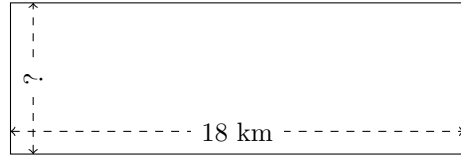
Calculate the missing measurements for each rectangle.

1.



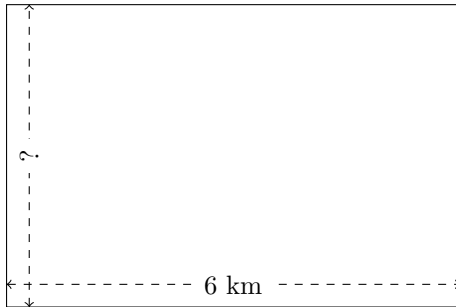
$$P = ?$$
$$A = 32 \text{ in}^2$$

2.



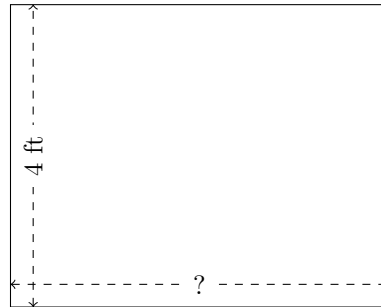
$$P = ?$$
$$A = 108 \text{ km}^2$$

3.



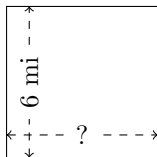
$$P = ?$$
$$A = 24 \text{ km}^2$$

4.



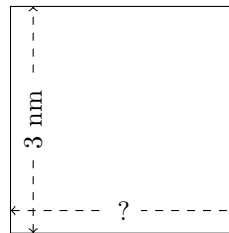
$$P = ?$$
$$A = 20 \text{ ft}^2$$

5.



$$P = ?$$
$$A = 36 \text{ mi}^2$$

6.



$$P = ?$$
$$A = 9 \text{ nm}^2$$