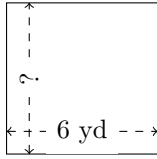


Rectangle Measurements (G)

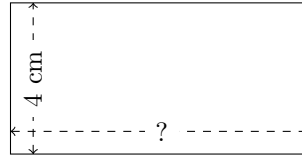
Calculate the missing measurements for each rectangle.

1.



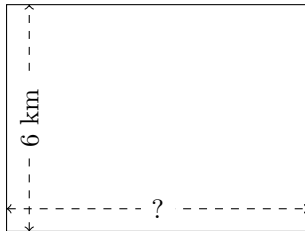
$$P = ?$$
$$A = 36 \text{ yd}^2$$

2.



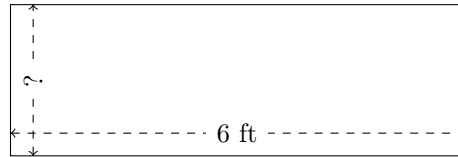
$$P = ?$$
$$A = 32 \text{ cm}^2$$

3.



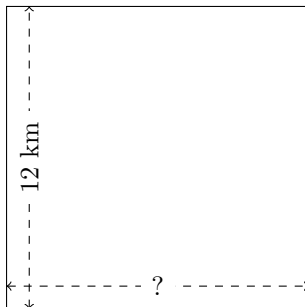
$$P = ?$$
$$A = 48 \text{ km}^2$$

4.



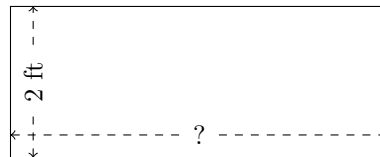
$$P = ?$$
$$A = 12 \text{ ft}^2$$

5.



$$P = ?$$
$$A = 144 \text{ km}^2$$

6.

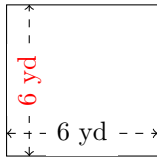


$$P = ?$$
$$A = 10 \text{ ft}^2$$

Rectangle Measurements (G) Answers

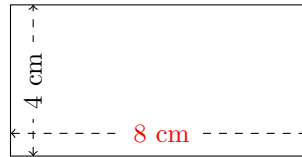
Calculate the missing measurements for each rectangle.

1.



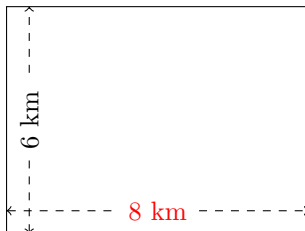
$$P = 24 \text{ yd}$$
$$A = 36 \text{ yd}^2$$

2.



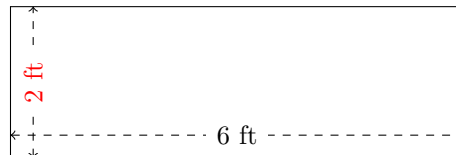
$$P = 24 \text{ cm}$$
$$A = 32 \text{ cm}^2$$

3.



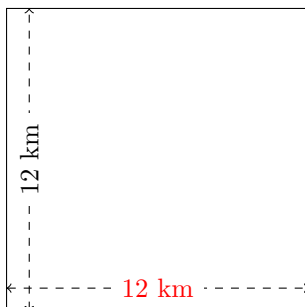
$$P = 28 \text{ km}$$
$$A = 48 \text{ km}^2$$

4.



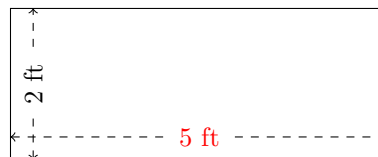
$$P = 16 \text{ ft}$$
$$A = 12 \text{ ft}^2$$

5.



$$P = 48 \text{ km}$$
$$A = 144 \text{ km}^2$$

6.



$$P = 14 \text{ ft}$$
$$A = 10 \text{ ft}^2$$