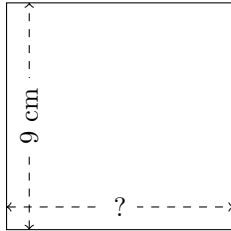


# Rectangle Measurements (H)

Calculate the missing measurements for each rectangle.


1.



$$P = ?$$

$$A = 81 \text{ cm}^2$$

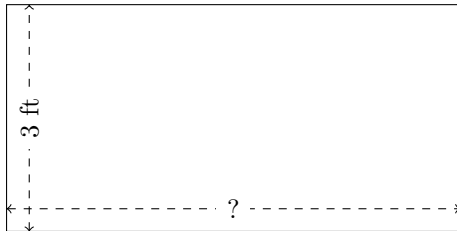
2.



$$P = ?$$

$$A = 216 \text{ m}^2$$

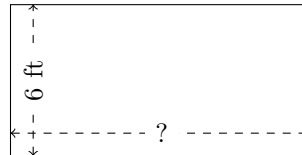
3.



$$P = ?$$

$$A = 18 \text{ ft}^2$$


4.



$$P = ?$$

$$A = 72 \text{ ft}^2$$


5.



$$P = ?$$

$$A = 60 \text{ yd}^2$$

6.



$$P = ?$$

$$A = 40 \text{ km}^2$$