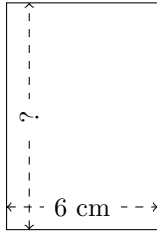


# Rectangle Measurements (I)

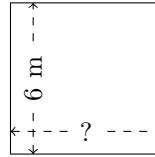
Calculate the missing measurements for each rectangle.

1.



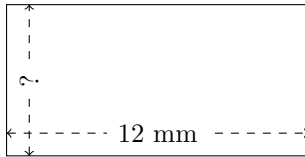
$$P = ?$$
$$A = 54 \text{ cm}^2$$

2.



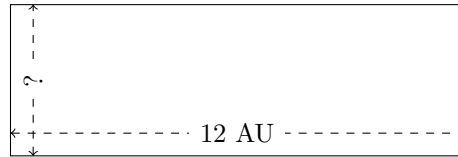
$$P = ?$$
$$A = 36 \text{ m}^2$$

3.



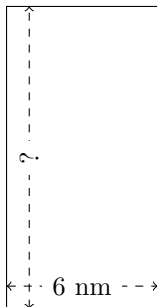
$$P = ?$$
$$A = 72 \text{ mm}^2$$

4.



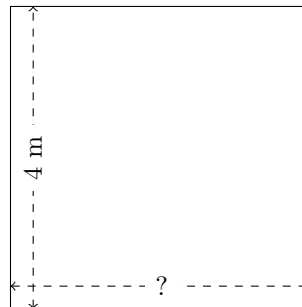
$$P = ?$$
$$A = 48 \text{ AU}^2$$

5.



$$P = ?$$
$$A = 72 \text{ nm}^2$$

6.



$$P = ?$$
$$A = 16 \text{ m}^2$$