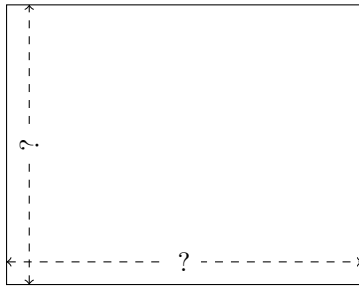


Rectangle Measurements (D)


Calculate the missing measurements for each rectangle.

1.




$$P = 168 \text{ nm}$$
$$A = 1739 \text{ nm}^2$$

2.



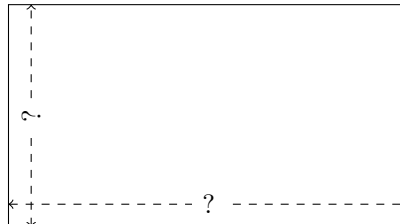
$$P = 133.2 \text{ mi}$$
$$A = 1093.68 \text{ mi}^2$$

3.



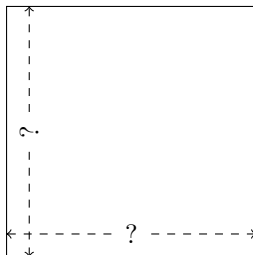
$$P = 106.2 \text{ yd}$$
$$A = 698.4 \text{ yd}^2$$

4.




$$P = 49.44 \text{ km}$$
$$A = 140.238 \text{ km}^2$$

5.



$$P = 79.32 \text{ nm}$$
$$A = 393.228 \text{ nm}^2$$

6.



$$P = 75.84 \text{ mm}$$
$$A = 352.928 \text{ mm}^2$$