


Rectangle Measurements (G)


Calculate the missing measurements for each rectangle.

1.



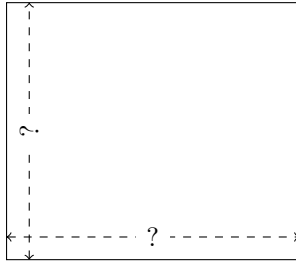
$$P = 58.74 \text{ ft}$$
$$A = 208.44 \text{ ft}^2$$

2.



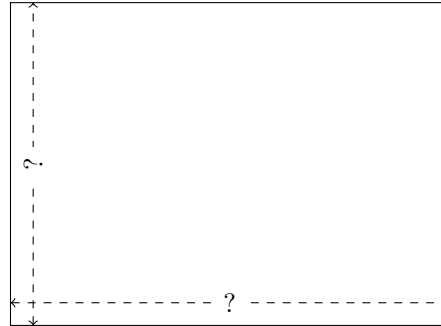
$$P = 74.72 \text{ cm}$$
$$A = 320.64 \text{ cm}^2$$

3.



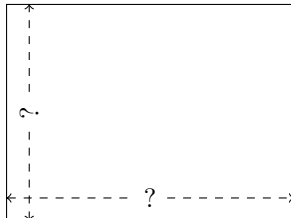
$$P = 116.32 \text{ ft}$$
$$A = 842.112 \text{ ft}^2$$

4.




$$P = 80.56 \text{ cm}$$
$$A = 396.256 \text{ cm}^2$$

5.



$$P = 66.6 \text{ mi}$$
$$A = 271.7 \text{ mi}^2$$

6.



$$P = 124.74 \text{ yd}$$
$$A = 937.517 \text{ yd}^2$$