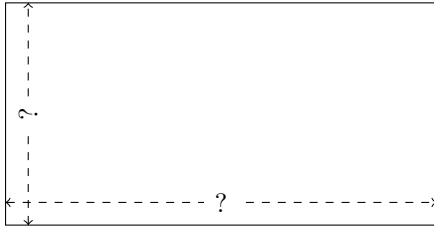


Rectangle Measurements (I)

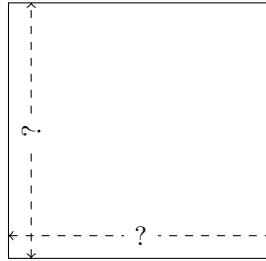
Calculate the missing measurements for each rectangle.

1.



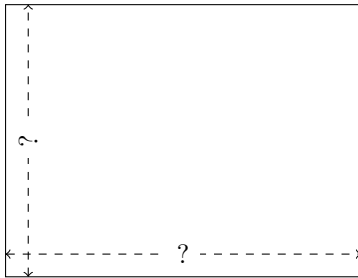
$$P = 17.28 \text{ mm}$$
$$A = 16.758 \text{ mm}^2$$

2.



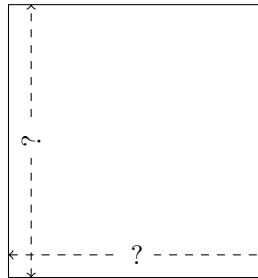
$$P = 96.32 \text{ yd}$$
$$A = 579.67 \text{ yd}^2$$

3.




$$P = 66.4 \text{ ft}$$
$$A = 270.72 \text{ ft}^2$$

4.




$$P = 28.04 \text{ nm}$$
$$A = 49.096 \text{ nm}^2$$

5.



$$P = 101 \text{ in}$$
$$A = 623.5 \text{ in}^2$$

6.



$$P = 69.76 \text{ m}$$
$$A = 297.6 \text{ m}^2$$