


Rectangle Measurements (A)

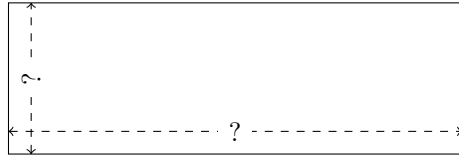
Calculate the missing measurements for each rectangle.

1.



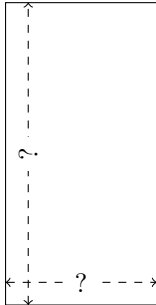
$$P = 154 \text{ ft}$$
$$A = 1452 \text{ ft}^2$$

2.




$$P = 304 \text{ m}$$
$$A = 4332 \text{ m}^2$$

3.




$$P = 108 \text{ km}$$
$$A = 648 \text{ km}^2$$

4.



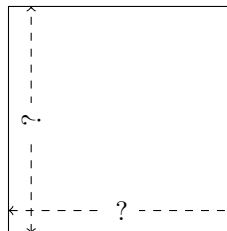
$$P = 400 \text{ mm}$$
$$A = 10,000 \text{ mm}^2$$

5.



$$P = 160 \text{ AU}$$
$$A = 1536 \text{ AU}^2$$

6.



$$P = 132 \text{ m}$$
$$A = 1089 \text{ m}^2$$