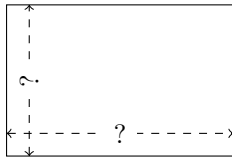


Rectangle Measurements (C)

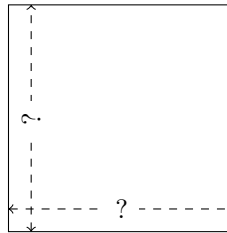
Calculate the missing measurements for each rectangle.

1.




$$P = 190 \text{ in}$$
$$A = 2166 \text{ in}^2$$

2.




$$P = 264 \text{ mm}$$
$$A = 4356 \text{ mm}^2$$

3.



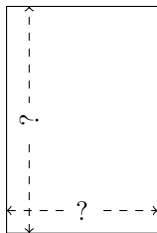
$$P = 84 \text{ m}$$
$$A = 432 \text{ m}^2$$

4.



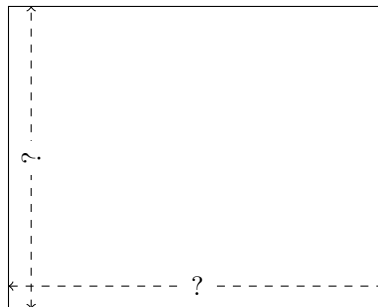
$$P = 460 \text{ mi}$$
$$A = 12,696 \text{ mi}^2$$

5.



$$P = 240 \text{ m}$$
$$A = 3456 \text{ m}^2$$

6.



$$P = 270 \text{ nm}$$
$$A = 4500 \text{ nm}^2$$