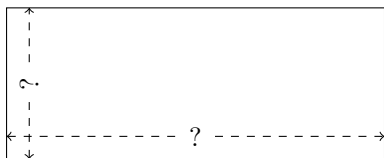


Rectangle Measurements (B)

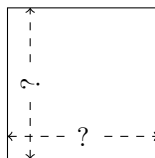
Calculate the missing measurements for each rectangle.

1.



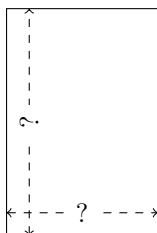
$$P = 42 \text{ ft}$$
$$A = 90 \text{ ft}^2$$

2.



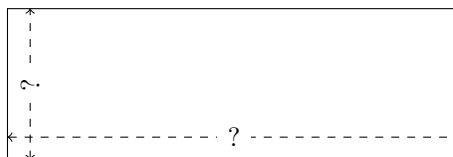
$$P = 16 \text{ AU}$$
$$A = 16 \text{ AU}^2$$

3.




$$P = 20 \text{ ft}$$
$$A = 24 \text{ ft}^2$$

4.



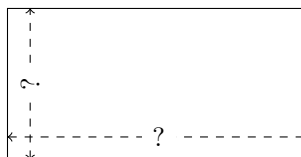
$$P = 16 \text{ cm}$$
$$A = 12 \text{ cm}^2$$

5.



$$P = 36 \text{ km}$$
$$A = 72 \text{ km}^2$$

6.



$$P = 12 \text{ mi}$$
$$A = 8 \text{ mi}^2$$