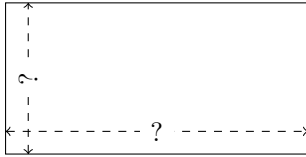


Rectangle Measurements (C)

Calculate the missing measurements for each rectangle.

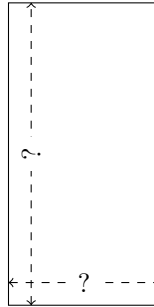
1.



$$P = 12 \text{ in}$$

$$A = 8 \text{ in}^2$$

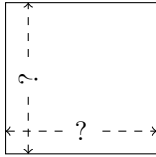
2.



$$P = 12 \text{ yd}$$

$$A = 8 \text{ yd}^2$$

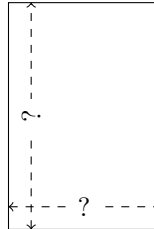
3.



$$P = 16 \text{ ft}$$

$$A = 16 \text{ ft}^2$$


4.



$$P = 10 \text{ yd}$$

$$A = 6 \text{ yd}^2$$


5.



$$P = 20 \text{ mm}$$

$$A = 24 \text{ mm}^2$$

6.



$$P = 32 \text{ AU}$$

$$A = 60 \text{ AU}^2$$