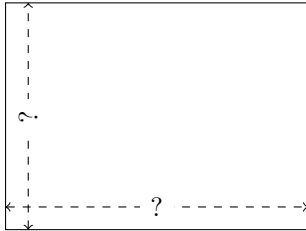


Rectangle Measurements (D)

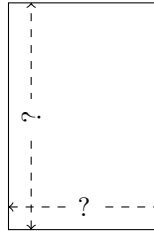
Calculate the missing measurements for each rectangle.

1.



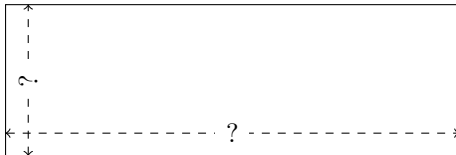
$$P = 42 \text{ ft}$$
$$A = 108 \text{ ft}^2$$

2.



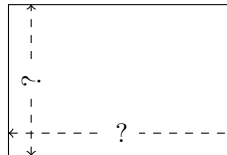
$$P = 10 \text{ km}$$
$$A = 6 \text{ km}^2$$

3.




$$P = 32 \text{ in}$$
$$A = 48 \text{ in}^2$$

4.




$$P = 30 \text{ nm}$$
$$A = 54 \text{ nm}^2$$

5.



$$P = 60 \text{ cm}$$
$$A = 216 \text{ cm}^2$$

6.



$$P = 18 \text{ m}$$
$$A = 20 \text{ m}^2$$