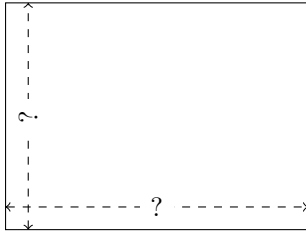


# Rectangle Measurements (G)

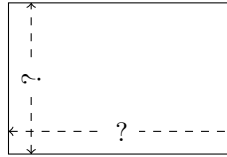
Calculate the missing measurements for each rectangle.

1.



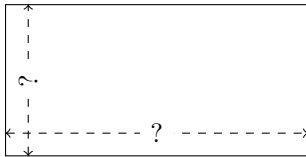
$$P = 42 \text{ mm}$$
$$A = 108 \text{ mm}^2$$

2.



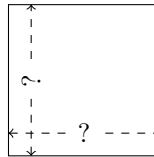
$$P = 30 \text{ mm}$$
$$A = 54 \text{ mm}^2$$

3.



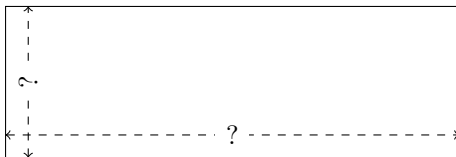
$$P = 24 \text{ yd}$$
$$A = 32 \text{ yd}^2$$

4.



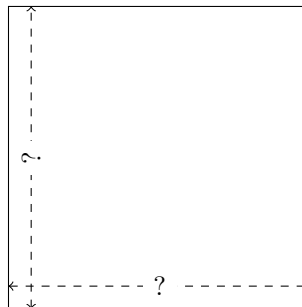
$$P = 24 \text{ mm}$$
$$A = 36 \text{ mm}^2$$

5.



$$P = 48 \text{ yd}$$
$$A = 108 \text{ yd}^2$$

6.



$$P = 32 \text{ cm}$$
$$A = 64 \text{ cm}^2$$