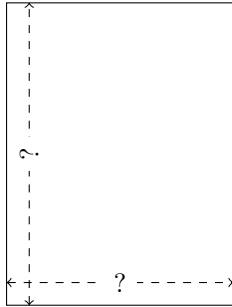


Rectangle Measurements (I)

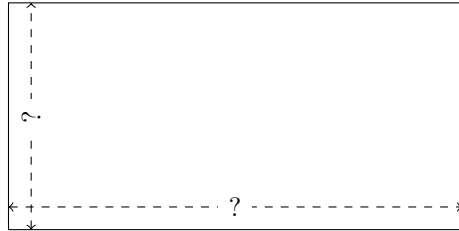
Calculate the missing measurements for each rectangle.

1.



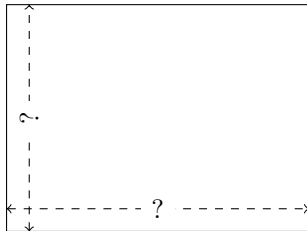
$$P = 14 \text{ cm}$$
$$A = 12 \text{ cm}^2$$

2.



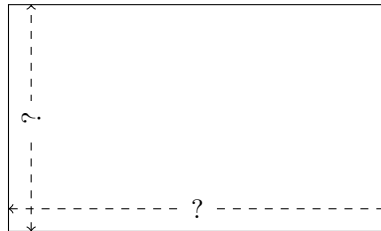
$$P = 54 \text{ in}$$
$$A = 162 \text{ in}^2$$

3.



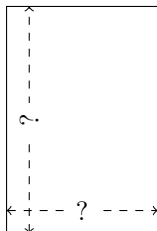
$$P = 28 \text{ nm}$$
$$A = 48 \text{ nm}^2$$

4.




$$P = 48 \text{ nm}$$
$$A = 135 \text{ nm}^2$$

5.



$$P = 10 \text{ in}$$
$$A = 6 \text{ in}^2$$

6.



$$P = 60 \text{ nm}$$
$$A = 216 \text{ nm}^2$$