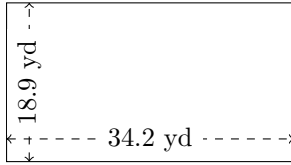


Rectangle Measurements (B)

Calculate the missing measurements for each rectangle.

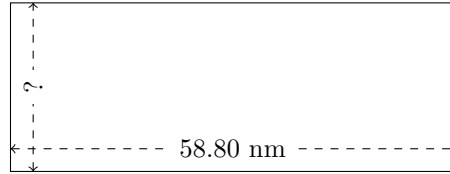
1.



$$P = ?$$

$$A = ?$$

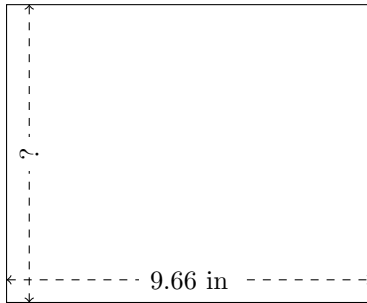
2.



$$P = 162.2 \text{ nm}$$

$$A = ?$$

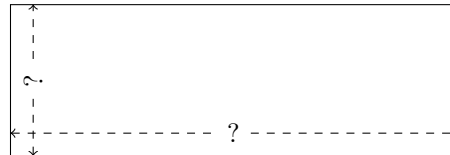
3.



$$P = ?$$

$$A = 76.1208 \text{ in}^2$$

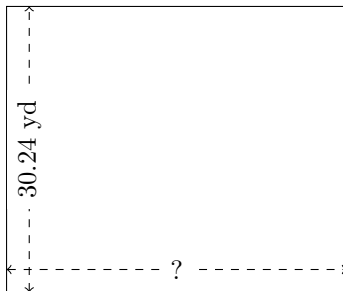
4.



$$P = 110.6 \text{ cm}$$

$$A = 578.2 \text{ cm}^2$$


5.



$$P = ?$$

$$A = 1088.64 \text{ yd}^2$$

6.



$$P = ?$$

$$A = 1109.76 \text{ cm}^2$$