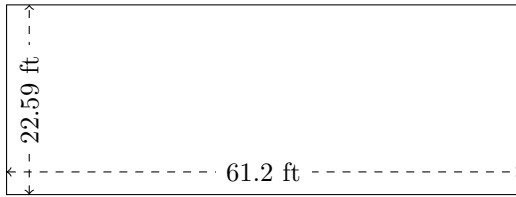


Rectangle Measurements (C)

Calculate the missing measurements for each rectangle.


1.



$$P = ?$$

$$A = ?$$

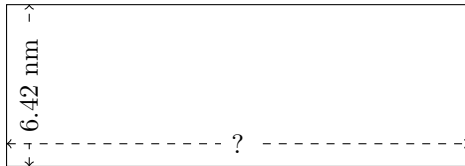
2.



$$P = 57.6 \text{ mi}$$

$$A = ?$$


3.



$$P = ?$$

$$A = 117.8712 \text{ mm}^2$$


4.



$$P = 114.8 \text{ mm}$$

$$A = 806.05 \text{ mm}^2$$


5.



$$P = 55.8 \text{ yd}$$

$$A = ?$$

6.



$$P = 93.24 \text{ mm}$$

$$A = 506.268 \text{ mm}^2$$