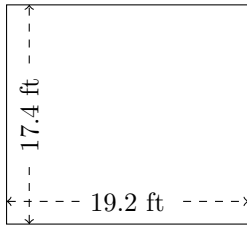


# Rectangle Measurements (D)

Calculate the missing measurements for each rectangle.

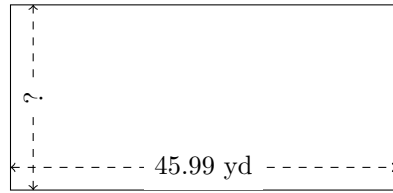
1.



$$P = ?$$

$$A = ?$$


2.



$$P = 136.08 \text{ yd}$$

$$A = ?$$

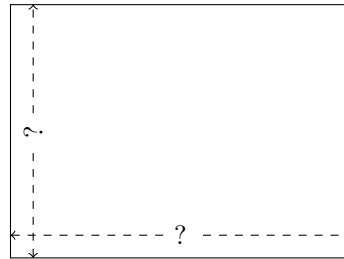
3.



$$P = ?$$

$$A = 155.232 \text{ mm}^2$$


4.



$$P = 125.6 \text{ m}$$

$$A = 964.8 \text{ m}^2$$

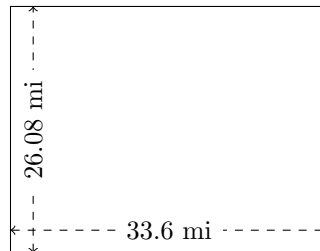
5.



$$P = 50.58 \text{ mm}$$

$$A = 158.562 \text{ mm}^2$$

6.



$$P = ?$$

$$A = ?$$