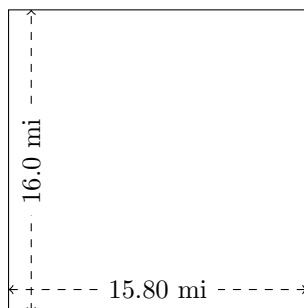


Rectangle Measurements (E)

Calculate the missing measurements for each rectangle.

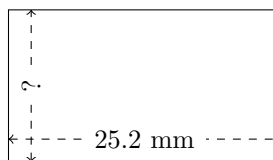
1.



$$P = ?$$

$$A = ?$$

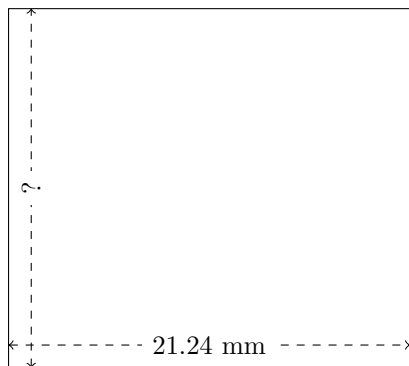
2.



$$P = 78.54 \text{ mm}$$

$$A = ?$$


3.



$$P = ?$$

$$A = 403.56 \text{ mm}^2$$


4.



$$P = 175.2 \text{ mm}$$

$$A = 1728 \text{ mm}^2$$

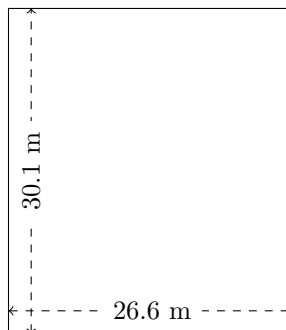
5.



$$P = 126.48 \text{ in}$$

$$A = ?$$

6.



$$P = ?$$

$$A = ?$$