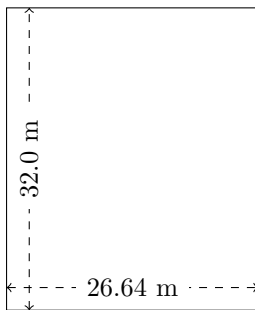


Rectangle Measurements (F)

Calculate the missing measurements for each rectangle.

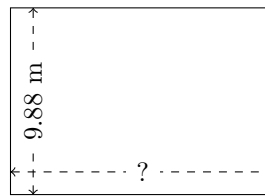
1.



$$P = ?$$

$$A = ?$$

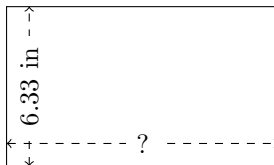
2.



$$P = 47.76 \text{ m}$$

$$A = ?$$

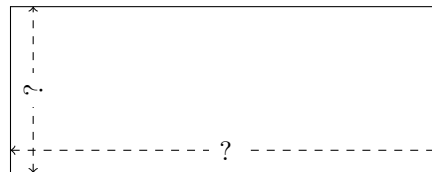
3.



$$P = ?$$

$$A = 68.364 \text{ in}^2$$

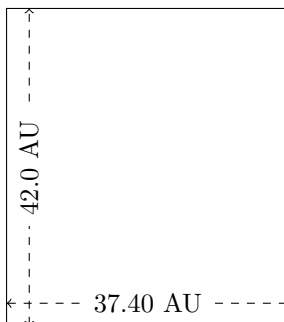
4.



$$P = 63.2 \text{ yd}$$

$$A = 200.64 \text{ yd}^2$$


5.



$$P = ?$$

$$A = ?$$

6.



$$P = ?$$

$$A = 9.576 \text{ AU}^2$$