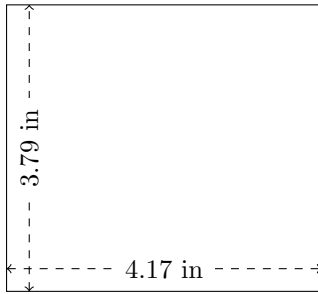


Rectangle Measurements (G)

Calculate the missing measurements for each rectangle.

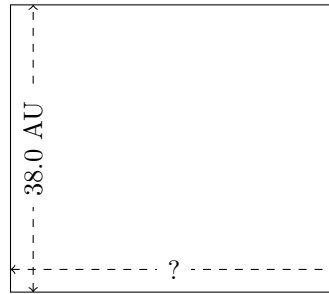
1.



$$P = ?$$

$$A = ?$$


2.



$$P = 162.6 \text{ AU}$$

$$A = ?$$


3.



$$P = ?$$

$$A = 1244.208 \text{ in}^2$$

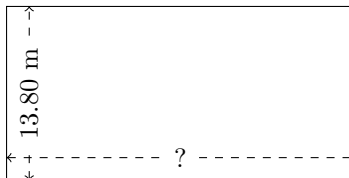
4.



$$P = 211.6 \text{ mi}$$

$$A = 2719.2 \text{ mi}^2$$

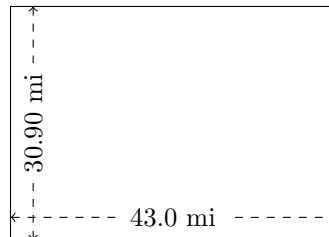
5.



$$P = ?$$

$$A = 380.88 \text{ m}^2$$

6.



$$P = ?$$

$$A = ?$$