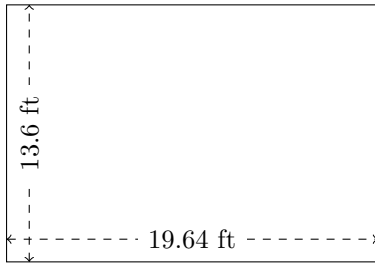


Rectangle Measurements (H)

Calculate the missing measurements for each rectangle.

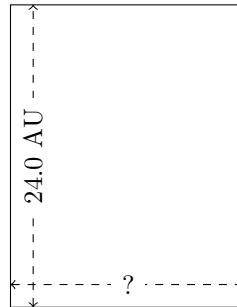
1.



$$P = ?$$

$$A = ?$$

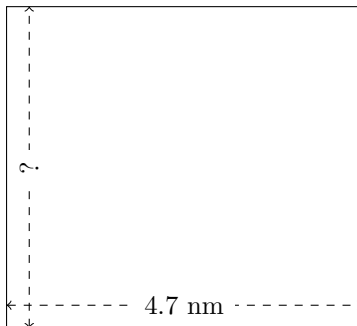
2.



$$P = 85.44 \text{ AU}$$

$$A = ?$$

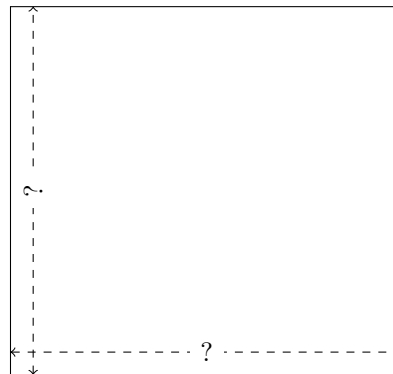
3.



$$P = ?$$

$$A = 19.975 \text{ nm}^2$$

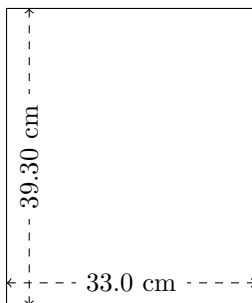
4.



$$P = 100.6 \text{ mm}$$

$$A = 631.8825 \text{ mm}^2$$

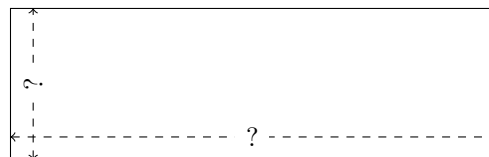
5.



$$P = ?$$

$$A = ?$$

6.



$$P = 50.4 \text{ ft}$$

$$A = 115.2 \text{ ft}^2$$