


Rectangle Measurements (I)

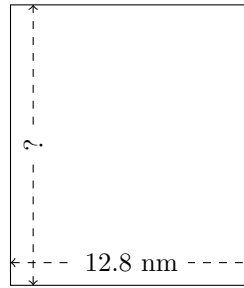
Calculate the missing measurements for each rectangle.

1.



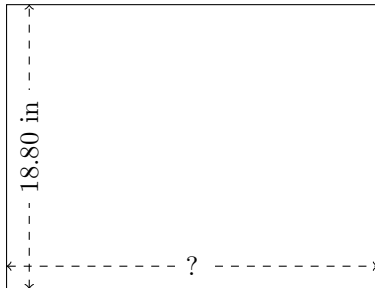
$$P = ?$$
$$A = ?$$

2.



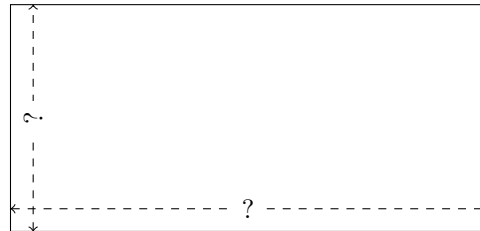
$$P = 55.28 \text{ nm}$$
$$A = ?$$

3.




$$P = ?$$
$$A = 461.54 \text{ in}^2$$

4.




$$P = 55.74 \text{ mm}$$
$$A = 169.83 \text{ mm}^2$$

5.



$$P = 104.8 \text{ m}$$
$$A = 653.95 \text{ m}^2$$

6.



$$P = 140.94 \text{ in}$$
$$A = 1187.703 \text{ in}^2$$