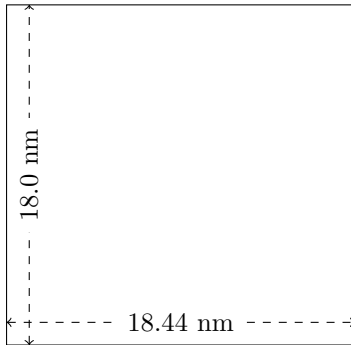


Rectangle Measurements (J)

Calculate the missing measurements for each rectangle.


1.



$$P = ?$$

$$A = ?$$


2.



$$P = 21.58 \text{ km}$$

$$A = ?$$

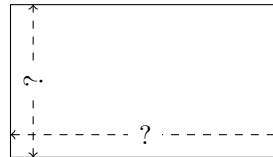
3.



$$P = ?$$

$$A = 228.48 \text{ AU}^2$$

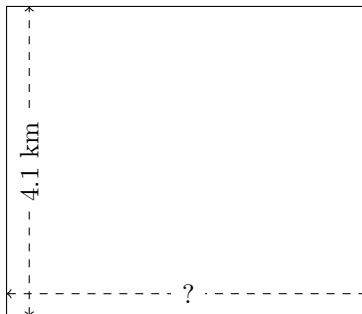
4.



$$P = 22.36 \text{ AU}$$

$$A = 28.8456 \text{ AU}^2$$

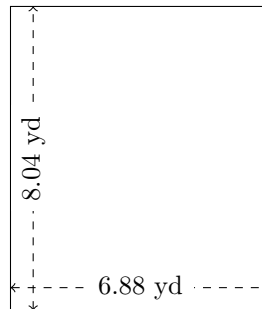
5.



$$P = ?$$

$$A = 19.721 \text{ km}^2$$

6.



$$P = ?$$

$$A = ?$$