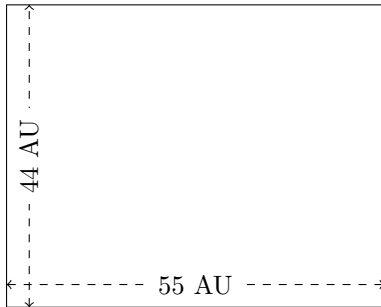


Rectangle Measurements (C)

Calculate the missing measurements for each rectangle.

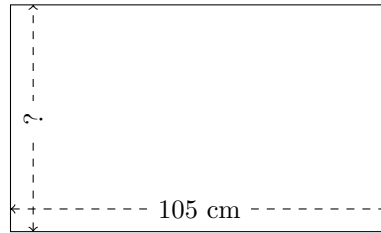
1.



$$P = ?$$

$$A = ?$$

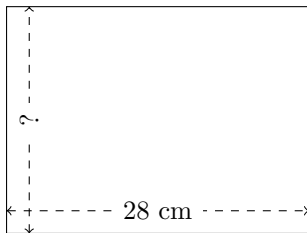
2.



$$P = 336 \text{ cm}$$

$$A = ?$$

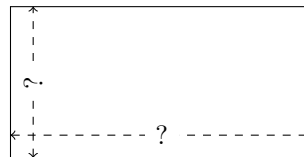
3.



$$P = ?$$

$$A = 588 \text{ cm}^2$$

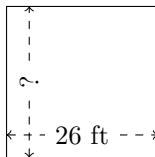
4.



$$P = 60 \text{ nm}$$

$$A = 200 \text{ nm}^2$$

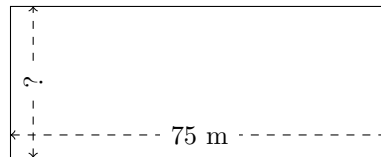
5.



$$P = ?$$

$$A = 676 \text{ ft}^2$$

6.



$$P = ?$$

$$A = 2250 \text{ m}^2$$