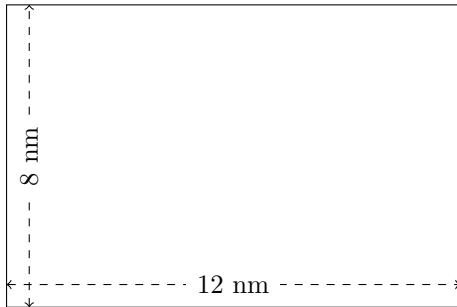


Rectangle Measurements (A)

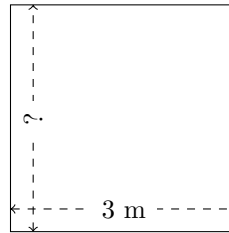
Calculate the missing measurements for each rectangle.

1.



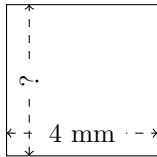
$$P = ?$$
$$A = ?$$

2.



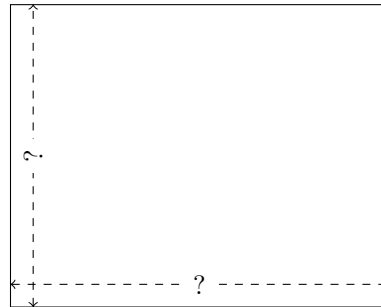
$$P = 12 \text{ m}$$
$$A = ?$$

3.



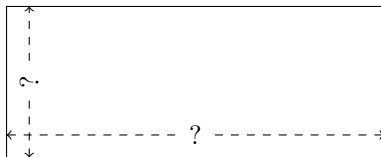
$$P = ?$$
$$A = 16 \text{ mm}^2$$

4.



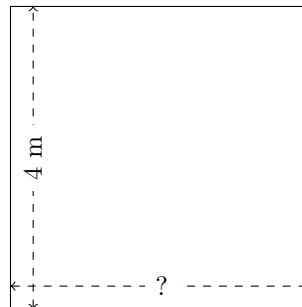
$$P = 36 \text{ in}$$
$$A = 80 \text{ in}^2$$

5.



$$P = 42 \text{ m}$$
$$A = 90 \text{ m}^2$$

6.



$$P = 16 \text{ m}$$
$$A = ?$$