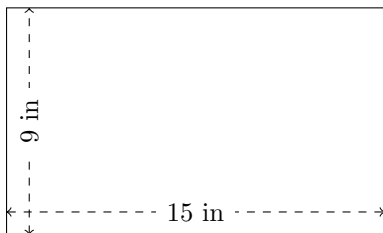


Rectangle Measurements (F)

Calculate the missing measurements for each rectangle.

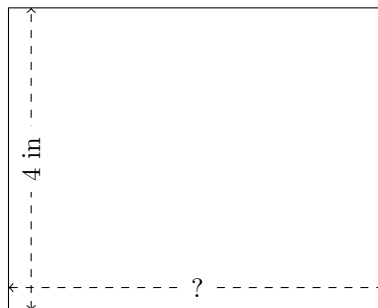
1.



$$P = ?$$

$$A = ?$$

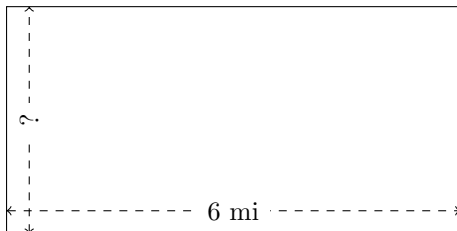
2.



$$P = 18 \text{ in}$$

$$A = ?$$

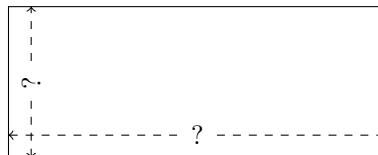
3.



$$P = ?$$

$$A = 18 \text{ mi}^2$$

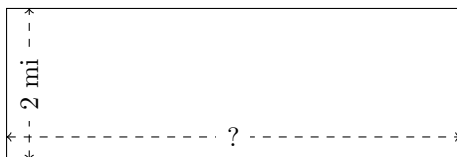
4.



$$P = 14 \text{ mm}$$

$$A = 10 \text{ mm}^2$$

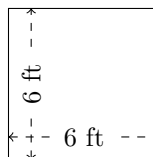
5.



$$P = ?$$

$$A = 12 \text{ mi}^2$$

6.



$$P = ?$$

$$A = ?$$