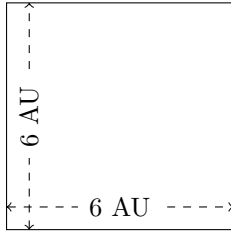


Rectangle Measurements (H)

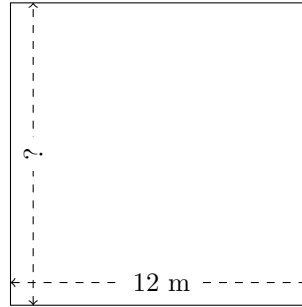
Calculate the missing measurements for each rectangle.

1.



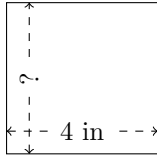
$$P = ?$$
$$A = ?$$

2.



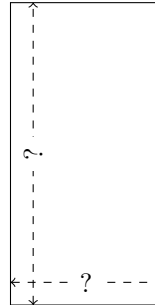
$$P = 48 \text{ m}$$
$$A = ?$$

3.



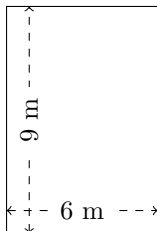
$$P = ?$$
$$A = 16 \text{ in}^2$$

4.



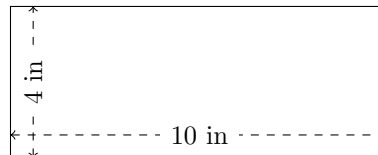
$$P = 12 \text{ nm}$$
$$A = 8 \text{ nm}^2$$

5.



$$P = ?$$
$$A = ?$$

6.

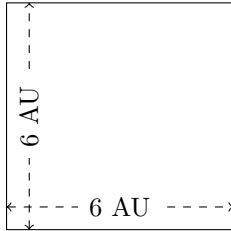


$$P = ?$$
$$A = ?$$

Rectangle Measurements (H) Answers

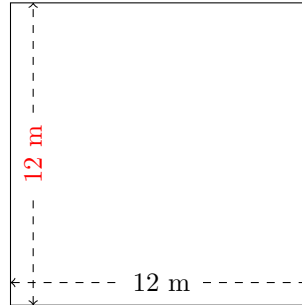
Calculate the missing measurements for each rectangle.

1.



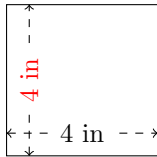
$$P = 24 \text{ AU}$$
$$A = 36 \text{ AU}^2$$

2.



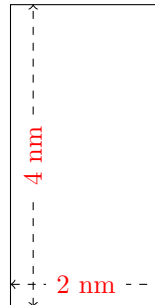
$$P = 48 \text{ m}$$
$$A = 144 \text{ m}^2$$

3.



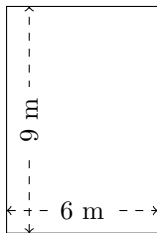
$$P = 16 \text{ in}$$
$$A = 16 \text{ in}^2$$

4.



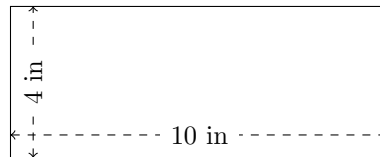
$$P = 12 \text{ nm}$$
$$A = 8 \text{ nm}^2$$

5.



$$P = 30 \text{ m}$$
$$A = 54 \text{ m}^2$$

6.



$$P = 28 \text{ in}$$
$$A = 40 \text{ in}^2$$