

Converting Between mm and cm (A)

Name: _____

Date: _____

Score: _____ /10

Complete each conversion. Symbols for copying and pasting: $\times \div ^2 ^3$.



1. Convert 5.42 cm to mm
2. Convert 23 370 cm to mm
3. Convert 5.3 cm to mm
4. Convert 7400 mm to cm
5. Convert 0.073 cm to mm
6. Convert 31.4 mm to cm
7. Convert 7.7 mm to cm
8. Convert 455 000 mm to cm
9. Convert 0.245 cm to mm
10. Convert 88 820 mm to cm

Converting Between mm and cm (A) Answers

Name: _____

Date: _____

Score: _____ /10

Complete each conversion. Symbols for copying and pasting: $\times \div ^2 ^3$.



1. Convert 5.42 cm to mm
 $5.42 \text{ cm} \times 10 = 54.2 \text{ mm}$
2. Convert 23 370 cm to mm
 $23\,370 \text{ cm} \times 10 = 233\,700 \text{ mm}$
3. Convert 5.3 cm to mm
 $5.3 \text{ cm} \times 10 = 53 \text{ mm}$
4. Convert 7400 mm to cm
 $7400 \text{ mm} \div 10 = 740 \text{ cm}$
5. Convert 0.073 cm to mm
 $0.073 \text{ cm} \times 10 = 0.73 \text{ mm}$
6. Convert 31.4 mm to cm
 $31.4 \text{ mm} \div 10 = 3.14 \text{ cm}$
7. Convert 7.7 mm to cm
 $7.7 \text{ mm} \div 10 = 0.77 \text{ cm}$
8. Convert 455 000 mm to cm
 $455\,000 \text{ mm} \div 10 = 45\,500 \text{ cm}$
9. Convert 0.245 cm to mm
 $0.245 \text{ cm} \times 10 = 2.45 \text{ mm}$
10. Convert 88 820 mm to cm
 $88\,820 \text{ mm} \div 10 = 8882 \text{ cm}$

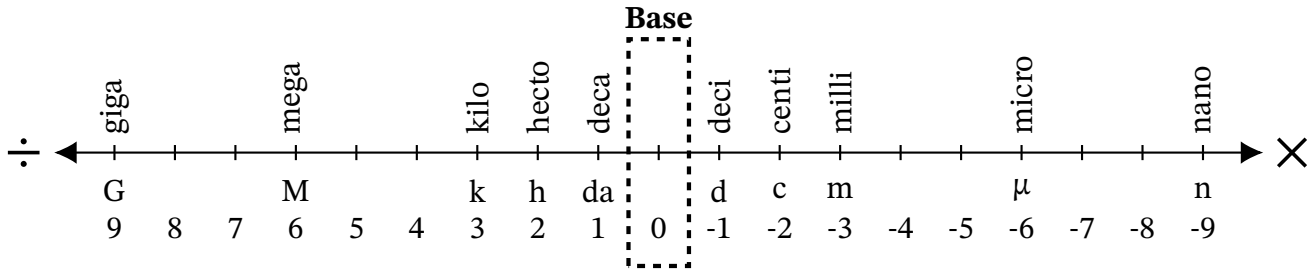
Converting Between mm and cm (B)

Name: _____

Date: _____

Score: _____ /10

Complete each conversion. Symbols for copying and pasting: $\times \div ^2 ^3$.



1. Convert 3.4 cm to mm
2. Convert 223 mm to cm
3. Convert 5380 cm to mm
4. Convert 5310 mm to cm
5. Convert 2.79 cm to mm
6. Convert 8200 mm to cm
7. Convert 26 770 mm to cm
8. Convert 310.3 cm to mm
9. Convert 0.017 cm to mm
10. Convert 477 mm to cm

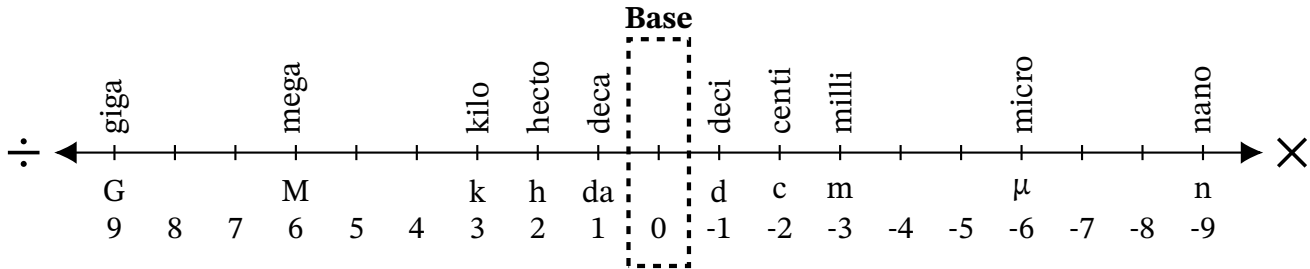
Converting Between mm and cm (B) Answers

Name: _____

Date: _____

Score: _____ /10

Complete each conversion. Symbols for copying and pasting: $\times \div ^2 ^3$.



1. Convert 3.4 cm to mm

$$3.4 \text{ cm} \times 10 = 34 \text{ mm}$$

2. Convert 223 mm to cm

$$223 \text{ mm} \div 10 = 22.3 \text{ cm}$$

3. Convert 5380 cm to mm

$$5380 \text{ cm} \times 10 = 53\,800 \text{ mm}$$

4. Convert 5310 mm to cm

$$5310 \text{ mm} \div 10 = 531 \text{ cm}$$

5. Convert 2.79 cm to mm

$$2.79 \text{ cm} \times 10 = 27.9 \text{ mm}$$

6. Convert 8200 mm to cm

$$8200 \text{ mm} \div 10 = 820 \text{ cm}$$

7. Convert 26 770 mm to cm

$$26\,770 \text{ mm} \div 10 = 2677 \text{ cm}$$

8. Convert 310.3 cm to mm

$$310.3 \text{ cm} \times 10 = 3103 \text{ mm}$$

9. Convert 0.017 cm to mm

$$0.017 \text{ cm} \times 10 = 0.17 \text{ mm}$$

10. Convert 477 mm to cm

$$477 \text{ mm} \div 10 = 47.7 \text{ cm}$$

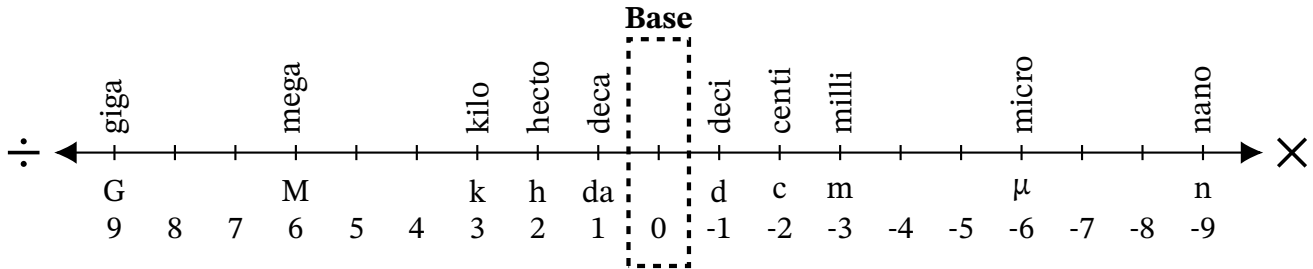
Converting Between mm and cm (C)

Name: _____

Date: _____

Score: _____ /10

Complete each conversion. Symbols for copying and pasting: $\times \div ^2 ^3$.



1. Convert 63 000 mm to cm
2. Convert 5 477 000 mm to cm
3. Convert 2490 cm to mm
4. Convert 30.01 cm to mm
5. Convert 81 640 cm to mm
6. Convert 744 700 mm to cm
7. Convert 315 mm to cm
8. Convert 4.1 mm to cm
9. Convert 0.054 cm to mm
10. Convert 130 cm to mm

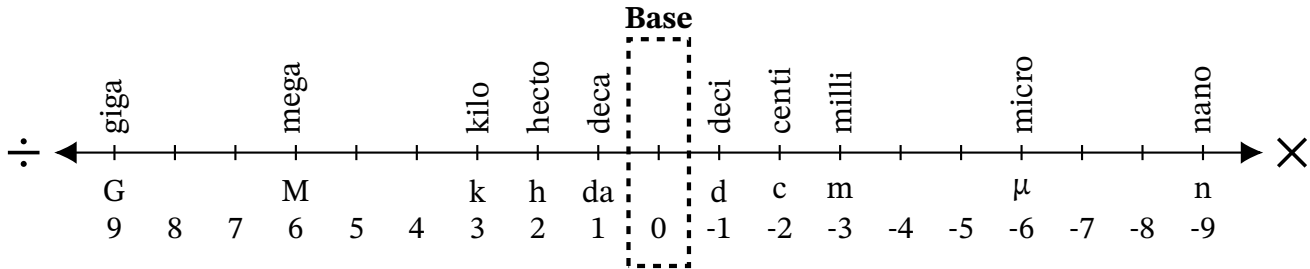
Converting Between mm and cm (C) Answers

Name: _____

Date: _____

Score: _____ /10

Complete each conversion. Symbols for copying and pasting: $\times \div ^2 ^3$.



1. Convert 63 000 mm to cm

$$63\,000\text{ mm} \div 10 = 6300\text{ cm}$$

2. Convert 5 477 000 mm to cm

$$5\,477\,000\text{ mm} \div 10 = 547\,700\text{ cm}$$

3. Convert 2490 cm to mm

$$2490\text{ cm} \times 10 = 24\,900\text{ mm}$$

4. Convert 30.01 cm to mm

$$30.01\text{ cm} \times 10 = 300.1\text{ mm}$$

5. Convert 81 640 cm to mm

$$81\,640\text{ cm} \times 10 = 816\,400\text{ mm}$$

6. Convert 744 700 mm to cm

$$744\,700\text{ mm} \div 10 = 74\,470\text{ cm}$$

7. Convert 315 mm to cm

$$315\text{ mm} \div 10 = 31.5\text{ cm}$$

8. Convert 4.1 mm to cm

$$4.1\text{ mm} \div 10 = 0.41\text{ cm}$$

9. Convert 0.054 cm to mm

$$0.054\text{ cm} \times 10 = 0.54\text{ mm}$$

10. Convert 130 cm to mm

$$130\text{ cm} \times 10 = 1300\text{ mm}$$

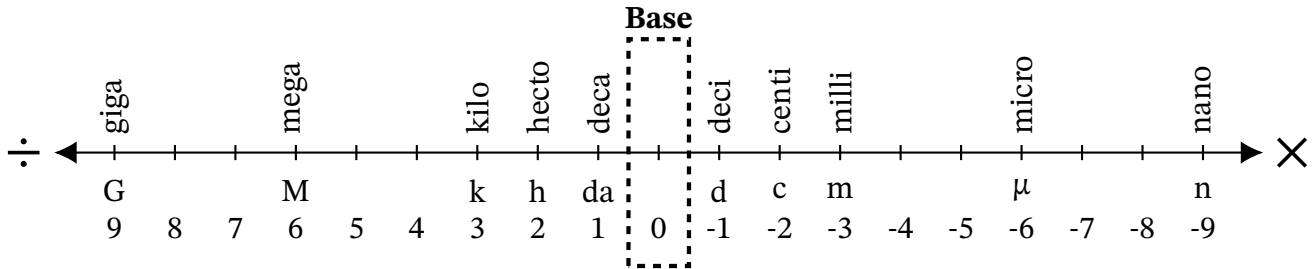
Converting Between mm and cm (D)

Name: _____

Date: _____

Score: _____ /10

Complete each conversion. Symbols for copying and pasting: $\times \div ^2 ^3$.



1. Convert 519 600 mm to cm
2. Convert 46 940 cm to mm
3. Convert 699.5 mm to cm
4. Convert 77.9 cm to mm
5. Convert 0.372 cm to mm
6. Convert 1.6 mm to cm
7. Convert 49 cm to mm
8. Convert 3.5 mm to cm
9. Convert 2.16 cm to mm
10. Convert 11 000 mm to cm

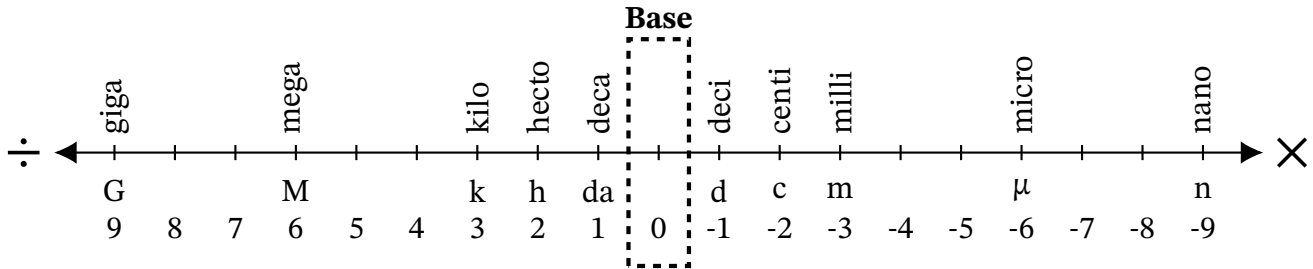
Converting Between mm and cm (D) Answers

Name: _____

Date: _____

Score: _____ /10

Complete each conversion. Symbols for copying and pasting: $\times \div ^2 ^3$.



1. Convert 519 600 mm to cm

$$519\,600\text{ mm} \div 10 = 51\,960\text{ cm}$$

2. Convert 46 940 cm to mm

$$46\,940\text{ cm} \times 10 = 469\,400\text{ mm}$$

3. Convert 699.5 mm to cm

$$699.5\text{ mm} \div 10 = 69.95\text{ cm}$$

4. Convert 77.9 cm to mm

$$77.9\text{ cm} \times 10 = 779\text{ mm}$$

5. Convert 0.372 cm to mm

$$0.372\text{ cm} \times 10 = 3.72\text{ mm}$$

6. Convert 1.6 mm to cm

$$1.6\text{ mm} \div 10 = 0.16\text{ cm}$$

7. Convert 49 cm to mm

$$49\text{ cm} \times 10 = 490\text{ mm}$$

8. Convert 3.5 mm to cm

$$3.5\text{ mm} \div 10 = 0.35\text{ cm}$$

9. Convert 2.16 cm to mm

$$2.16\text{ cm} \times 10 = 21.6\text{ mm}$$

10. Convert 11 000 mm to cm

$$11\,000\text{ mm} \div 10 = 1100\text{ cm}$$

Converting Between mm and cm (E)

Name: _____

Date: _____

Score: _____ /10

Complete each conversion. Symbols for copying and pasting: $\times \div ^2 ^3$.



1. Convert 8.81 cm to mm
2. Convert 3 062 000 mm to cm
3. Convert 241 900 mm to cm
4. Convert 9.8 mm to cm
5. Convert 994.6 mm to cm
6. Convert 2.6 cm to mm
7. Convert 25 mm to cm
8. Convert 510 cm to mm
9. Convert 9.02 cm to mm
10. Convert 7.9 cm to mm

Converting Between mm and cm (E) Answers

Name: _____

Date: _____

Score: _____ /10

Complete each conversion. Symbols for copying and pasting: $\times \div ^2 ^3$.



1. Convert 8.81 cm to mm

$$8.81 \text{ cm} \times 10 = 88.1 \text{ mm}$$

2. Convert 3 062 000 mm to cm

$$3\ 062\ 000 \text{ mm} \div 10 = 306\ 200 \text{ cm}$$

3. Convert 241 900 mm to cm

$$241\ 900 \text{ mm} \div 10 = 24\ 190 \text{ cm}$$

4. Convert 9.8 mm to cm

$$9.8 \text{ mm} \div 10 = 0.98 \text{ cm}$$

5. Convert 994.6 mm to cm

$$994.6 \text{ mm} \div 10 = 99.46 \text{ cm}$$

6. Convert 2.6 cm to mm

$$2.6 \text{ cm} \times 10 = 26 \text{ mm}$$

7. Convert 25 mm to cm

$$25 \text{ mm} \div 10 = 2.5 \text{ cm}$$

8. Convert 510 cm to mm

$$510 \text{ cm} \times 10 = 5100 \text{ mm}$$

9. Convert 9.02 cm to mm

$$9.02 \text{ cm} \times 10 = 90.2 \text{ mm}$$

10. Convert 7.9 cm to mm

$$7.9 \text{ cm} \times 10 = 79 \text{ mm}$$

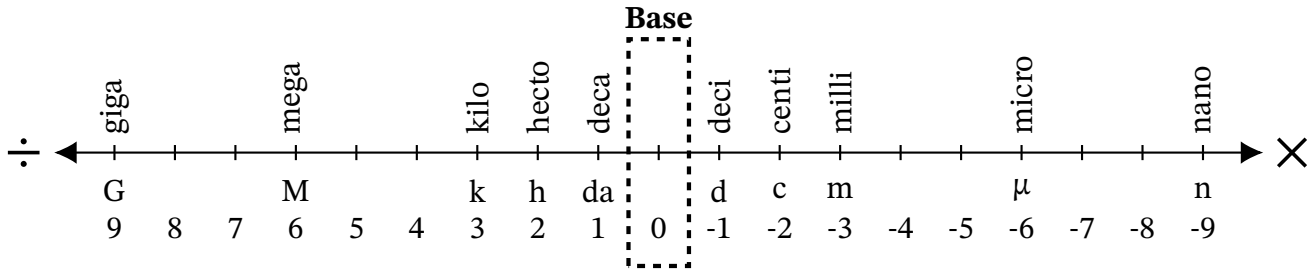
Converting Between mm and cm (F)

Name: _____

Date: _____

Score: _____ /10

Complete each conversion. Symbols for copying and pasting: $\times \div ^2 ^3$.



1. Convert 682.2 mm to cm
2. Convert 82.3 mm to cm
3. Convert 725 cm to mm
4. Convert 9545 cm to mm
5. Convert 653 000 mm to cm
6. Convert 0.65 cm to mm
7. Convert 40.4 cm to mm
8. Convert 51 cm to mm
9. Convert 85 990 mm to cm
10. Convert 725 000 mm to cm

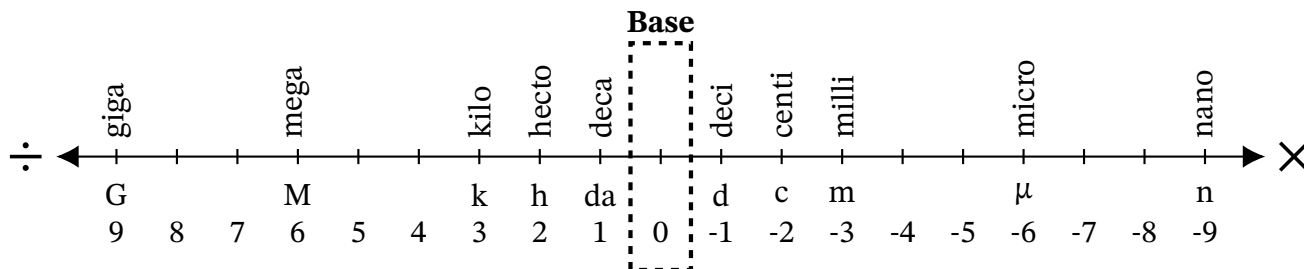
Converting Between mm and cm (F) Answers

Name: _____

Date: _____

Score: _____ /10

Complete each conversion. Symbols for copying and pasting: $\times \div ^2 ^3$.



1. Convert 682.2 mm to cm

$$682.2 \text{ mm} \div 10 = 68.22 \text{ cm}$$

2. Convert 82.3 mm to cm

$$82.3 \text{ mm} \div 10 = 8.23 \text{ cm}$$

3. Convert 725 cm to mm

$$725 \text{ cm} \times 10 = 7250 \text{ mm}$$

4. Convert 9545 cm to mm

$$9545 \text{ cm} \times 10 = 95450 \text{ mm}$$

5. Convert 653 000 mm to cm

$$653\,000 \text{ mm} \div 10 = 65\,300 \text{ cm}$$

6. Convert 0.65 cm to mm

$$0.65 \text{ cm} \times 10 = 6.5 \text{ mm}$$

7. Convert 40.4 cm to mm

$$40.4 \text{ cm} \times 10 = 404 \text{ mm}$$

8. Convert 51 cm to mm

$$51 \text{ cm} \times 10 = 510 \text{ mm}$$

9. Convert 85 990 mm to cm

$$85\,990 \text{ mm} \div 10 = 8599 \text{ cm}$$

10. Convert 725 000 mm to cm

$$725\,000 \text{ mm} \div 10 = 72\,500 \text{ cm}$$

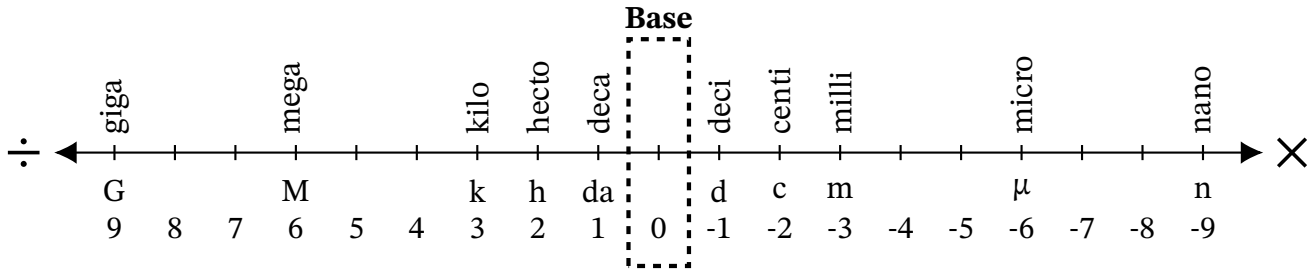
Converting Between mm and cm (G)

Name: _____

Date: _____

Score: _____ /10

Complete each conversion. Symbols for copying and pasting: $\times \div ^2 ^3$.



1. Convert 42.62 cm to mm
2. Convert 382.7 cm to mm
3. Convert 5451 cm to mm
4. Convert 54 cm to mm
5. Convert 25.9 mm to cm
6. Convert 1 682 000 mm to cm
7. Convert 264 mm to cm
8. Convert 9.9 mm to cm
9. Convert 5.71 cm to mm
10. Convert 37.6 mm to cm

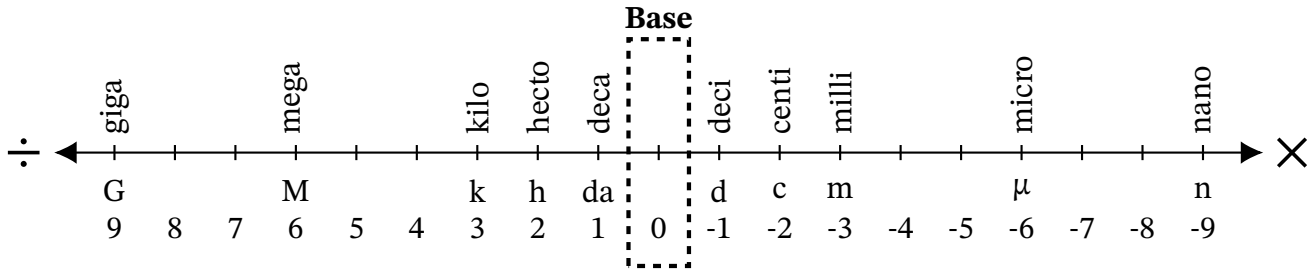
Converting Between mm and cm (G) Answers

Name: _____

Date: _____

Score: _____ /10

Complete each conversion. Symbols for copying and pasting: $\times \div ^2 ^3$.



1. Convert 42.62 cm to mm

$$42.62 \text{ cm} \times 10 = 426.2 \text{ mm}$$

2. Convert 382.7 cm to mm

$$382.7 \text{ cm} \times 10 = 3827 \text{ mm}$$

3. Convert 5451 cm to mm

$$5451 \text{ cm} \times 10 = 54\,510 \text{ mm}$$

4. Convert 54 cm to mm

$$54 \text{ cm} \times 10 = 540 \text{ mm}$$

5. Convert 25.9 mm to cm

$$25.9 \text{ mm} \div 10 = 2.59 \text{ cm}$$

6. Convert 1 682 000 mm to cm

$$1\,682\,000 \text{ mm} \div 10 = 168\,200 \text{ cm}$$

7. Convert 264 mm to cm

$$264 \text{ mm} \div 10 = 26.4 \text{ cm}$$

8. Convert 9.9 mm to cm

$$9.9 \text{ mm} \div 10 = 0.99 \text{ cm}$$

9. Convert 5.71 cm to mm

$$5.71 \text{ cm} \times 10 = 57.1 \text{ mm}$$

10. Convert 37.6 mm to cm

$$37.6 \text{ mm} \div 10 = 3.76 \text{ cm}$$

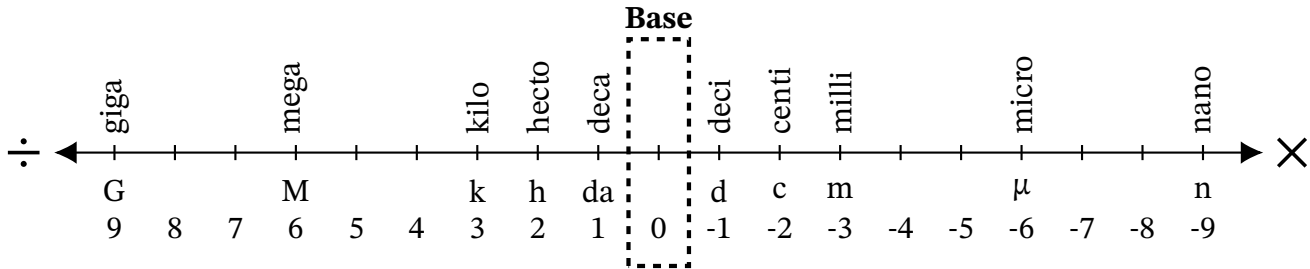
Converting Between mm and cm (H)

Name: _____

Date: _____

Score: _____ /10

Complete each conversion. Symbols for copying and pasting: $\times \div ^2 ^3$.



1. Convert 73 400 mm to cm

2. Convert 41 cm to mm

3. Convert 7.1 cm to mm

4. Convert 7782 cm to mm

5. Convert 639 900 mm to cm

6. Convert 514 200 mm to cm

7. Convert 1910 mm to cm

8. Convert 95.8 cm to mm

9. Convert 36 440 cm to mm

10. Convert 8490 mm to cm

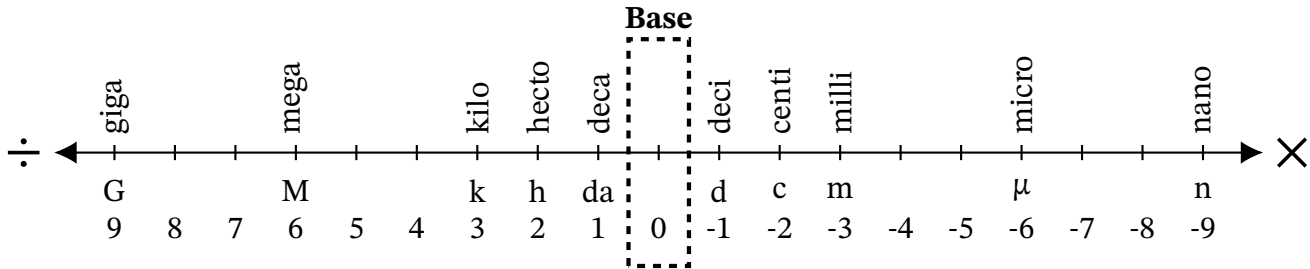
Converting Between mm and cm (H) Answers

Name: _____

Date: _____

Score: _____ /10

Complete each conversion. Symbols for copying and pasting: $\times \div ^2 ^3$.



1. Convert 73 400 mm to cm

$73\ 400\ \text{mm} \div 10 = 7340\ \text{cm}$

2. Convert 41 cm to mm

$41\ \text{cm} \times 10 = 410\ \text{mm}$

3. Convert 7.1 cm to mm

$7.1\ \text{cm} \times 10 = 71\ \text{mm}$

4. Convert 7782 cm to mm

$7782\ \text{cm} \times 10 = 77\ 820\ \text{mm}$

5. Convert 639 900 mm to cm

$639\ 900\ \text{mm} \div 10 = 63\ 990\ \text{cm}$

6. Convert 514 200 mm to cm

$514\ 200\ \text{mm} \div 10 = 51\ 420\ \text{cm}$

7. Convert 1910 mm to cm

$1910\ \text{mm} \div 10 = 191\ \text{cm}$

8. Convert 95.8 cm to mm

$95.8\ \text{cm} \times 10 = 958\ \text{mm}$

9. Convert 36 440 cm to mm

$36\ 440\ \text{cm} \times 10 = 364\ 400\ \text{mm}$

10. Convert 8490 mm to cm

$8490\ \text{mm} \div 10 = 849\ \text{cm}$

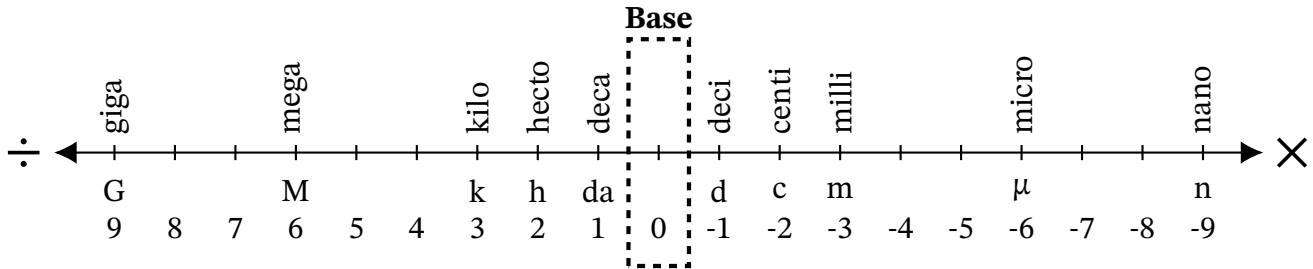
Converting Between mm and cm (I)

Name: _____

Date: _____

Score: _____ /10

Complete each conversion. Symbols for copying and pasting: $\times \div ^2 ^3$.



1. Convert 25.38 cm to mm
2. Convert 145 mm to cm
3. Convert 0.152 cm to mm
4. Convert 591 000 mm to cm
5. Convert 191 000 mm to cm
6. Convert 9370 mm to cm
7. Convert 3510 cm to mm
8. Convert 390 cm to mm
9. Convert 3.6 cm to mm
10. Convert 153 500 mm to cm

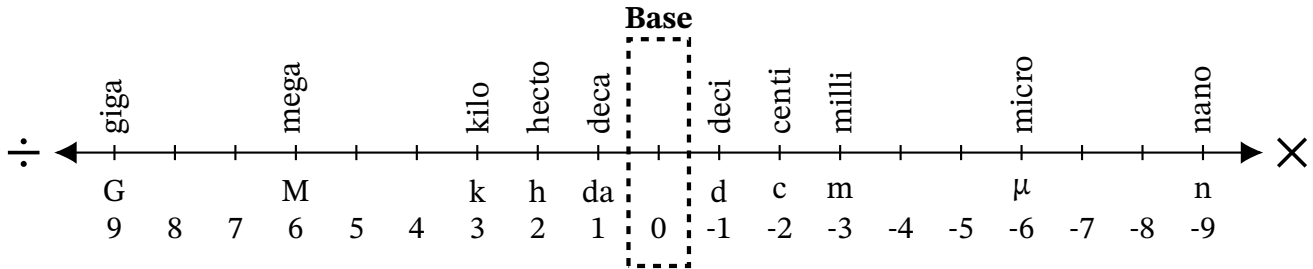
Converting Between mm and cm (I) Answers

Name: _____

Date: _____

Score: _____ /10

Complete each conversion. Symbols for copying and pasting: $\times \div ^2 ^3$.



1. Convert 25.38 cm to mm

$$25.38 \text{ cm} \times 10 = 253.8 \text{ mm}$$

2. Convert 145 mm to cm

$$145 \text{ mm} \div 10 = 14.5 \text{ cm}$$

3. Convert 0.152 cm to mm

$$0.152 \text{ cm} \times 10 = 1.52 \text{ mm}$$

4. Convert 591 000 mm to cm

$$591\ 000 \text{ mm} \div 10 = 59\ 100 \text{ cm}$$

5. Convert 191 000 mm to cm

$$191\ 000 \text{ mm} \div 10 = 19\ 100 \text{ cm}$$

6. Convert 9370 mm to cm

$$9370 \text{ mm} \div 10 = 937 \text{ cm}$$

7. Convert 3510 cm to mm

$$3510 \text{ cm} \times 10 = 35\ 100 \text{ mm}$$

8. Convert 390 cm to mm

$$390 \text{ cm} \times 10 = 3900 \text{ mm}$$

9. Convert 3.6 cm to mm

$$3.6 \text{ cm} \times 10 = 36 \text{ mm}$$

10. Convert 153 500 mm to cm

$$153\ 500 \text{ mm} \div 10 = 15\ 350 \text{ cm}$$

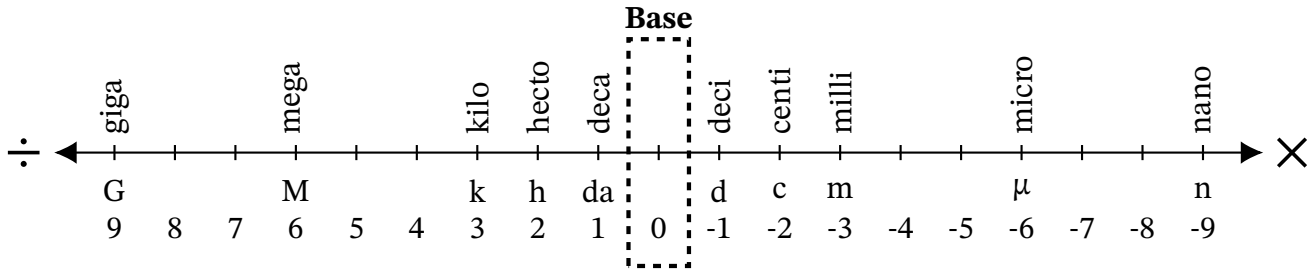
Converting Between mm and cm (J)

Name: _____

Date: _____

Score: _____ /10

Complete each conversion. Symbols for copying and pasting: $\times \div ^2 ^3$.



1. Convert 4.16 cm to mm
2. Convert 977.9 mm to cm
3. Convert 6.5 mm to cm
4. Convert 29 800 mm to cm
5. Convert 76 cm to mm
6. Convert 8.4 cm to mm
7. Convert 4.5 cm to mm
8. Convert 7.45 cm to mm
9. Convert 52 670 mm to cm
10. Convert 3.4 mm to cm

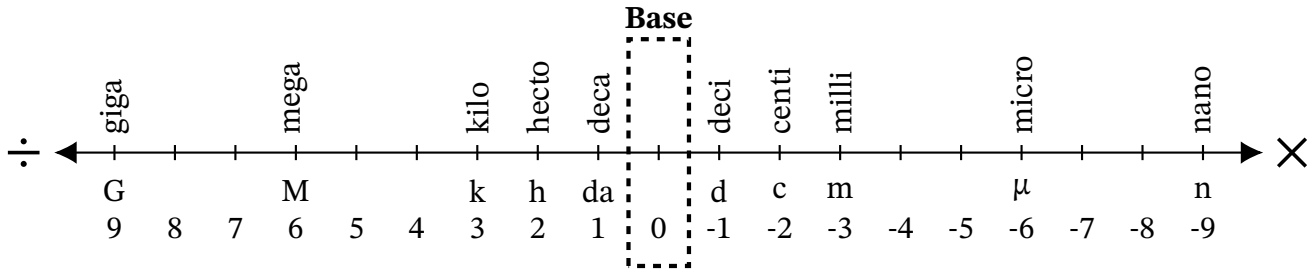
Converting Between mm and cm (J) Answers

Name: _____

Date: _____

Score: _____ /10

Complete each conversion. Symbols for copying and pasting: $\times \div ^2 ^3$.



1. Convert 4.16 cm to mm
 $4.16 \text{ cm} \times 10 = 41.6 \text{ mm}$
2. Convert 977.9 mm to cm
 $977.9 \text{ mm} \div 10 = 97.79 \text{ cm}$
3. Convert 6.5 mm to cm
 $6.5 \text{ mm} \div 10 = 0.65 \text{ cm}$
4. Convert 29 800 mm to cm
 $29\,800 \text{ mm} \div 10 = 2980 \text{ cm}$
5. Convert 76 cm to mm
 $76 \text{ cm} \times 10 = 760 \text{ mm}$
6. Convert 8.4 cm to mm
 $8.4 \text{ cm} \times 10 = 84 \text{ mm}$
7. Convert 4.5 cm to mm
 $4.5 \text{ cm} \times 10 = 45 \text{ mm}$
8. Convert 7.45 cm to mm
 $7.45 \text{ cm} \times 10 = 74.5 \text{ mm}$
9. Convert 52 670 mm to cm
 $52\,670 \text{ mm} \div 10 = 5267 \text{ cm}$
10. Convert 3.4 mm to cm
 $3.4 \text{ mm} \div 10 = 0.34 \text{ cm}$