

Converting Between cm^2 and mm^2 (A)

Name: _____

Date: _____

Score: _____ /10

Complete each conversion. Symbols for copying and pasting: $\times \div ^2 ^3$.



1. Convert $33\,000\text{ mm}^2$ to cm^2
2. Convert $94\,950\text{ mm}^2$ to cm^2
3. Convert 188 mm^2 to cm^2
4. Convert 1.9 cm^2 to mm^2
5. Convert 349 cm^2 to mm^2
6. Convert 237 cm^2 to mm^2
7. Convert $93\,000\text{ mm}^2$ to cm^2
8. Convert 53.86 cm^2 to mm^2
9. Convert 896 cm^2 to mm^2
10. Convert 5600 mm^2 to cm^2

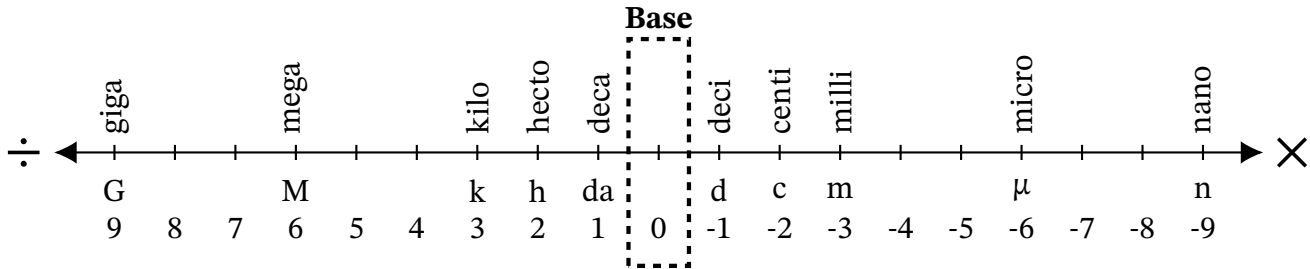
Converting Between cm^2 and mm^2 (A) Answers

Name: _____

Date: _____

Score: _____ /10

Complete each conversion. Symbols for copying and pasting: $\times \div ^2 ^3$.



1. Convert $33\,000\text{ mm}^2$ to cm^2

$$33\,000\text{ mm}^2 \div 100 = 330\text{ cm}^2$$

2. Convert $94\,950\text{ mm}^2$ to cm^2

$$94\,950\text{ mm}^2 \div 100 = 949.5\text{ cm}^2$$

3. Convert 188 mm^2 to cm^2

$$188\text{ mm}^2 \div 100 = 1.88\text{ cm}^2$$

4. Convert 1.9 cm^2 to mm^2

$$1.9\text{ cm}^2 \times 100 = 190\text{ mm}^2$$

5. Convert 349 cm^2 to mm^2

$$349\text{ cm}^2 \times 100 = 34\,900\text{ mm}^2$$

6. Convert 237 cm^2 to mm^2

$$237\text{ cm}^2 \times 100 = 23\,700\text{ mm}^2$$

7. Convert $93\,000\text{ mm}^2$ to cm^2

$$93\,000\text{ mm}^2 \div 100 = 930\text{ cm}^2$$

8. Convert 53.86 cm^2 to mm^2

$$53.86\text{ cm}^2 \times 100 = 5386\text{ mm}^2$$

9. Convert 896 cm^2 to mm^2

$$896\text{ cm}^2 \times 100 = 89\,600\text{ mm}^2$$

10. Convert 5600 mm^2 to cm^2

$$5600\text{ mm}^2 \div 100 = 56\text{ cm}^2$$

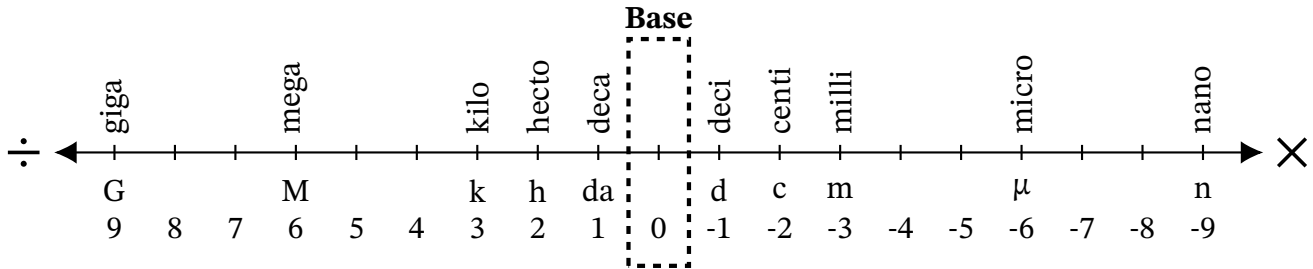
Converting Between cm^2 and mm^2 (B)

Name: _____

Date: _____

Score: _____ /10

Complete each conversion. Symbols for copying and pasting: $\times \div ^2 ^3$.



1. Convert 520.3 cm^2 to mm^2
2. Convert $18\,540\,000 \text{ mm}^2$ to cm^2
3. Convert 9745 mm^2 to cm^2
4. Convert 0.0034 cm^2 to mm^2
5. Convert 0.0582 cm^2 to mm^2
6. Convert 75 mm^2 to cm^2
7. Convert 959.1 cm^2 to mm^2
8. Convert 8370 mm^2 to cm^2
9. Convert $63\,960\,000 \text{ mm}^2$ to cm^2
10. Convert 3.46 cm^2 to mm^2

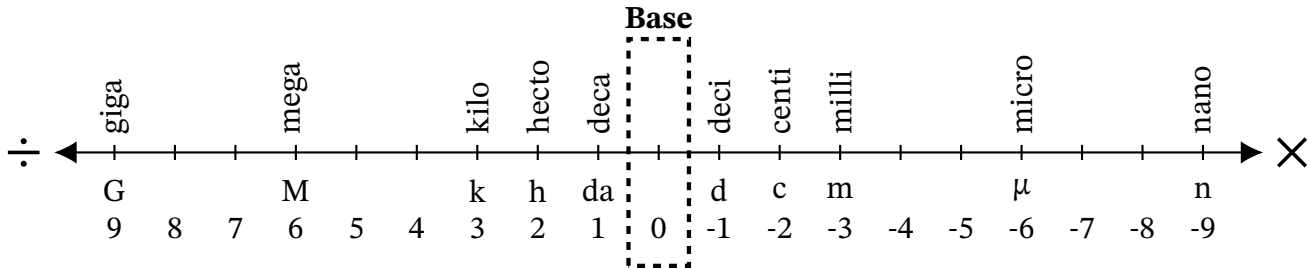
Converting Between cm^2 and mm^2 (B) Answers

Name: _____

Date: _____

Score: _____ /10

Complete each conversion. Symbols for copying and pasting: $\times \div ^2 ^3$.



1. Convert 520.3 cm^2 to mm^2

$$520.3 \text{ cm}^2 \times 100 = 52\,030 \text{ mm}^2$$

2. Convert $18\,540\,000 \text{ mm}^2$ to cm^2

$$18\,540\,000 \text{ mm}^2 \div 100 = 185\,400 \text{ cm}^2$$

3. Convert 9745 mm^2 to cm^2

$$9745 \text{ mm}^2 \div 100 = 97.45 \text{ cm}^2$$

4. Convert 0.0034 cm^2 to mm^2

$$0.0034 \text{ cm}^2 \times 100 = 0.34 \text{ mm}^2$$

5. Convert 0.0582 cm^2 to mm^2

$$0.0582 \text{ cm}^2 \times 100 = 5.82 \text{ mm}^2$$

6. Convert 75 mm^2 to cm^2

$$75 \text{ mm}^2 \div 100 = 0.75 \text{ cm}^2$$

7. Convert 959.1 cm^2 to mm^2

$$959.1 \text{ cm}^2 \times 100 = 95\,910 \text{ mm}^2$$

8. Convert 8370 mm^2 to cm^2

$$8370 \text{ mm}^2 \div 100 = 83.7 \text{ cm}^2$$

9. Convert $63\,960\,000 \text{ mm}^2$ to cm^2

$$63\,960\,000 \text{ mm}^2 \div 100 = 639\,600 \text{ cm}^2$$

10. Convert 3.46 cm^2 to mm^2

$$3.46 \text{ cm}^2 \times 100 = 346 \text{ mm}^2$$

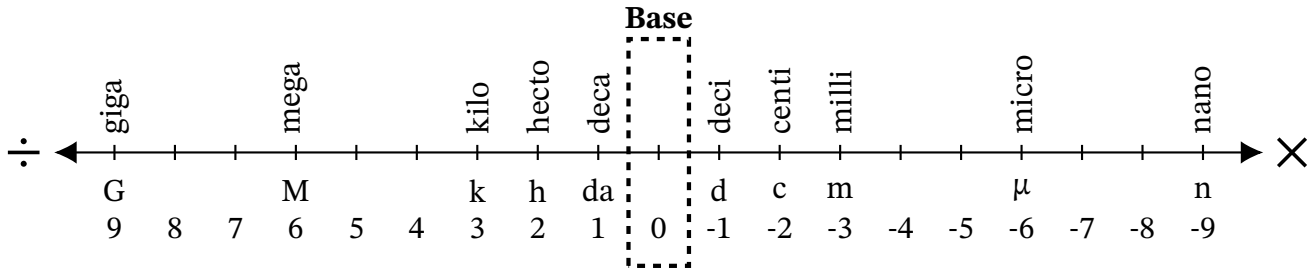
Converting Between cm^2 and mm^2 (C)

Name: _____

Date: _____

Score: _____ /10

Complete each conversion. Symbols for copying and pasting: $\times \div ^2 ^3$.



1. Convert 7500 mm^2 to cm^2
2. Convert 2649 mm^2 to cm^2
3. Convert 7031 cm^2 to mm^2
4. Convert 318.4 cm^2 to mm^2
5. Convert 4880 mm^2 to cm^2
6. Convert 43 cm^2 to mm^2
7. Convert 51 mm^2 to cm^2
8. Convert 5705 cm^2 to mm^2
9. Convert 9310 mm^2 to cm^2
10. Convert 0.0213 cm^2 to mm^2

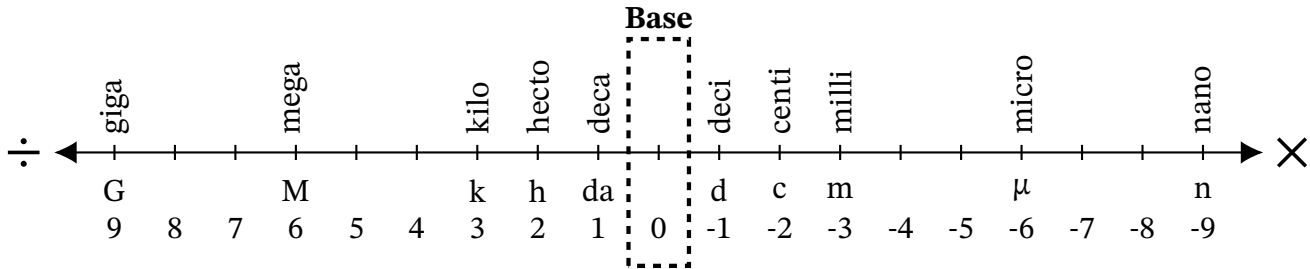
Converting Between cm^2 and mm^2 (C) Answers

Name: _____

Date: _____

Score: _____ /10

Complete each conversion. Symbols for copying and pasting: $\times \div ^2 ^3$.



1. Convert 7500 mm^2 to cm^2

$$7500 \text{ mm}^2 \div 100 = 75 \text{ cm}^2$$

2. Convert 2649 mm^2 to cm^2

$$2649 \text{ mm}^2 \div 100 = 26.49 \text{ cm}^2$$

3. Convert 7031 cm^2 to mm^2

$$7031 \text{ cm}^2 \times 100 = 703\,100 \text{ mm}^2$$

4. Convert 318.4 cm^2 to mm^2

$$318.4 \text{ cm}^2 \times 100 = 31\,840 \text{ mm}^2$$

5. Convert 4880 mm^2 to cm^2

$$4880 \text{ mm}^2 \div 100 = 48.8 \text{ cm}^2$$

6. Convert 43 cm^2 to mm^2

$$43 \text{ cm}^2 \times 100 = 4300 \text{ mm}^2$$

7. Convert 51 mm^2 to cm^2

$$51 \text{ mm}^2 \div 100 = 0.51 \text{ cm}^2$$

8. Convert 5705 cm^2 to mm^2

$$5705 \text{ cm}^2 \times 100 = 570\,500 \text{ mm}^2$$

9. Convert 9310 mm^2 to cm^2

$$9310 \text{ mm}^2 \div 100 = 93.1 \text{ cm}^2$$

10. Convert 0.0213 cm^2 to mm^2

$$0.0213 \text{ cm}^2 \times 100 = 2.13 \text{ mm}^2$$

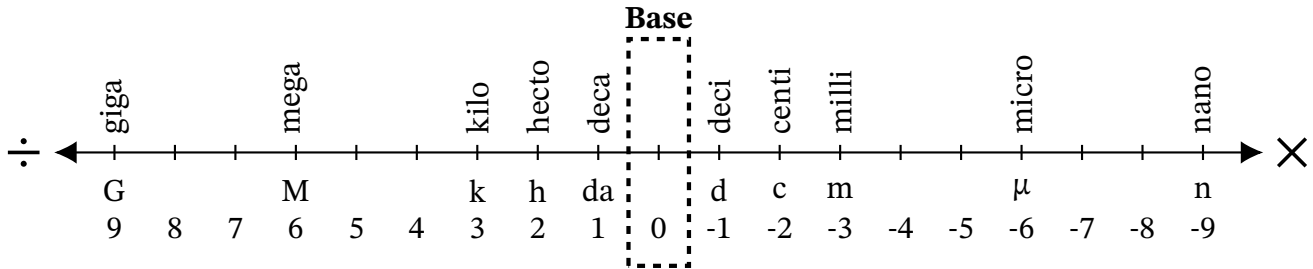
Converting Between cm^2 and mm^2 (D)

Name: _____

Date: _____

Score: _____ /10

Complete each conversion. Symbols for copying and pasting: $\times \div ^2 ^3$.



1. Convert 9380 mm^2 to cm^2
2. Convert 53.23 cm^2 to mm^2
3. Convert 0.015 cm^2 to mm^2
4. Convert $533\,500 \text{ mm}^2$ to cm^2
5. Convert 0.5667 cm^2 to mm^2
6. Convert 0.864 cm^2 to mm^2
7. Convert $3\,448\,000 \text{ mm}^2$ to cm^2
8. Convert 98 mm^2 to cm^2
9. Convert 88 mm^2 to cm^2
10. Convert 4098 cm^2 to mm^2

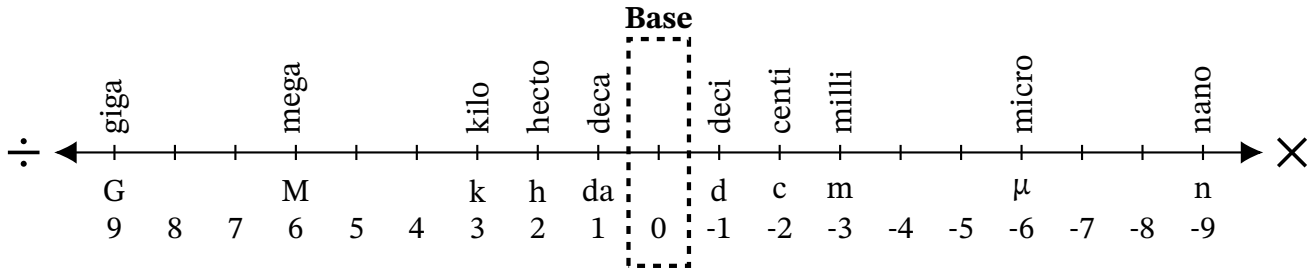
Converting Between cm^2 and mm^2 (D) Answers

Name: _____

Date: _____

Score: _____ /10

Complete each conversion. Symbols for copying and pasting: $\times \div ^2 ^3$.



1. Convert 9380 mm^2 to cm^2

$$9380 \text{ mm}^2 \div 100 = 93.8 \text{ cm}^2$$

2. Convert 53.23 cm^2 to mm^2

$$53.23 \text{ cm}^2 \times 100 = 5323 \text{ mm}^2$$

3. Convert 0.015 cm^2 to mm^2

$$0.015 \text{ cm}^2 \times 100 = 1.5 \text{ mm}^2$$

4. Convert $533\,500 \text{ mm}^2$ to cm^2

$$533\,500 \text{ mm}^2 \div 100 = 5335 \text{ cm}^2$$

5. Convert 0.5667 cm^2 to mm^2

$$0.5667 \text{ cm}^2 \times 100 = 56.67 \text{ mm}^2$$

6. Convert 0.864 cm^2 to mm^2

$$0.864 \text{ cm}^2 \times 100 = 86.4 \text{ mm}^2$$

7. Convert $3\,448\,000 \text{ mm}^2$ to cm^2

$$3\,448\,000 \text{ mm}^2 \div 100 = 34\,480 \text{ cm}^2$$

8. Convert 98 mm^2 to cm^2

$$98 \text{ mm}^2 \div 100 = 0.98 \text{ cm}^2$$

9. Convert 88 mm^2 to cm^2

$$88 \text{ mm}^2 \div 100 = 0.88 \text{ cm}^2$$

10. Convert 4098 cm^2 to mm^2

$$4098 \text{ cm}^2 \times 100 = 409\,800 \text{ mm}^2$$

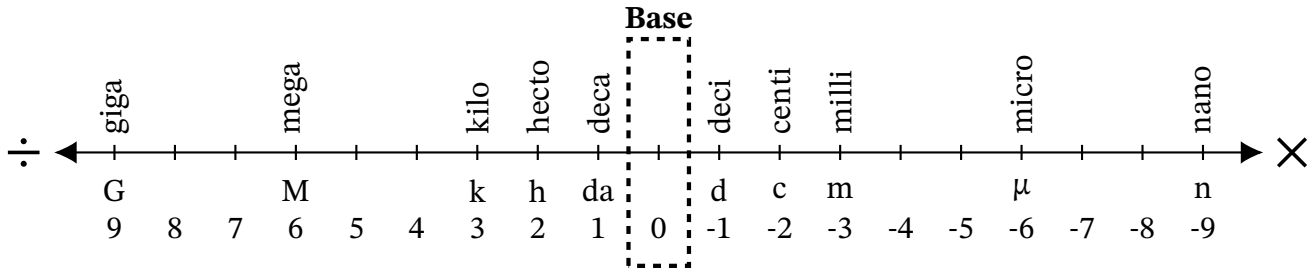
Converting Between cm^2 and mm^2 (E)

Name: _____

Date: _____

Score: _____ /10

Complete each conversion. Symbols for copying and pasting: $\times \div ^2 ^3$.



1. Convert 0.81 cm^2 to mm^2
2. Convert 163 cm^2 to mm^2
3. Convert 6740 mm^2 to cm^2
4. Convert 44.47 cm^2 to mm^2
5. Convert 5820 mm^2 to cm^2
6. Convert $13\,720\,000 \text{ mm}^2$ to cm^2
7. Convert 230 mm^2 to cm^2
8. Convert $267\,000 \text{ mm}^2$ to cm^2
9. Convert 615.5 cm^2 to mm^2
10. Convert 0.0401 cm^2 to mm^2

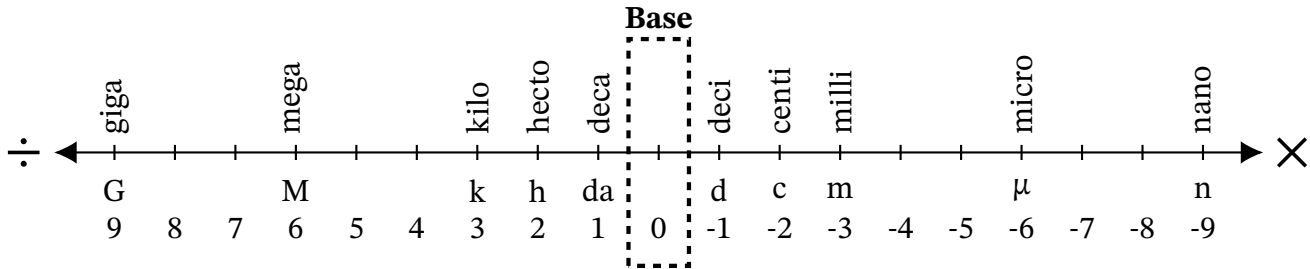
Converting Between cm² and mm² (E) Answers

Name: _____

Date: _____

Score: _____ /10

Complete each conversion. Symbols for copying and pasting: $\times \div ^2 ^3$.



1. Convert 0.81 cm² to mm²

$$0.81 \text{ cm}^2 \times 100 = 81 \text{ mm}^2$$

2. Convert 163 cm² to mm²

$$163 \text{ cm}^2 \times 100 = 16\,300 \text{ mm}^2$$

3. Convert 6740 mm² to cm²

$$6740 \text{ mm}^2 \div 100 = 67.4 \text{ cm}^2$$

4. Convert 44.47 cm² to mm²

$$44.47 \text{ cm}^2 \times 100 = 4447 \text{ mm}^2$$

5. Convert 5820 mm² to cm²

$$5820 \text{ mm}^2 \div 100 = 58.2 \text{ cm}^2$$

6. Convert 13 720 000 mm² to cm²

$$13\,720\,000 \text{ mm}^2 \div 100 = 137\,200 \text{ cm}^2$$

7. Convert 230 mm² to cm²

$$230 \text{ mm}^2 \div 100 = 2.3 \text{ cm}^2$$

8. Convert 267 000 mm² to cm²

$$267\,000 \text{ mm}^2 \div 100 = 2670 \text{ cm}^2$$

9. Convert 615.5 cm² to mm²

$$615.5 \text{ cm}^2 \times 100 = 61\,550 \text{ mm}^2$$

10. Convert 0.0401 cm² to mm²

$$0.0401 \text{ cm}^2 \times 100 = 4.01 \text{ mm}^2$$

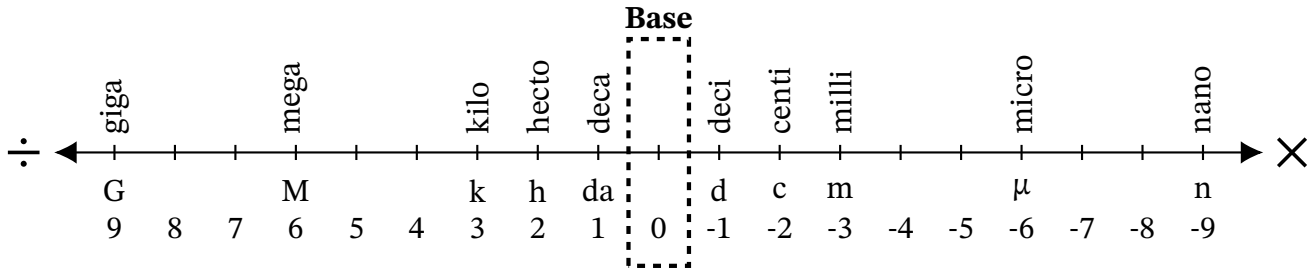
Converting Between cm^2 and mm^2 (F)

Name: _____

Date: _____

Score: _____ /10

Complete each conversion. Symbols for copying and pasting: $\times \div ^2 ^3$.



1. Convert 3.869 cm^2 to mm^2
2. Convert 41 cm^2 to mm^2
3. Convert 4630 mm^2 to cm^2
4. Convert $65\,410\,000 \text{ mm}^2$ to cm^2
5. Convert 4.018 cm^2 to mm^2
6. Convert 570 mm^2 to cm^2
7. Convert 92.61 cm^2 to mm^2
8. Convert 950 mm^2 to cm^2
9. Convert 990 mm^2 to cm^2
10. Convert 0.735 cm^2 to mm^2

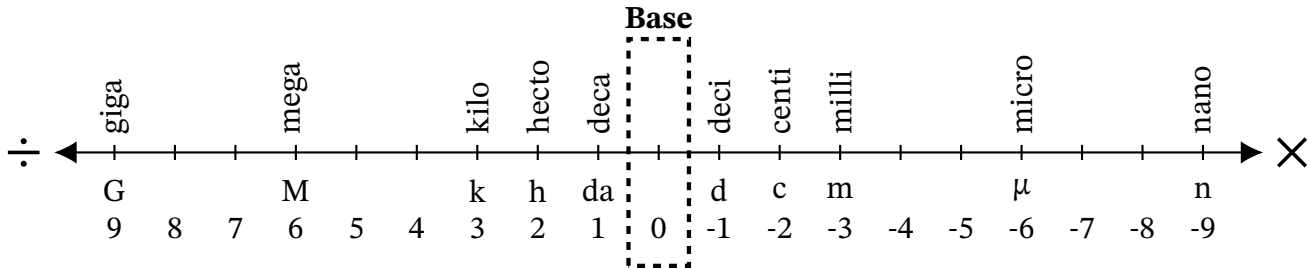
Converting Between cm² and mm² (F) Answers

Name: _____

Date: _____

Score: _____ /10

Complete each conversion. Symbols for copying and pasting: $\times \div ^2 ^3$.



1. Convert 3.869 cm² to mm²

$$3.869 \text{ cm}^2 \times 100 = 386.9 \text{ mm}^2$$

2. Convert 41 cm² to mm²

$$41 \text{ cm}^2 \times 100 = 4100 \text{ mm}^2$$

3. Convert 4630 mm² to cm²

$$4630 \text{ mm}^2 \div 100 = 46.3 \text{ cm}^2$$

4. Convert 65 410 000 mm² to cm²

$$65\,410\,000 \text{ mm}^2 \div 100 = 654\,100 \text{ cm}^2$$

5. Convert 4.018 cm² to mm²

$$4.018 \text{ cm}^2 \times 100 = 401.8 \text{ mm}^2$$

6. Convert 570 mm² to cm²

$$570 \text{ mm}^2 \div 100 = 5.7 \text{ cm}^2$$

7. Convert 92.61 cm² to mm²

$$92.61 \text{ cm}^2 \times 100 = 9261 \text{ mm}^2$$

8. Convert 950 mm² to cm²

$$950 \text{ mm}^2 \div 100 = 9.5 \text{ cm}^2$$

9. Convert 990 mm² to cm²

$$990 \text{ mm}^2 \div 100 = 9.9 \text{ cm}^2$$

10. Convert 0.735 cm² to mm²

$$0.735 \text{ cm}^2 \times 100 = 73.5 \text{ mm}^2$$

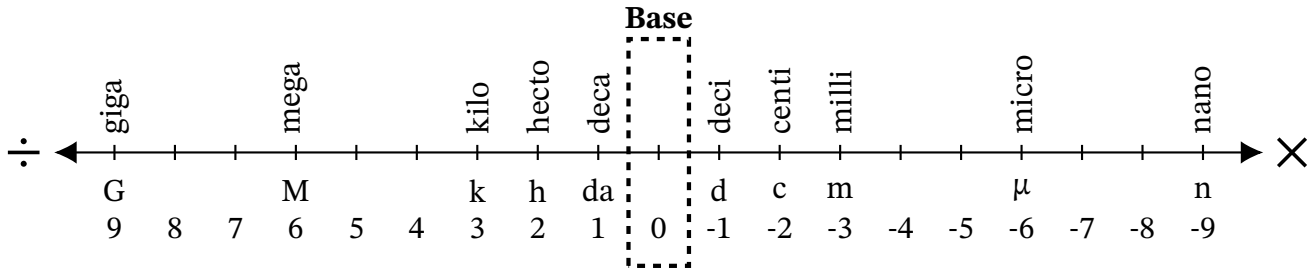
Converting Between cm^2 and mm^2 (G)

Name: _____

Date: _____

Score: _____ /10

Complete each conversion. Symbols for copying and pasting: $\times \div ^2 ^3$.



1. Convert 78.69 cm^2 to mm^2
2. Convert 49.8 cm^2 to mm^2
3. Convert $6\,091\,000 \text{ mm}^2$ to cm^2
4. Convert 94 cm^2 to mm^2
5. Convert $51\,500 \text{ mm}^2$ to cm^2
6. Convert $95\,250 \text{ mm}^2$ to cm^2
7. Convert $779\,600 \text{ mm}^2$ to cm^2
8. Convert 428 mm^2 to cm^2
9. Convert 3456 cm^2 to mm^2
10. Convert 0.0044 cm^2 to mm^2

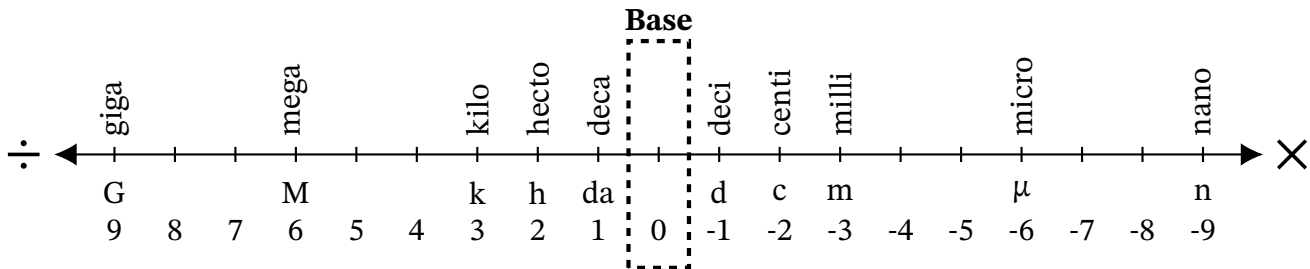
Converting Between cm^2 and mm^2 (G) Answers

Name: _____

Date: _____

Score: _____ /10

Complete each conversion. Symbols for copying and pasting: $\times \div 2^3$.



1. Convert 78.69 cm^2 to mm^2
 $78.69 \text{ cm}^2 \times 100 = 7869 \text{ mm}^2$
2. Convert 49.8 cm^2 to mm^2
 $49.8 \text{ cm}^2 \times 100 = 4980 \text{ mm}^2$
3. Convert $6\,091\,000 \text{ mm}^2$ to cm^2
 $6\,091\,000 \text{ mm}^2 \div 100 = 60\,910 \text{ cm}^2$
4. Convert 94 cm^2 to mm^2
 $94 \text{ cm}^2 \times 100 = 9400 \text{ mm}^2$
5. Convert $51\,500 \text{ mm}^2$ to cm^2
 $51\,500 \text{ mm}^2 \div 100 = 515 \text{ cm}^2$
6. Convert $95\,250 \text{ mm}^2$ to cm^2
 $95\,250 \text{ mm}^2 \div 100 = 952.5 \text{ cm}^2$
7. Convert $779\,600 \text{ mm}^2$ to cm^2
 $779\,600 \text{ mm}^2 \div 100 = 7796 \text{ cm}^2$
8. Convert 428 mm^2 to cm^2
 $428 \text{ mm}^2 \div 100 = 4.28 \text{ cm}^2$
9. Convert 3456 cm^2 to mm^2
 $3456 \text{ cm}^2 \times 100 = 345\,600 \text{ mm}^2$
10. Convert 0.0044 cm^2 to mm^2
 $0.0044 \text{ cm}^2 \times 100 = 0.44 \text{ mm}^2$

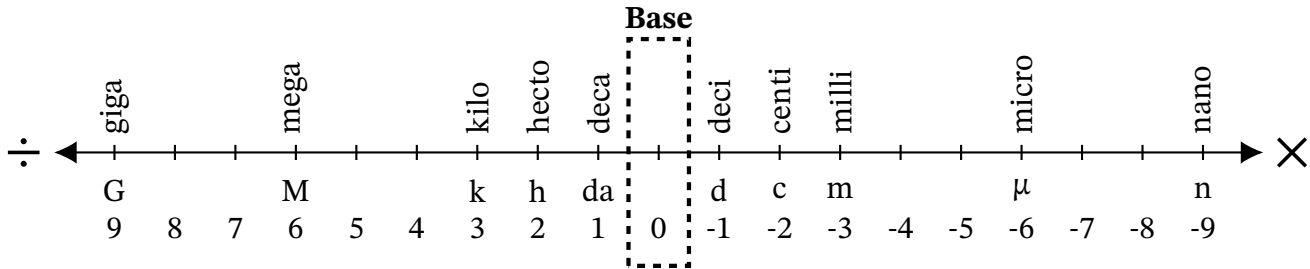
Converting Between cm^2 and mm^2 (H)

Name: _____

Date: _____

Score: _____ /10

Complete each conversion. Symbols for copying and pasting: $\times \div ^2 ^3$.



1. Convert 2.2 cm^2 to mm^2
2. Convert 4.9 cm^2 to mm^2
3. Convert 4442 cm^2 to mm^2
4. Convert 6.36 cm^2 to mm^2
5. Convert $63\,330\,000 \text{ mm}^2$ to cm^2
6. Convert $22\,500 \text{ mm}^2$ to cm^2
7. Convert $8\,120\,000 \text{ mm}^2$ to cm^2
8. Convert $88\,320 \text{ mm}^2$ to cm^2
9. Convert 0.3415 cm^2 to mm^2
10. Convert $50\,400 \text{ mm}^2$ to cm^2

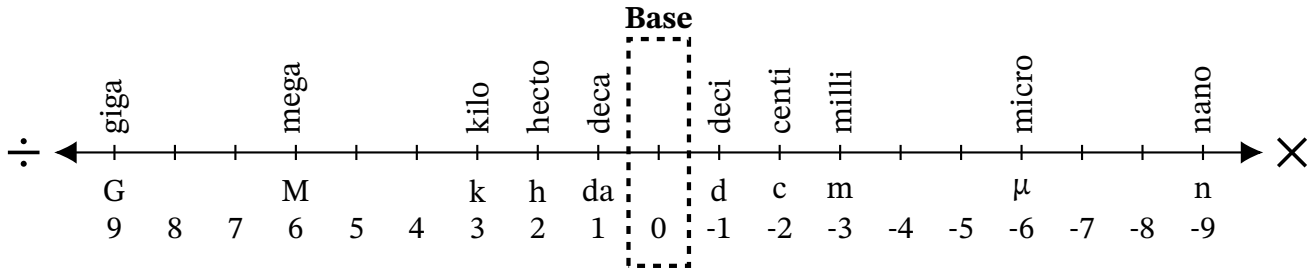
Converting Between cm² and mm² (H) Answers

Name: _____

Date: _____

Score: _____ /10

Complete each conversion. Symbols for copying and pasting: $\times \div 2^3$.



1. Convert 2.2 cm² to mm²

$$2.2 \text{ cm}^2 \times 100 = 220 \text{ mm}^2$$

2. Convert 4.9 cm² to mm²

$$4.9 \text{ cm}^2 \times 100 = 490 \text{ mm}^2$$

3. Convert 4442 cm² to mm²

$$4442 \text{ cm}^2 \times 100 = 444\,200 \text{ mm}^2$$

4. Convert 6.36 cm² to mm²

$$6.36 \text{ cm}^2 \times 100 = 636 \text{ mm}^2$$

5. Convert 63 330 000 mm² to cm²

$$63\,330\,000 \text{ mm}^2 \div 100 = 633\,300 \text{ cm}^2$$

6. Convert 22 500 mm² to cm²

$$22\,500 \text{ mm}^2 \div 100 = 225 \text{ cm}^2$$

7. Convert 8 120 000 mm² to cm²

$$8\,120\,000 \text{ mm}^2 \div 100 = 81\,200 \text{ cm}^2$$

8. Convert 88 320 mm² to cm²

$$88\,320 \text{ mm}^2 \div 100 = 883.2 \text{ cm}^2$$

9. Convert 0.3415 cm² to mm²

$$0.3415 \text{ cm}^2 \times 100 = 34.15 \text{ mm}^2$$

10. Convert 50 400 mm² to cm²

$$50\,400 \text{ mm}^2 \div 100 = 504 \text{ cm}^2$$

Converting Between cm^2 and mm^2 (I)

Name: _____

Date: _____

Score: _____ /10

Complete each conversion. Symbols for copying and pasting: $\times \div ^2 ^3$.



1. Convert $34\,870\,000\text{ mm}^2$ to cm^2
2. Convert $4\,521\,000\text{ mm}^2$ to cm^2
3. Convert 9303 mm^2 to cm^2
4. Convert 0.588 cm^2 to mm^2
5. Convert 89.83 cm^2 to mm^2
6. Convert 0.761 cm^2 to mm^2
7. Convert $94\,100\text{ mm}^2$ to cm^2
8. Convert 0.8848 cm^2 to mm^2
9. Convert 0.0675 cm^2 to mm^2
10. Convert 5530 mm^2 to cm^2

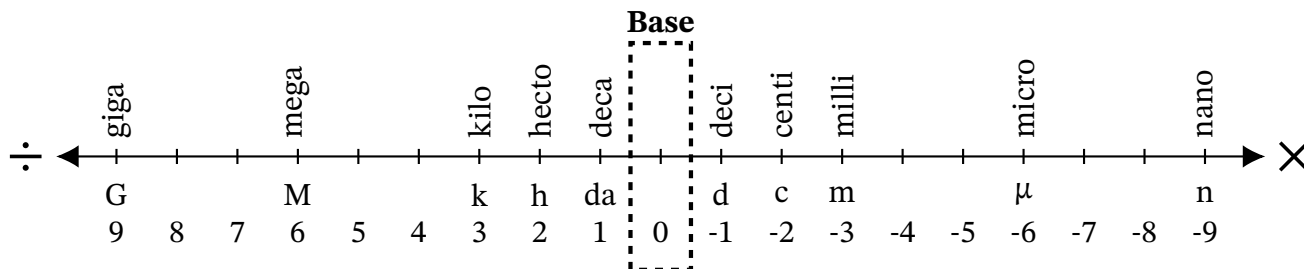
Converting Between cm^2 and mm^2 (I) Answers

Name: _____

Date: _____

Score: _____ /10

Complete each conversion. Symbols for copying and pasting: $\times \div ^2 ^3$.



1. Convert $34\,870\,000\text{ mm}^2$ to cm^2

$$34\,870\,000\text{ mm}^2 \div 100 = 348\,700\text{ cm}^2$$

2. Convert $4\,521\,000\text{ mm}^2$ to cm^2

$$4\,521\,000\text{ mm}^2 \div 100 = 45\,210\text{ cm}^2$$

3. Convert 9303 mm^2 to cm^2

$$9303\text{ mm}^2 \div 100 = 93.03\text{ cm}^2$$

4. Convert 0.588 cm^2 to mm^2

$$0.588\text{ cm}^2 \times 100 = 58.8\text{ mm}^2$$

5. Convert 89.83 cm^2 to mm^2

$$89.83\text{ cm}^2 \times 100 = 8983\text{ mm}^2$$

6. Convert 0.761 cm^2 to mm^2

$$0.761\text{ cm}^2 \times 100 = 76.1\text{ mm}^2$$

7. Convert $94\,100\text{ mm}^2$ to cm^2

$$94\,100\text{ mm}^2 \div 100 = 941\text{ cm}^2$$

8. Convert 0.8848 cm^2 to mm^2

$$0.8848\text{ cm}^2 \times 100 = 88.48\text{ mm}^2$$

9. Convert 0.0675 cm^2 to mm^2

$$0.0675\text{ cm}^2 \times 100 = 6.75\text{ mm}^2$$

10. Convert 5530 mm^2 to cm^2

$$5530\text{ mm}^2 \div 100 = 55.3\text{ cm}^2$$

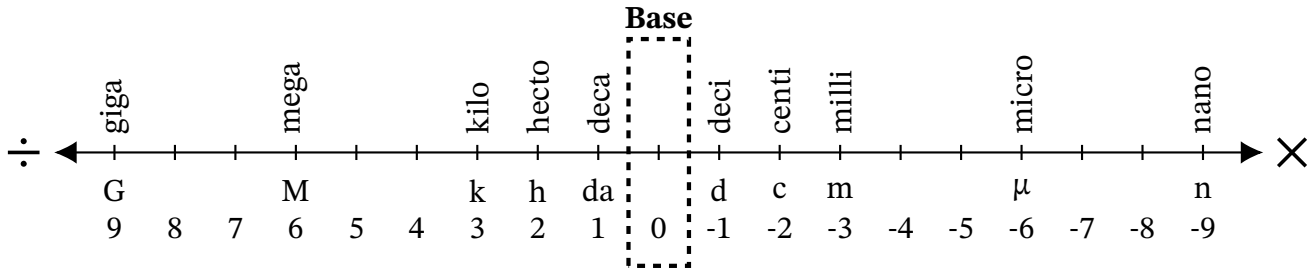
Converting Between cm^2 and mm^2 (J)

Name: _____

Date: _____

Score: _____ /10

Complete each conversion. Symbols for copying and pasting: $\times \div ^2 ^3$.



1. Convert $31\,400\text{ mm}^2$ to cm^2
2. Convert 0.55 cm^2 to mm^2
3. Convert 2.59 cm^2 to mm^2
4. Convert 150 mm^2 to cm^2
5. Convert 11 mm^2 to cm^2
6. Convert 93.95 cm^2 to mm^2
7. Convert 0.71 cm^2 to mm^2
8. Convert 1543 mm^2 to cm^2
9. Convert 7140 mm^2 to cm^2
10. Convert 0.0347 cm^2 to mm^2

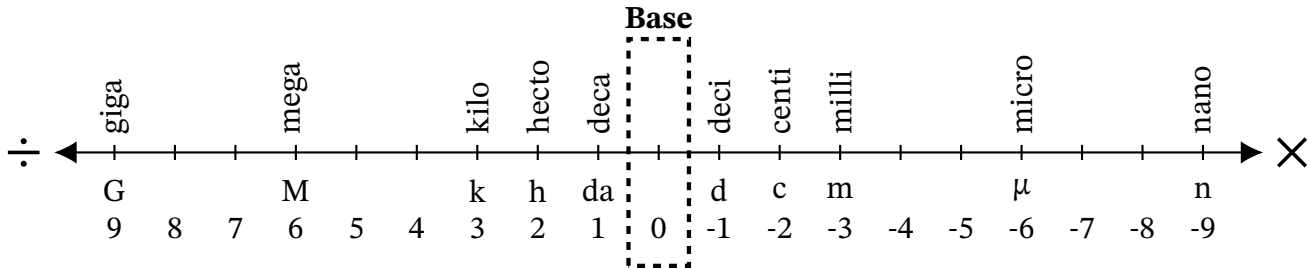
Converting Between cm^2 and mm^2 (J) Answers

Name: _____

Date: _____

Score: _____ /10

Complete each conversion. Symbols for copying and pasting: $\times \div ^2 ^3$.



1. Convert $31\,400\text{ mm}^2$ to cm^2

$$31\,400\text{ mm}^2 \div 100 = 314\text{ cm}^2$$

2. Convert 0.55 cm^2 to mm^2

$$0.55\text{ cm}^2 \times 100 = 55\text{ mm}^2$$

3. Convert 2.59 cm^2 to mm^2

$$2.59\text{ cm}^2 \times 100 = 259\text{ mm}^2$$

4. Convert 150 mm^2 to cm^2

$$150\text{ mm}^2 \div 100 = 1.5\text{ cm}^2$$

5. Convert 11 mm^2 to cm^2

$$11\text{ mm}^2 \div 100 = 0.11\text{ cm}^2$$

6. Convert 93.95 cm^2 to mm^2

$$93.95\text{ cm}^2 \times 100 = 9395\text{ mm}^2$$

7. Convert 0.71 cm^2 to mm^2

$$0.71\text{ cm}^2 \times 100 = 71\text{ mm}^2$$

8. Convert 1543 mm^2 to cm^2

$$1543\text{ mm}^2 \div 100 = 15.43\text{ cm}^2$$

9. Convert 7140 mm^2 to cm^2

$$7140\text{ mm}^2 \div 100 = 71.4\text{ cm}^2$$

10. Convert 0.0347 cm^2 to mm^2

$$0.0347\text{ cm}^2 \times 100 = 3.47\text{ mm}^2$$