

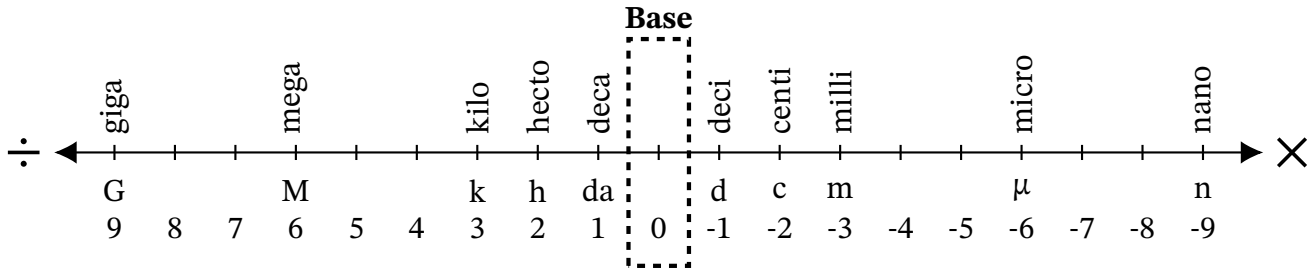
Converting Between m^2 , hm^2 and km^2 (A)

Name: _____

Date: _____

Score: _____ /10

Complete each conversion. Symbols for copying and pasting: $\times \div ^2 ^3$.



1. Convert 726.9 km^2 to hm^2
2. Convert 0.5953 km^2 to m^2
3. Convert $7\,560\,000 \text{ m}^2$ to km^2
4. Convert $551\,600\,000\,000 \text{ m}^2$ to km^2
5. Convert $2\,100\,000\,000 \text{ m}^2$ to km^2
6. Convert $9\,030\,000 \text{ m}^2$ to hm^2
7. Convert 0.37 hm^2 to m^2
8. Convert 0.516 km^2 to hm^2
9. Convert 0.0075 km^2 to hm^2
10. Convert $207\,000\,000 \text{ m}^2$ to hm^2

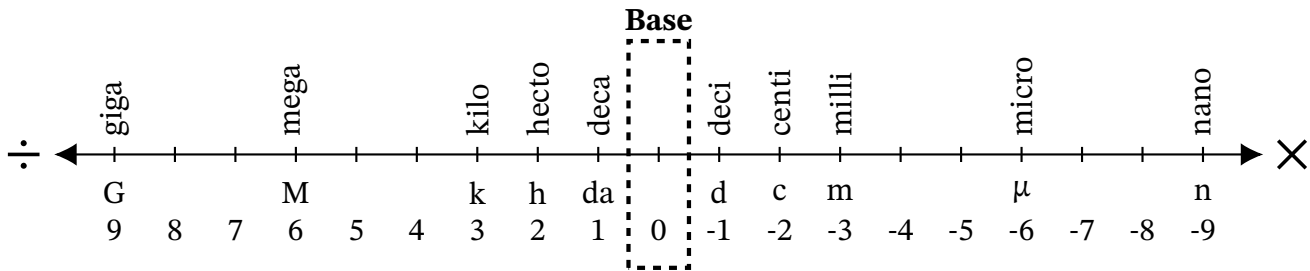
Converting Between m², hm² and km² (A) Answers

Name: _____

Date: _____

Score: _____ /10

Complete each conversion. Symbols for copying and pasting: × ÷ 2³.



1. Convert 726.9 km² to hm²

$$726.9 \text{ km}^2 \times 100 = 72\,690 \text{ hm}^2$$

2. Convert 0.5953 km² to m²

$$0.5953 \text{ km}^2 \times 100 \times 100 \times 100 = 59\,530 \text{ m}^2$$

3. Convert 7 560 000 m² to km²

$$7\,560\,000 \text{ m}^2 \div 100 \div 100 \div 100 = 7.56 \text{ km}^2$$

4. Convert 551 600 000 000 m² to km²

$$551\,600\,000\,000 \text{ m}^2 \div 100 \div 100 \div 100 = 551\,600 \text{ km}^2$$

5. Convert 2 100 000 000 m² to km²

$$2\,100\,000\,000 \text{ m}^2 \div 100 \div 100 \div 100 = 2\,100 \text{ km}^2$$

6. Convert 9 030 000 m² to hm²

$$9\,030\,000 \text{ m}^2 \div 100 \div 100 = 903 \text{ hm}^2$$

7. Convert 0.37 hm² to m²

$$0.37 \text{ hm}^2 \times 100 \times 100 = 3\,700 \text{ m}^2$$

8. Convert 0.516 km² to hm²

$$0.516 \text{ km}^2 \times 100 = 51.6 \text{ hm}^2$$

9. Convert 0.0075 km² to hm²

$$0.0075 \text{ km}^2 \times 100 = 0.75 \text{ hm}^2$$

10. Convert 207 000 000 m² to hm²

$$207\,000\,000 \text{ m}^2 \div 100 \div 100 = 20\,700 \text{ hm}^2$$

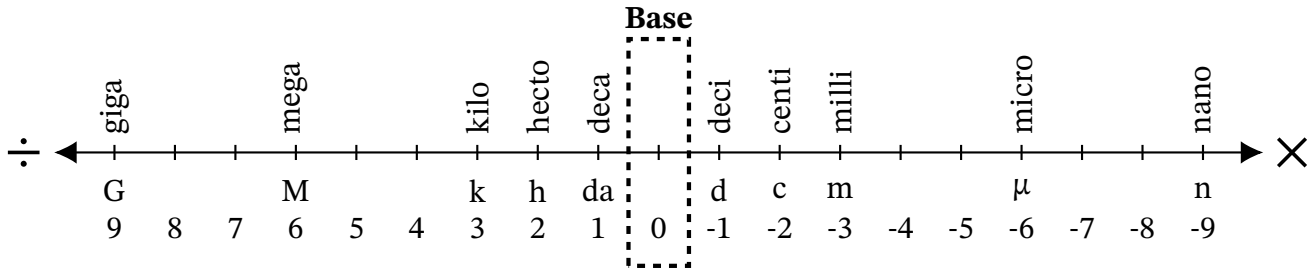
Converting Between m^2 , hm^2 and km^2 (B)

Name: _____

Date: _____

Score: _____ /10

Complete each conversion. Symbols for copying and pasting: $\times \div ^2 ^3$.



1. Convert 0.00000666 km^2 to m^2
2. Convert $460\,000 \text{ hm}^2$ to km^2
3. Convert 0.00054 km^2 to m^2
4. Convert $17\,170\,000 \text{ m}^2$ to hm^2
5. Convert 0.0000235 km^2 to m^2
6. Convert 0.497 hm^2 to m^2
7. Convert $49\,760\,000 \text{ m}^2$ to hm^2
8. Convert $691\,000 \text{ hm}^2$ to km^2
9. Convert 0.5292 km^2 to hm^2
10. Convert $79\,780\,000 \text{ m}^2$ to km^2

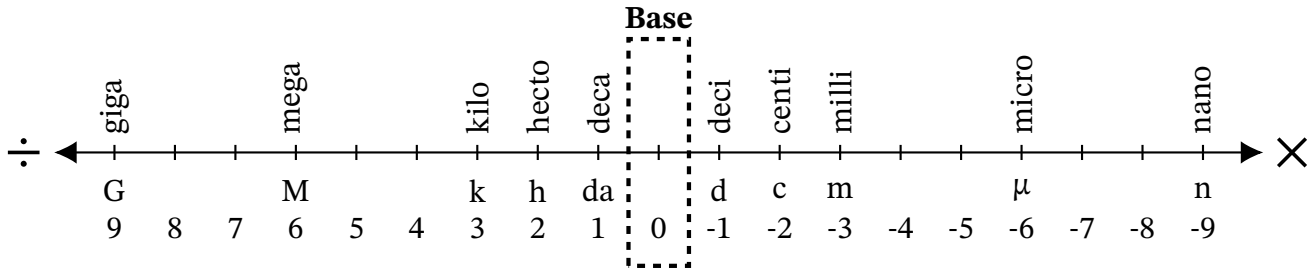
Converting Between m², hm² and km² (B) Answers

Name: _____

Date: _____

Score: _____ /10

Complete each conversion. Symbols for copying and pasting: $\times \div ^2 ^3$.



1. Convert 0.00000666 km² to m²
 $0.00000666 \text{ km}^2 \times 100 \times 100 \times 100 = 6.66 \text{ m}^2$
2. Convert 460 000 hm² to km²
 $460\,000 \text{ hm}^2 \div 100 = 4600 \text{ km}^2$
3. Convert 0.00054 km² to m²
 $0.00054 \text{ km}^2 \times 100 \times 100 \times 100 = 540 \text{ m}^2$
4. Convert 17 170 000 m² to hm²
 $17\,170\,000 \text{ m}^2 \div 100 \div 100 = 1717 \text{ hm}^2$
5. Convert 0.0000235 km² to m²
 $0.0000235 \text{ km}^2 \times 100 \times 100 \times 100 = 23.5 \text{ m}^2$
6. Convert 0.497 hm² to m²
 $0.497 \text{ hm}^2 \times 100 \times 100 = 4970 \text{ m}^2$
7. Convert 49 760 000 m² to hm²
 $49\,760\,000 \text{ m}^2 \div 100 \div 100 = 4976 \text{ hm}^2$
8. Convert 691 000 hm² to km²
 $691\,000 \text{ hm}^2 \div 100 = 6910 \text{ km}^2$
9. Convert 0.5292 km² to hm²
 $0.5292 \text{ km}^2 \times 100 = 52.92 \text{ hm}^2$
10. Convert 79 780 000 m² to km²
 $79\,780\,000 \text{ m}^2 \div 100 \div 100 \div 100 = 79.78 \text{ km}^2$

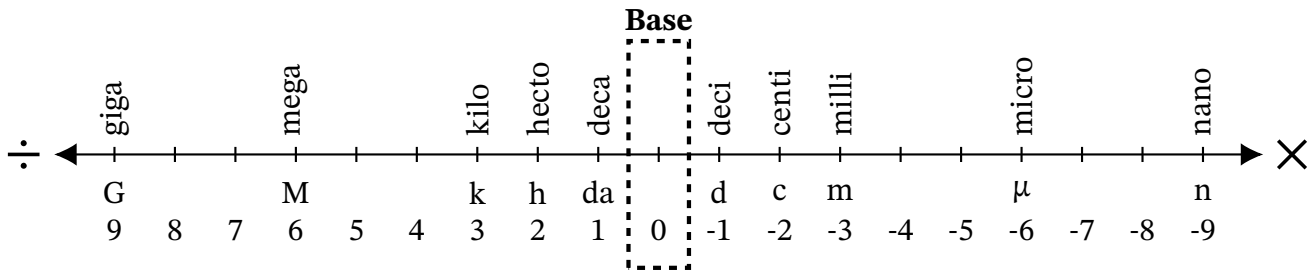
Converting Between m^2 , hm^2 and km^2 (C)

Name: _____

Date: _____

Score: _____ /10

Complete each conversion. Symbols for copying and pasting: $\times \div ^2 ^3$.



1. Convert 94 100 000 000 m^2 to km^2
2. Convert 12 000 hm^2 to km^2
3. Convert 0.00323 hm^2 to m^2
4. Convert 0.000081 km^2 to m^2
5. Convert 0.000238 km^2 to m^2
6. Convert 0.08327 km^2 to m^2
7. Convert 90 800 hm^2 to km^2
8. Convert 4600 m^2 to hm^2
9. Convert 939 000 000 m^2 to hm^2
10. Convert 489 km^2 to hm^2

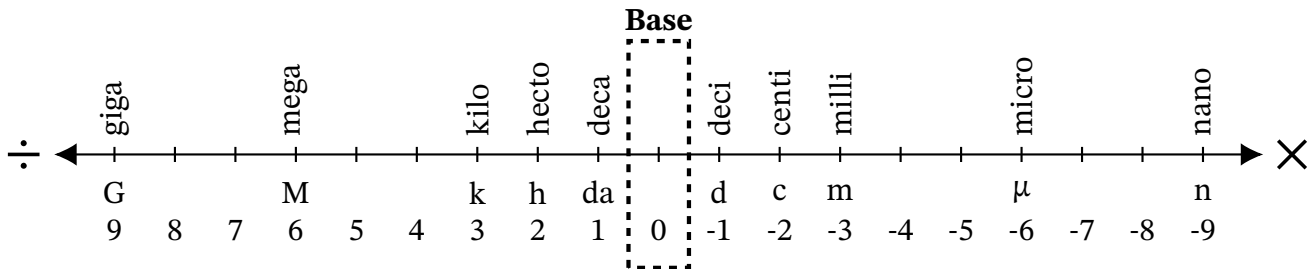
Converting Between m², hm² and km² (C) Answers

Name: _____

Date: _____

Score: _____ /10

Complete each conversion. Symbols for copying and pasting: × ÷ 2³.



1. Convert 94 100 000 000 m² to km²

$$94\,100\,000\,000\text{ m}^2 \div 100 \div 100 \div 100 = 94\,100\text{ km}^2$$

2. Convert 12 000 hm² to km²

$$12\,000\text{ hm}^2 \div 100 = 120\text{ km}^2$$

3. Convert 0.00323 hm² to m²

$$0.00323\text{ hm}^2 \times 100 \times 100 = 32.3\text{ m}^2$$

4. Convert 0.000081 km² to m²

$$0.000081\text{ km}^2 \times 100 \times 100 \times 100 = 81\text{ m}^2$$

5. Convert 0.000238 km² to m²

$$0.000238\text{ km}^2 \times 100 \times 100 \times 100 = 238\text{ m}^2$$

6. Convert 0.08327 km² to m²

$$0.08327\text{ km}^2 \times 100 \times 100 \times 100 = 83\,270\text{ m}^2$$

7. Convert 90 800 hm² to km²

$$90\,800\text{ hm}^2 \div 100 = 908\text{ km}^2$$

8. Convert 4600 m² to hm²

$$4600\text{ m}^2 \div 100 \div 100 = 0.46\text{ hm}^2$$

9. Convert 939 000 000 m² to hm²

$$939\,000\,000\text{ m}^2 \div 100 \div 100 = 93\,900\text{ hm}^2$$

10. Convert 489 km² to hm²

$$489\text{ km}^2 \times 100 = 48\,900\text{ hm}^2$$

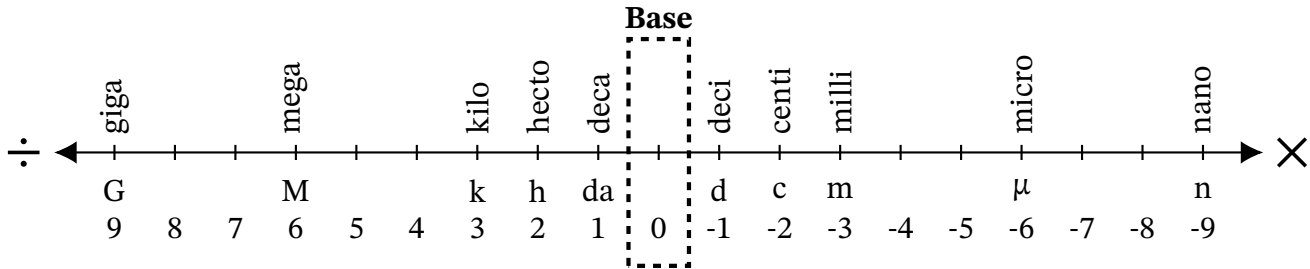
Converting Between m^2 , hm^2 and km^2 (D)

Name: _____

Date: _____

Score: _____ /10

Complete each conversion. Symbols for copying and pasting: $\times \div ^2 ^3$.



1. Convert 8490 hm^2 to km^2
2. Convert 0.00118 km^2 to m^2
3. Convert 5.744 hm^2 to m^2
4. Convert $11\,600 \text{ m}^2$ to hm^2
5. Convert 42 hm^2 to km^2
6. Convert $29\,000\,000 \text{ m}^2$ to km^2
7. Convert $324\,700 \text{ m}^2$ to hm^2
8. Convert 0.009283 km^2 to m^2
9. Convert 0.0048 km^2 to m^2
10. Convert 40.7 km^2 to hm^2

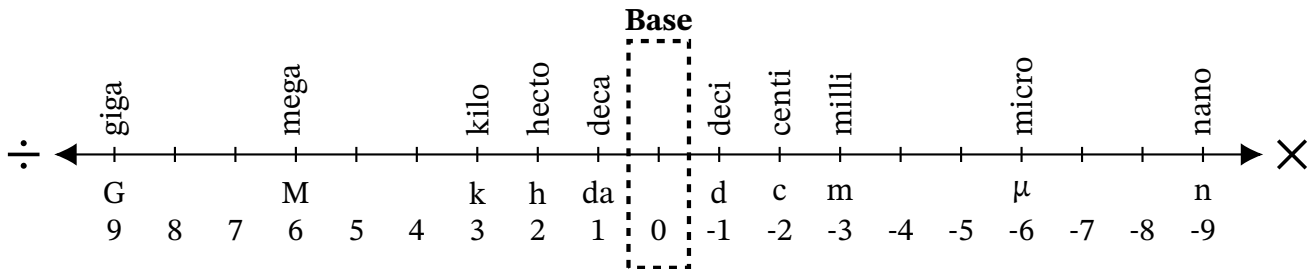
Converting Between m², hm² and km² (D) Answers

Name: _____

Date: _____

Score: _____ /10

Complete each conversion. Symbols for copying and pasting: $\times \div 2^3$.



1. Convert 8490 hm² to km²
 $8490 \text{ hm}^2 \div 100 = 84.9 \text{ km}^2$
2. Convert 0.00118 km² to m²
 $0.00118 \text{ km}^2 \times 100 \times 100 \times 100 = 1180 \text{ m}^2$
3. Convert 5.744 hm² to m²
 $5.744 \text{ hm}^2 \times 100 \times 100 = 57\,440 \text{ m}^2$
4. Convert 11 600 m² to hm²
 $11\,600 \text{ m}^2 \div 100 \div 100 = 1.16 \text{ hm}^2$
5. Convert 42 hm² to km²
 $42 \text{ hm}^2 \div 100 = 0.42 \text{ km}^2$
6. Convert 29 000 000 m² to km²
 $29\,000\,000 \text{ m}^2 \div 100 \div 100 \div 100 = 29 \text{ km}^2$
7. Convert 324 700 m² to hm²
 $324\,700 \text{ m}^2 \div 100 \div 100 = 32.47 \text{ hm}^2$
8. Convert 0.009283 km² to m²
 $0.009283 \text{ km}^2 \times 100 \times 100 \times 100 = 9283 \text{ m}^2$
9. Convert 0.0048 km² to m²
 $0.0048 \text{ km}^2 \times 100 \times 100 \times 100 = 4800 \text{ m}^2$
10. Convert 40.7 km² to hm²
 $40.7 \text{ km}^2 \times 100 = 4070 \text{ hm}^2$

Converting Between m^2 , hm^2 and km^2 (E)

Name: _____

Date: _____

Score: _____ /10

Complete each conversion. Symbols for copying and pasting: $\times \div ^2 ^3$.



1. Convert 0.00000085 km^2 to m^2
2. Convert $49\,000 \text{ hm}^2$ to km^2
3. Convert $1\,600\,000 \text{ m}^2$ to km^2
4. Convert 4909 km^2 to hm^2
5. Convert $417\,900 \text{ m}^2$ to hm^2
6. Convert 964.1 km^2 to hm^2
7. Convert 0.244 hm^2 to m^2
8. Convert 0.000034 km^2 to m^2
9. Convert $27\,320\,000\,000 \text{ m}^2$ to km^2
10. Convert 1500 m^2 to hm^2

Converting Between m², hm² and km² (E) Answers

Name: _____

Date: _____

Score: _____ /10

Complete each conversion. Symbols for copying and pasting: × ÷ 2³.



1. Convert 0.00000085 km² to m²
 $0.00000085 \text{ km}^2 \times 100 \times 100 \times 100 = 0.85 \text{ m}^2$
2. Convert 49 000 hm² to km²
 $49\,000 \text{ hm}^2 \div 100 = 490 \text{ km}^2$
3. Convert 1 600 000 m² to km²
 $1\,600\,000 \text{ m}^2 \div 100 \div 100 \div 100 = 1.6 \text{ km}^2$
4. Convert 4909 km² to hm²
 $4909 \text{ km}^2 \times 100 = 490\,900 \text{ hm}^2$
5. Convert 417 900 m² to hm²
 $417\,900 \text{ m}^2 \div 100 \div 100 = 41.79 \text{ hm}^2$
6. Convert 964.1 km² to hm²
 $964.1 \text{ km}^2 \times 100 = 96\,410 \text{ hm}^2$
7. Convert 0.244 hm² to m²
 $0.244 \text{ hm}^2 \times 100 \times 100 = 2440 \text{ m}^2$
8. Convert 0.000034 km² to m²
 $0.000034 \text{ km}^2 \times 100 \times 100 \times 100 = 34 \text{ m}^2$
9. Convert 27 320 000 000 m² to km²
 $27\,320\,000\,000 \text{ m}^2 \div 100 \div 100 \div 100 = 27\,320 \text{ km}^2$
10. Convert 1500 m² to hm²
 $1500 \text{ m}^2 \div 100 \div 100 = 0.15 \text{ hm}^2$

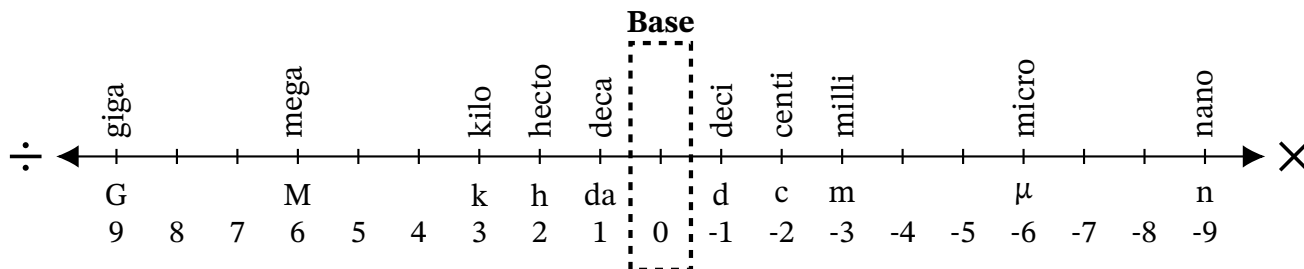
Converting Between m^2 , hm^2 and km^2 (F)

Name: _____

Date: _____

Score: _____ /10

Complete each conversion. Symbols for copying and pasting: $\times \div ^2 ^3$.



1. Convert 3484 hm^2 to km^2
2. Convert $13\,000\,000 \text{ m}^2$ to km^2
3. Convert $64\,000\,000 \text{ m}^2$ to km^2
4. Convert $790\,000 \text{ m}^2$ to km^2
5. Convert 9.11 hm^2 to m^2
6. Convert 929 km^2 to hm^2
7. Convert 3238 km^2 to hm^2
8. Convert 0.5042 hm^2 to m^2
9. Convert $5\,563\,000\,000 \text{ m}^2$ to hm^2
10. Convert 0.03769 km^2 to m^2

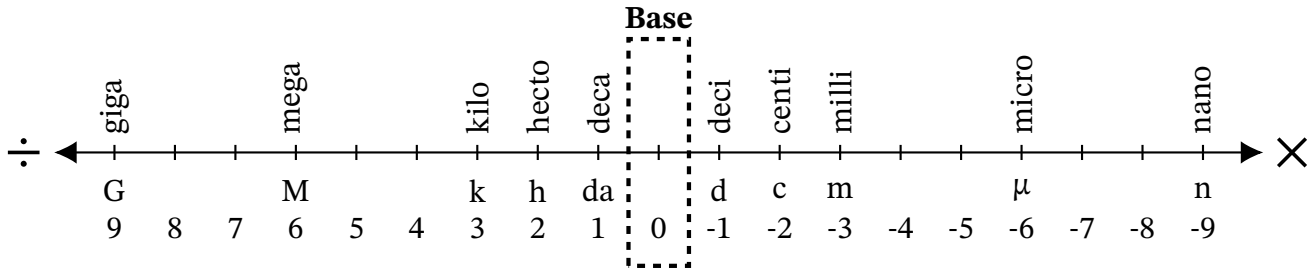
Converting Between m^2 , hm^2 and km^2 (F) Answers

Name: _____

Date: _____

Score: _____ /10

Complete each conversion. Symbols for copying and pasting: $\times \div ^2 ^3$.



1. Convert 3484 hm^2 to km^2

$3484 \text{ hm}^2 \div 100 = 34.84 \text{ km}^2$

2. Convert $13\,000\,000 \text{ m}^2$ to km^2

$13\,000\,000 \text{ m}^2 \div 100 \div 100 \div 100 = 13 \text{ km}^2$

3. Convert $64\,000\,000 \text{ m}^2$ to km^2

$64\,000\,000 \text{ m}^2 \div 100 \div 100 \div 100 = 64 \text{ km}^2$

4. Convert $790\,000 \text{ m}^2$ to km^2

$790\,000 \text{ m}^2 \div 100 \div 100 \div 100 = 0.79 \text{ km}^2$

5. Convert 9.11 hm^2 to m^2

$9.11 \text{ hm}^2 \times 100 \times 100 = 91\,100 \text{ m}^2$

6. Convert 929 km^2 to hm^2

$929 \text{ km}^2 \times 100 = 92\,900 \text{ hm}^2$

7. Convert 3238 km^2 to hm^2

$3238 \text{ km}^2 \times 100 = 323\,800 \text{ hm}^2$

8. Convert 0.5042 hm^2 to m^2

$0.5042 \text{ hm}^2 \times 100 \times 100 = 5042 \text{ m}^2$

9. Convert $5\,563\,000\,000 \text{ m}^2$ to hm^2

$5\,563\,000\,000 \text{ m}^2 \div 100 \div 100 = 556\,300 \text{ hm}^2$

10. Convert 0.03769 km^2 to m^2

$0.03769 \text{ km}^2 \times 100 \times 100 \times 100 = 37\,690 \text{ m}^2$

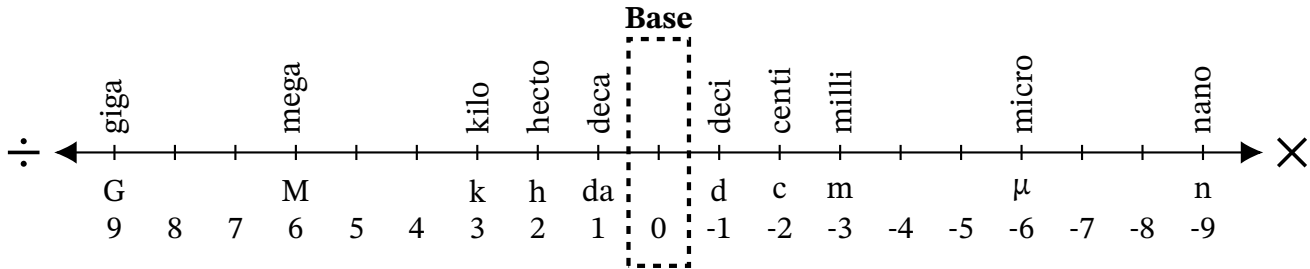
Converting Between m^2 , hm^2 and km^2 (G)

Name: _____

Date: _____

Score: _____ /10

Complete each conversion. Symbols for copying and pasting: $\times \div ^2 ^3$.



1. Convert 26 200 000 m^2 to km^2
2. Convert 46 290 000 000 m^2 to km^2
3. Convert 0.8003 km^2 to hm^2
4. Convert 1975 hm^2 to km^2
5. Convert 7190 hm^2 to km^2
6. Convert 0.5615 hm^2 to m^2
7. Convert 5 560 000 m^2 to km^2
8. Convert 0.000042 hm^2 to m^2
9. Convert 0.00952 km^2 to m^2
10. Convert 0.0299 hm^2 to m^2

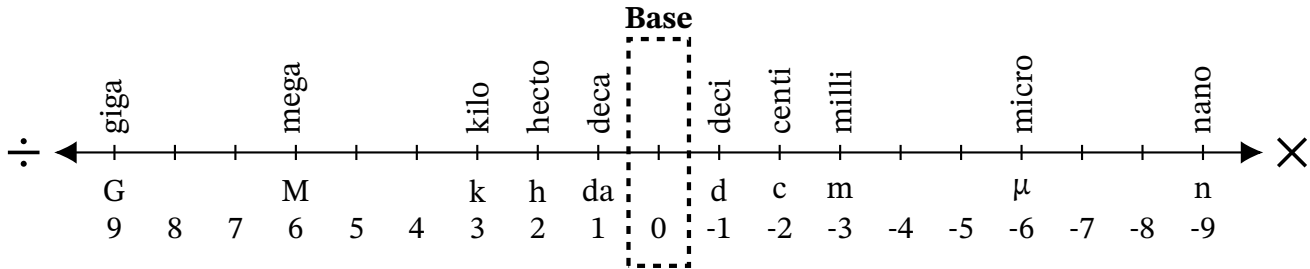
Converting Between m², hm² and km² (G) Answers

Name: _____

Date: _____

Score: _____ /10

Complete each conversion. Symbols for copying and pasting: × ÷ 2³.



1. Convert 26 200 000 m² to km²

$$26\,200\,000\text{ m}^2 \div 100 \div 100 \div 100 = 26.2\text{ km}^2$$

2. Convert 46 290 000 000 m² to km²

$$46\,290\,000\,000\text{ m}^2 \div 100 \div 100 \div 100 = 46\,290\text{ km}^2$$

3. Convert 0.8003 km² to hm²

$$0.8003\text{ km}^2 \times 100 = 80.03\text{ hm}^2$$

4. Convert 1975 hm² to km²

$$1975\text{ hm}^2 \div 100 = 19.75\text{ km}^2$$

5. Convert 7190 hm² to km²

$$7190\text{ hm}^2 \div 100 = 71.9\text{ km}^2$$

6. Convert 0.5615 hm² to m²

$$0.5615\text{ hm}^2 \times 100 \times 100 = 5615\text{ m}^2$$

7. Convert 5 560 000 m² to km²

$$5\,560\,000\text{ m}^2 \div 100 \div 100 \div 100 = 5.56\text{ km}^2$$

8. Convert 0.000042 hm² to m²

$$0.000042\text{ hm}^2 \times 100 \times 100 = 0.42\text{ m}^2$$

9. Convert 0.00952 km² to m²

$$0.00952\text{ km}^2 \times 100 \times 100 \times 100 = 9520\text{ m}^2$$

10. Convert 0.0299 hm² to m²

$$0.0299\text{ hm}^2 \times 100 \times 100 = 299\text{ m}^2$$

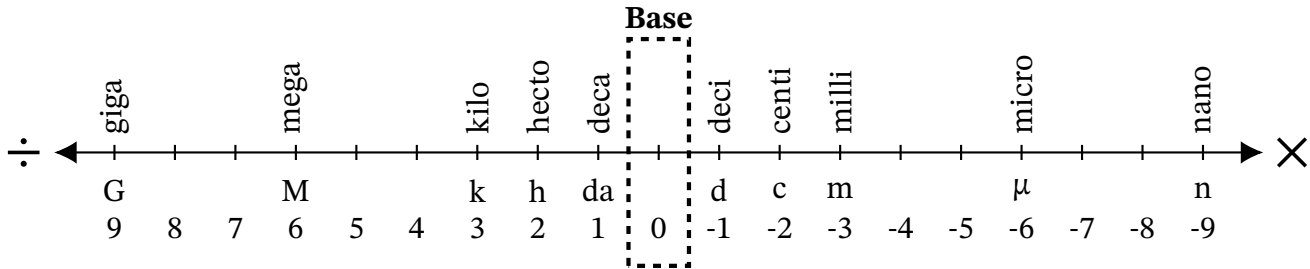
Converting Between m^2 , hm^2 and km^2 (H)

Name: _____

Date: _____

Score: _____ /10

Complete each conversion. Symbols for copying and pasting: $\times \div ^2 ^3$.



1. Convert 1750 hm^2 to km^2
2. Convert $9\,700\,000 \text{ m}^2$ to hm^2
3. Convert 0.8608 hm^2 to m^2
4. Convert $150\,000 \text{ m}^2$ to km^2
5. Convert $75\,780\,000\,000 \text{ m}^2$ to km^2
6. Convert 97.6 km^2 to hm^2
7. Convert 0.005457 km^2 to m^2
8. Convert $513\,000 \text{ hm}^2$ to km^2
9. Convert 4.563 hm^2 to m^2
10. Convert 0.0108 km^2 to m^2

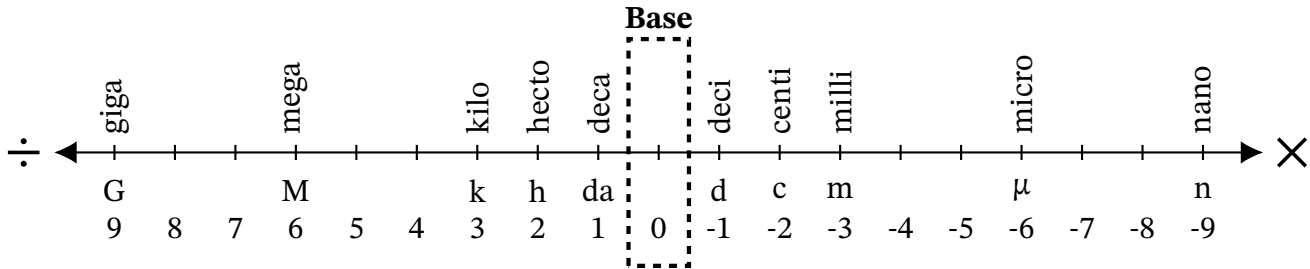
Converting Between m², hm² and km² (H) Answers

Name: _____

Date: _____

Score: _____ /10

Complete each conversion. Symbols for copying and pasting: × ÷ 2³.



1. Convert 1750 hm² to km²

$$1750 \text{ hm}^2 \div 100 = 17.5 \text{ km}^2$$

2. Convert 9 700 000 m² to hm²

$$9\,700\,000 \text{ m}^2 \div 100 \div 100 = 970 \text{ hm}^2$$

3. Convert 0.8608 hm² to m²

$$0.8608 \text{ hm}^2 \times 100 \times 100 = 8608 \text{ m}^2$$

4. Convert 150 000 m² to km²

$$150\,000 \text{ m}^2 \div 100 \div 100 \div 100 = 0.15 \text{ km}^2$$

5. Convert 75 780 000 000 m² to km²

$$75\,780\,000\,000 \text{ m}^2 \div 100 \div 100 \div 100 = 75\,780 \text{ km}^2$$

6. Convert 97.6 km² to hm²

$$97.6 \text{ km}^2 \times 100 = 9760 \text{ hm}^2$$

7. Convert 0.005457 km² to m²

$$0.005457 \text{ km}^2 \times 100 \times 100 \times 100 = 5457 \text{ m}^2$$

8. Convert 513 000 hm² to km²

$$513\,000 \text{ hm}^2 \div 100 = 5130 \text{ km}^2$$

9. Convert 4.563 hm² to m²

$$4.563 \text{ hm}^2 \times 100 \times 100 = 45\,630 \text{ m}^2$$

10. Convert 0.0108 km² to m²

$$0.0108 \text{ km}^2 \times 100 \times 100 \times 100 = 10\,800 \text{ m}^2$$

Converting Between m^2 , hm^2 and km^2 (I)

Name: _____

Date: _____

Score: _____ /10

Complete each conversion. Symbols for copying and pasting: $\times \div ^2 ^3$.



1. Convert 19 000 000 m^2 to hm^2
2. Convert 8 520 000 m^2 to hm^2
3. Convert 76 590 000 m^2 to km^2
4. Convert 0.009497 km^2 to m^2
5. Convert 9400 hm^2 to km^2
6. Convert 0.6955 km^2 to m^2
7. Convert 0.45 km^2 to hm^2
8. Convert 0.00002644 km^2 to m^2
9. Convert 4.9 km^2 to hm^2
10. Convert 227 300 000 m^2 to hm^2

Converting Between m², hm² and km² (I) Answers

Name: _____

Date: _____

Score: _____ /10

Complete each conversion. Symbols for copying and pasting: $\times \div ^2 ^3$.



1. Convert 19 000 000 m² to hm²
 $19\ 000\ 000\ \text{m}^2 \div 100 \div 100 = 1900\ \text{hm}^2$
2. Convert 8 520 000 m² to hm²
 $8\ 520\ 000\ \text{m}^2 \div 100 \div 100 = 852\ \text{hm}^2$
3. Convert 76 590 000 m² to km²
 $76\ 590\ 000\ \text{m}^2 \div 100 \div 100 \div 100 = 76.59\ \text{km}^2$
4. Convert 0.009497 km² to m²
 $0.009497\ \text{km}^2 \times 100 \times 100 \times 100 = 9497\ \text{m}^2$
5. Convert 9400 hm² to km²
 $9400\ \text{hm}^2 \div 100 = 94\ \text{km}^2$
6. Convert 0.6955 km² to m²
 $0.6955\ \text{km}^2 \times 100 \times 100 \times 100 = 695\ 500\ \text{m}^2$
7. Convert 0.45 km² to hm²
 $0.45\ \text{km}^2 \times 100 = 45\ \text{hm}^2$
8. Convert 0.00002644 km² to m²
 $0.00002644\ \text{km}^2 \times 100 \times 100 \times 100 = 26.44\ \text{m}^2$
9. Convert 4.9 km² to hm²
 $4.9\ \text{km}^2 \times 100 = 490\ \text{hm}^2$
10. Convert 227 300 000 m² to hm²
 $227\ 300\ 000\ \text{m}^2 \div 100 \div 100 = 22\ 730\ \text{hm}^2$

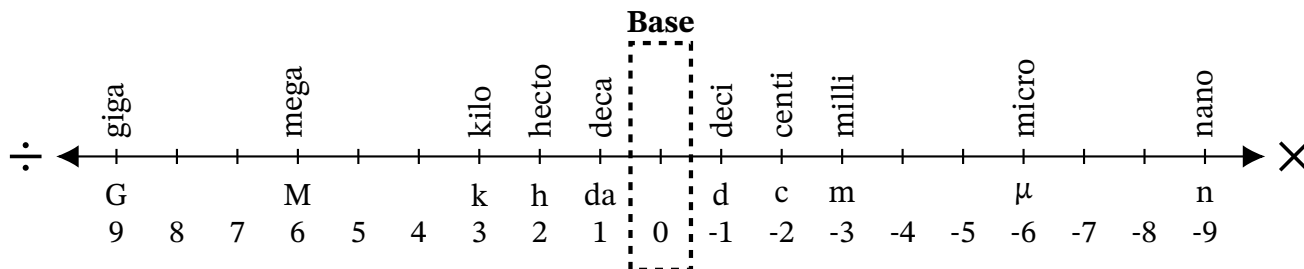
Converting Between m^2 , hm^2 and km^2 (J)

Name: _____

Date: _____

Score: _____ /10

Complete each conversion. Symbols for copying and pasting: $\times \div ^2 ^3$.



1. Convert 0.45 km^2 to hm^2
2. Convert $9\,500\,000\,000 \text{ m}^2$ to km^2
3. Convert $5\,501\,000 \text{ hm}^2$ to km^2
4. Convert 0.00434 km^2 to m^2
5. Convert 0.0125 hm^2 to m^2
6. Convert $278\,100 \text{ m}^2$ to hm^2
7. Convert 0.000361 hm^2 to m^2
8. Convert $865\,900\,000\,000 \text{ m}^2$ to km^2
9. Convert $650\,200\,000\,000 \text{ m}^2$ to km^2
10. Convert 0.0395 km^2 to hm^2

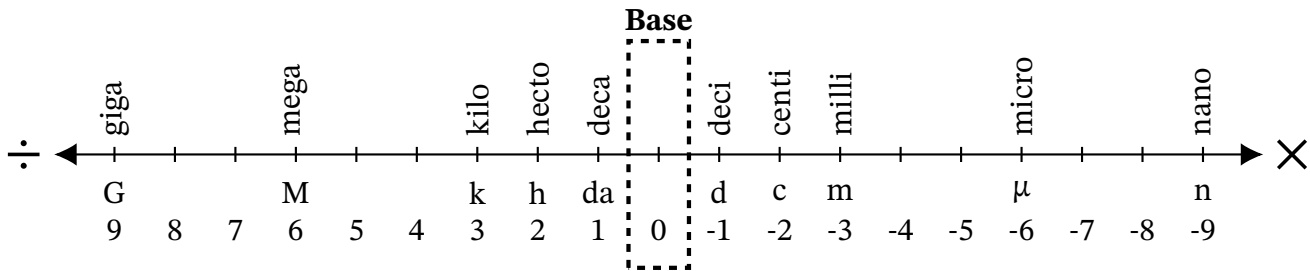
Converting Between m², hm² and km² (J) Answers

Name: _____

Date: _____

Score: _____ /10

Complete each conversion. Symbols for copying and pasting: $\times \div ^2 ^3$.



1. Convert 0.45 km² to hm²

$$0.45 \text{ km}^2 \times 100 = 45 \text{ hm}^2$$

2. Convert 9 500 000 000 m² to km²

$$9\,500\,000\,000 \text{ m}^2 \div 100 \div 100 \div 100 = 9500 \text{ km}^2$$

3. Convert 5 501 000 hm² to km²

$$5\,501\,000 \text{ hm}^2 \div 100 = 55\,010 \text{ km}^2$$

4. Convert 0.00434 km² to m²

$$0.00434 \text{ km}^2 \times 100 \times 100 \times 100 = 4340 \text{ m}^2$$

5. Convert 0.0125 hm² to m²

$$0.0125 \text{ hm}^2 \times 100 \times 100 = 125 \text{ m}^2$$

6. Convert 278 100 m² to hm²

$$278\,100 \text{ m}^2 \div 100 \div 100 = 27.81 \text{ hm}^2$$

7. Convert 0.000361 hm² to m²

$$0.000361 \text{ hm}^2 \times 100 \times 100 = 3.61 \text{ m}^2$$

8. Convert 865 900 000 000 m² to km²

$$865\,900\,000\,000 \text{ m}^2 \div 100 \div 100 \div 100 = 865\,900 \text{ km}^2$$

9. Convert 650 200 000 000 m² to km²

$$650\,200\,000\,000 \text{ m}^2 \div 100 \div 100 \div 100 = 650\,200 \text{ km}^2$$

10. Convert 0.0395 km² to hm²

$$0.0395 \text{ km}^2 \times 100 = 3.95 \text{ hm}^2$$