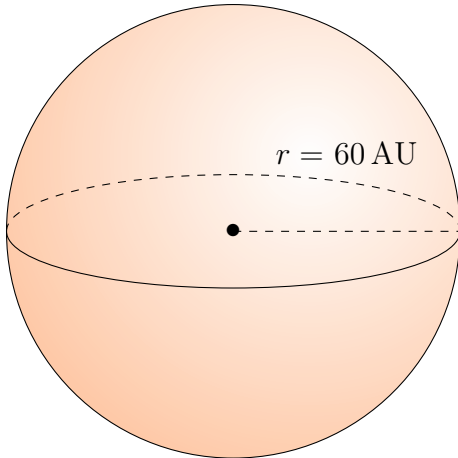


## Surface Area and Volume of Spheres (B)

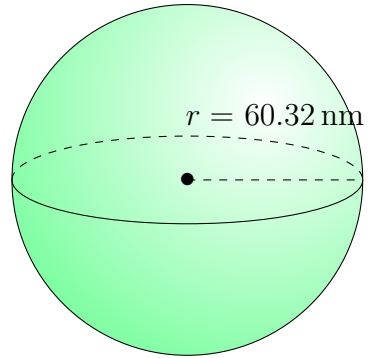
Calculate the surface area and volume for each sphere.

$$\text{Surface Area} = 4\pi r^2 \quad \text{Volume} = \frac{4}{3}\pi r^3$$

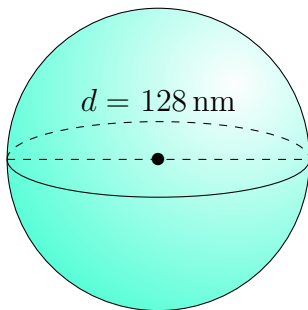
1.



2.



3.



4.

