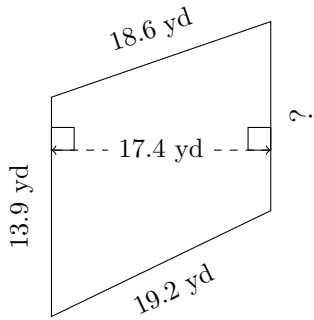


Trapezium Measurements (B)

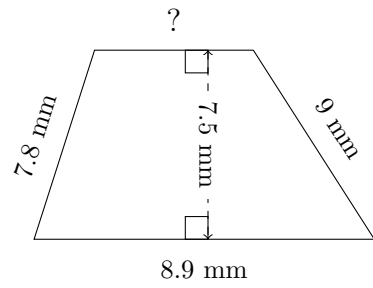
Calculate the missing measurements for each trapezium.

1.



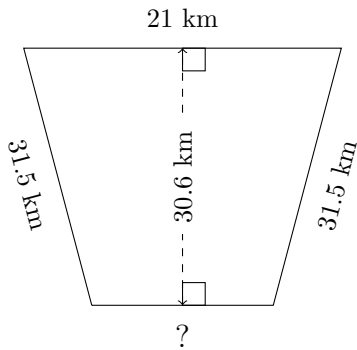
$P = 62.7$ yd
 $A = ?$

2.



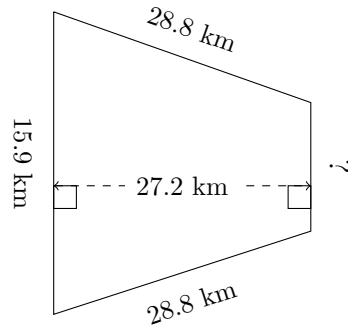
$P = 30.8$ mm
 $A = ?$

3.



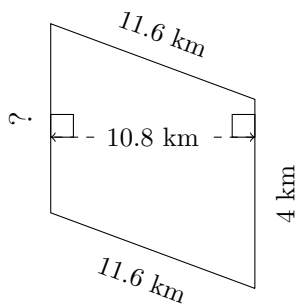
$P = 96$ km
 $A = ?$

4.



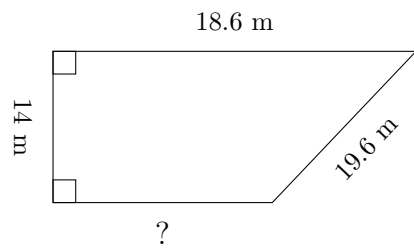
$P = 82.9$ km
 $A = ?$

5.



$P = 32.7$ km
 $A = ?$

6.

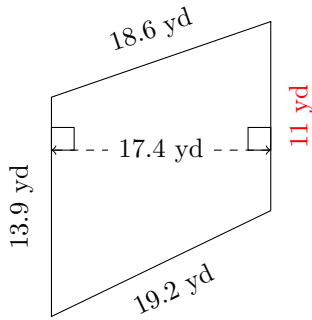


$P = 58.7$ m
 $A = ?$

Trapezium Measurements (B) Answers

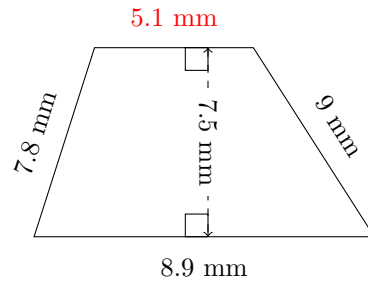
Calculate the missing measurements for each trapezium.

1.



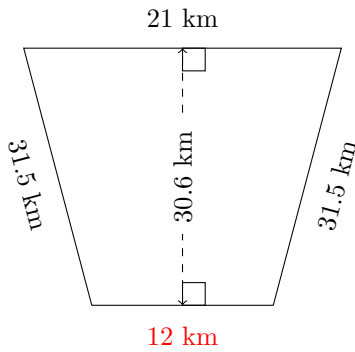
$P = 62.7 \text{ yd}$
 $A = 216.63 \text{ yd}^2$

2.



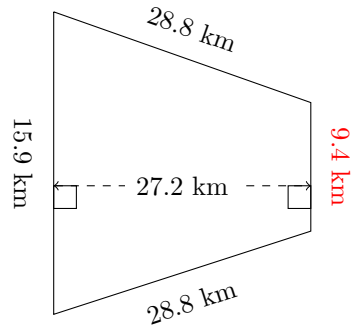
$P = 30.8 \text{ mm}$
 $A = 52.5 \text{ mm}^2$

3.



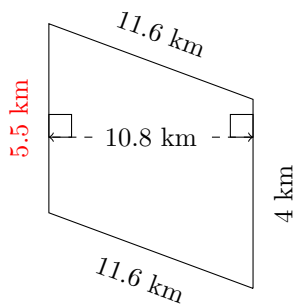
$P = 96 \text{ km}$
 $A = 504.9 \text{ km}^2$

4.



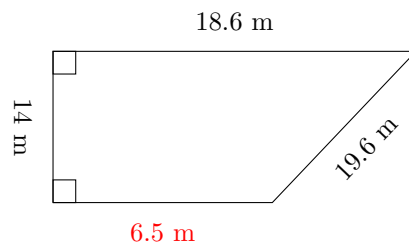
$P = 82.9 \text{ km}$
 $A = 344.08 \text{ km}^2$

5.



$P = 32.7 \text{ km}$
 $A = 51.3 \text{ km}^2$

6.



$P = 58.7 \text{ m}$
 $A = 175.7 \text{ m}^2$