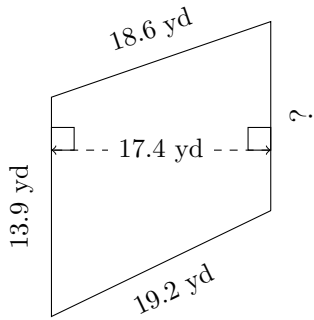


Trapezium Measurements (B)

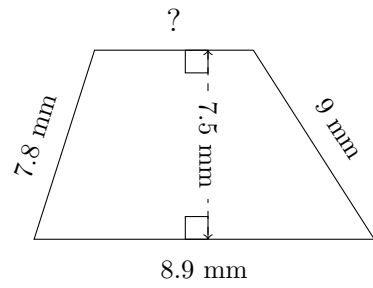
Calculate the missing measurements for each trapezium.

1.



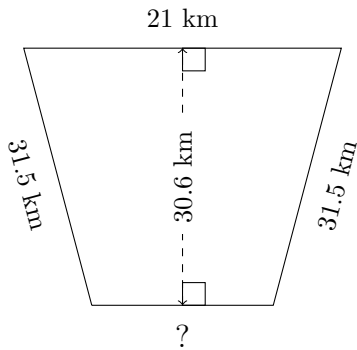
$P = 62.7 \text{ yd}$
 $A = ?$

2.



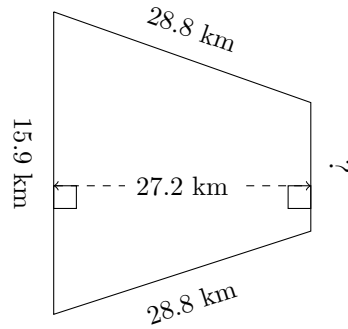
$P = 30.8 \text{ mm}$
 $A = ?$

3.



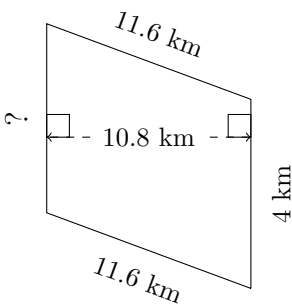
$P = 96 \text{ km}$
 $A = ?$

4.



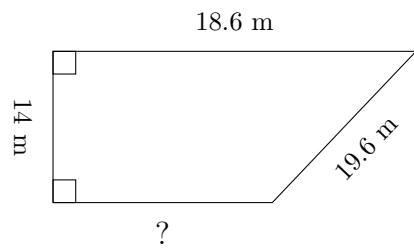
$P = 82.9 \text{ km}$
 $A = ?$

5.



$P = 32.7 \text{ km}$
 $A = ?$

6.



$P = 58.7 \text{ m}$
 $A = ?$