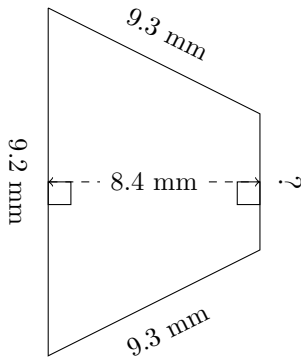


Trapezium Measurements (C)

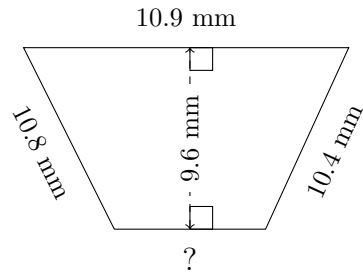
Calculate the missing measurements for each trapezium.

1.



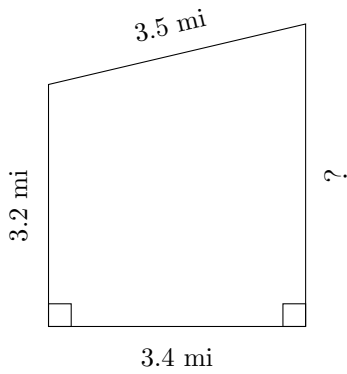
$P = 31.4 \text{ mm}$
 $A = ?$

2.



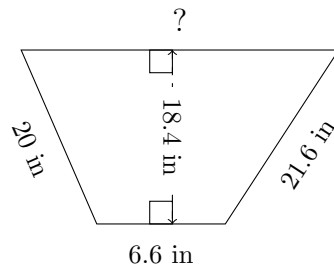
$P = 37.1 \text{ mm}$
 $A = ?$

3.



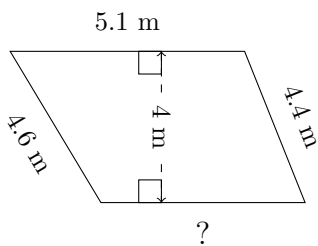
$P = 14.1 \text{ mi}$
 $A = ?$

4.



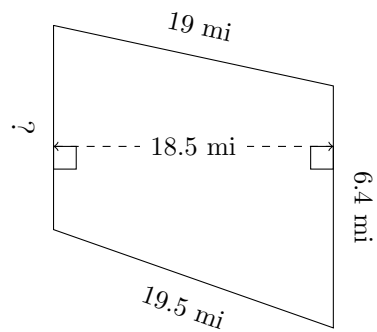
$P = 66.4 \text{ in}$
 $A = ?$

5.



$P = 18.7 \text{ m}$
 $A = ?$

6.



$P = 52 \text{ mi}$
 $A = ?$